



分数4

○分の1だけ色をぬる

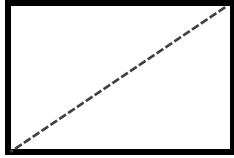


日にち： 月 日


名まえ _____

1 つぎの大きさに色をぬりましょう。


① $\frac{1}{2}$



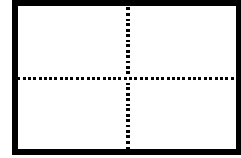
② $\frac{1}{5}$



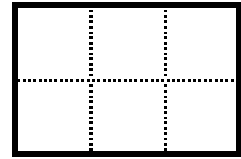
③ $\frac{1}{4}$



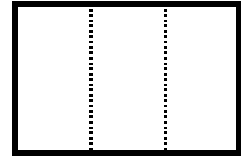
④ $\frac{1}{4}$




⑤ $\frac{1}{6}$



⑥ $\frac{1}{3}$

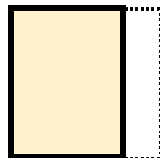


2 もとの大きさの $\frac{1}{4}$ はどれですか。

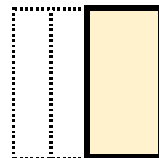


もとの大きさ

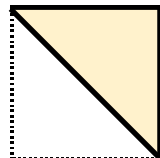
ア



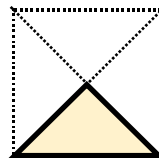
イ




ウ



エ



答え： _____



分数4

○分の1だけ色をぬる

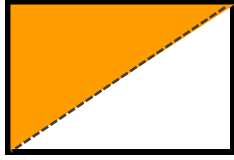


日にち： 月 日


名まえ _____

1 つぎの大きさに色をぬりましょう。


① $\frac{1}{2}$



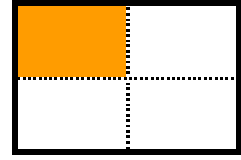
② $\frac{1}{5}$



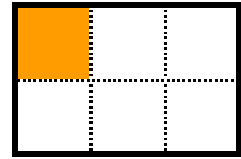
③ $\frac{1}{4}$




④ $\frac{1}{4}$




⑤ $\frac{1}{6}$



⑥ $\frac{1}{3}$

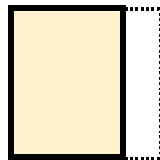


2 もとの大きさの $\frac{1}{4}$ はどれですか。

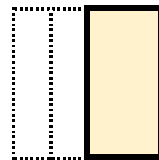


もとの大きさ

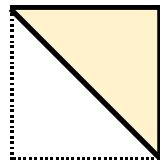
ア



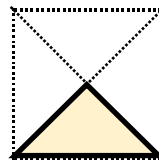
イ



ウ



エ



答え：

エ

