

分数4

○分の1だけ色をぬる




日にち： 月 日


名まえ

1 つぎの大きさに色をぬりましょう。

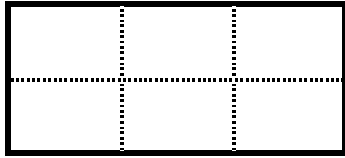
① $\frac{1}{7}$




② $\frac{1}{5}$



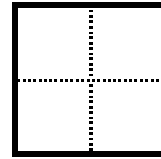
③ $\frac{1}{6}$



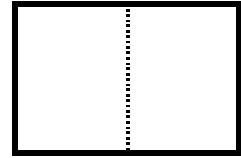
④ $\frac{1}{3}$




⑤ $\frac{1}{4}$



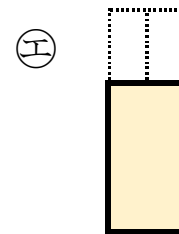
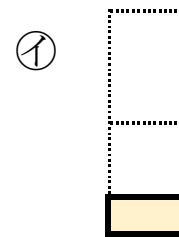
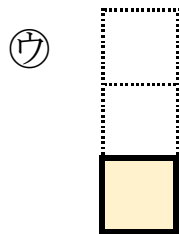
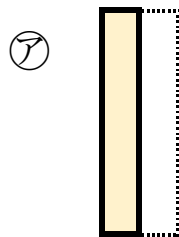
⑥ $\frac{1}{2}$



2 もとの大きさの $\frac{1}{3}$ はどれですか。



もとの大きさ



答え：



分数4

○分の一だけ色をぬる




日にち： 月 日

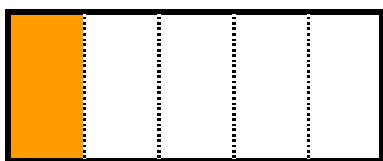
名まえ

1 つぎの大きさに色をぬりましょう。

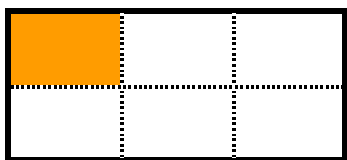
① $\frac{1}{7}$




② $\frac{1}{5}$



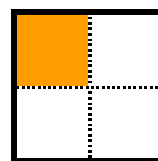
③ $\frac{1}{6}$




④ $\frac{1}{3}$




⑤ $\frac{1}{4}$



⑥ $\frac{1}{2}$

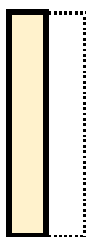


2 もとの大きさの $\frac{1}{3}$ はどれですか。




もとの大きさ

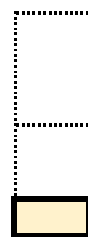
ア



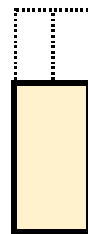
ウ



イ



エ



答え： **ウ**