



長方形と正方形 3

● 直角三角形を見つけよう

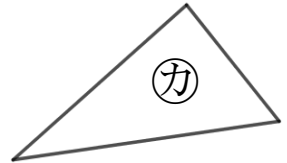
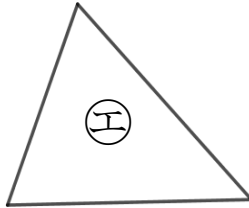
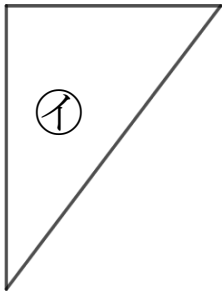
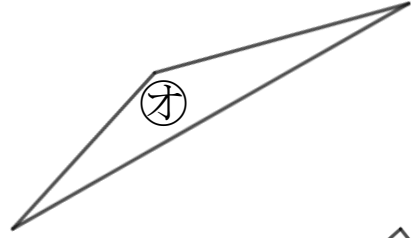
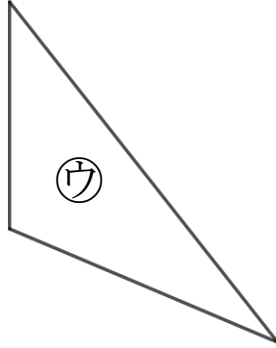
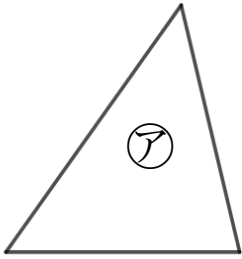
12

日にち： 月 日

名まえ _____

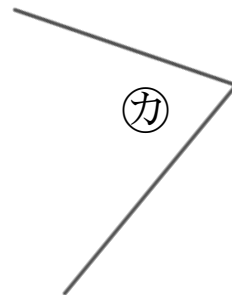
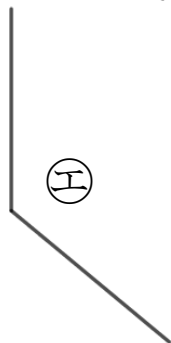
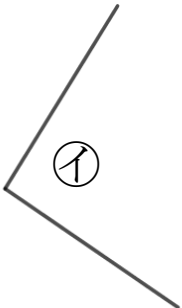
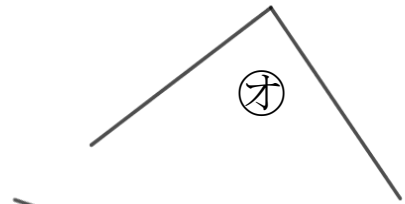
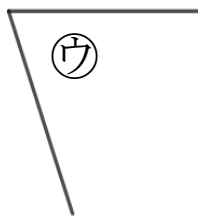
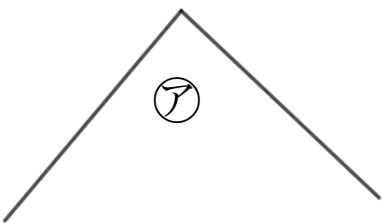
1 直角三角形はどれですか。

三角じょうぎをつかって、ぜんぶ見つけましょう。



答え： _____

2 直角はどれですか。三角じょうぎをつかってぜんぶ見つけましょう。



答え： _____



長方形と正方形 3

◎ 直角三角形をみつけよう

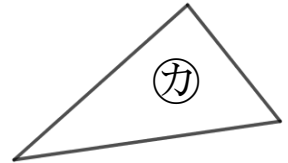
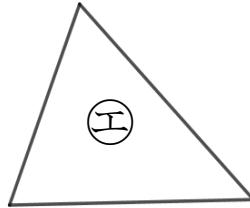
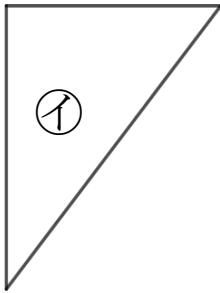
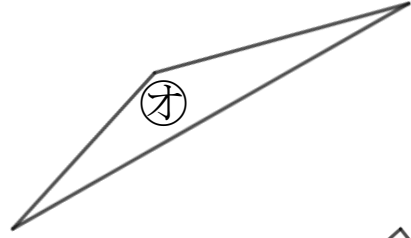
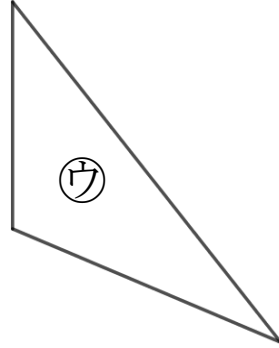
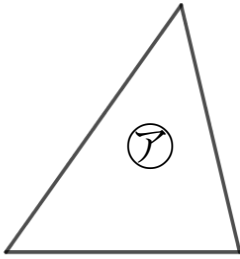
12

日にち： 月 日

名まえ _____

1 直角三角形はどれですか。

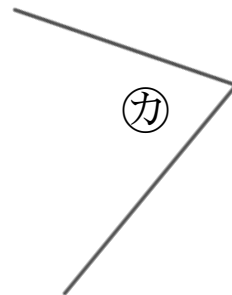
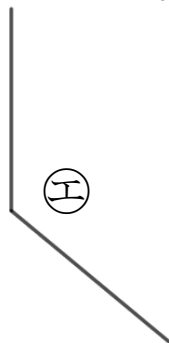
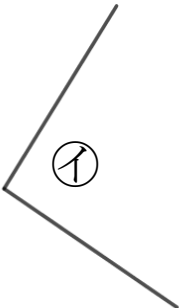
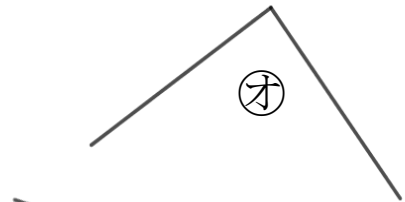
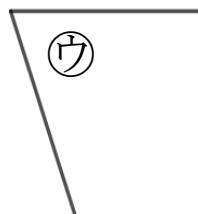
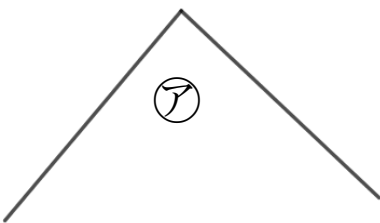
三角じょうぎをつかって、ぜんぶ見つけましょう。



答え：

イ, カ

2 直角はどれですか。三角じょうぎをつかってぜんぶ見つけましょう。



答え：

ア, イ, オ

