

# かけ算 6



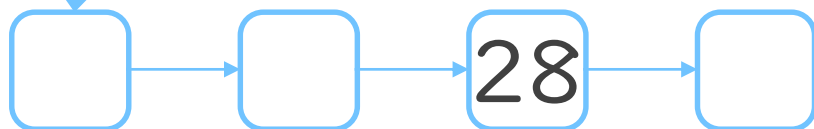
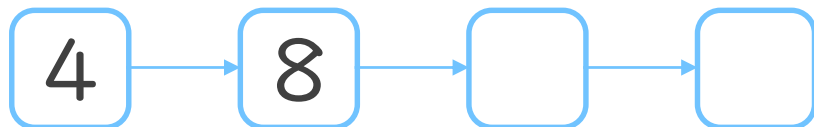
● 4のだんの九九



日にち：            月            日

名まえ \_\_\_\_\_

1. つぎの  にあてはまる数を書こう



2. つぎのけいさんをしましょう


①  $4 \times 4 =$

②  $4 \times 9 =$

③  $4 \times 1 =$

④  $4 \times 3 =$

⑤  $4 \times 7 =$



# かけ算 6


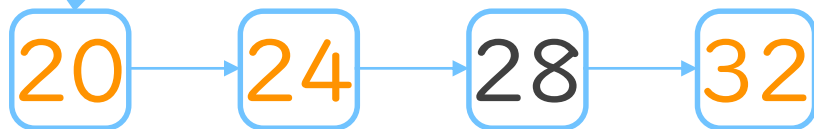
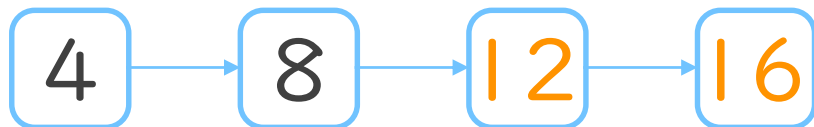
4のだんの九九



日にち：            月            日

名まえ \_\_\_\_\_

1. つぎの  にあてはまる数を書こう



2. つぎのけいさんをしましょう

①  $4 \times 4 = 16$

②  $4 \times 9 = 36$

③  $4 \times 1 = 4$

④  $4 \times 3 = 12$

⑤  $4 \times 7 = 28$