



# 分数4

○分の1だけ色をぬる

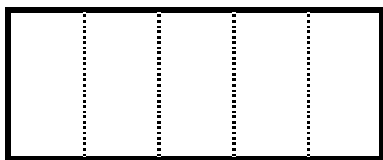


日にち： 月 日

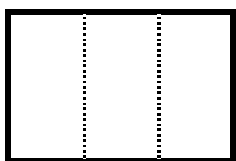
名まえ

1 つぎの大きさに色をぬりましょう。


①  $\frac{1}{5}$



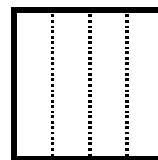
②  $\frac{1}{3}$



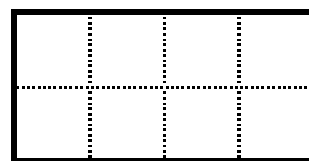
③  $\frac{1}{2}$



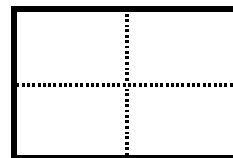
④  $\frac{1}{4}$




⑤  $\frac{1}{8}$



⑥  $\frac{1}{4}$




2 もとの大きさの  $\frac{1}{6}$  はどれですか。




もとの大きさ

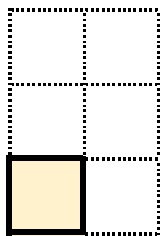
ア



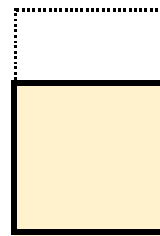
イ



ウ



エ



答え：



# 分数4

○分の1だけ色をぬる

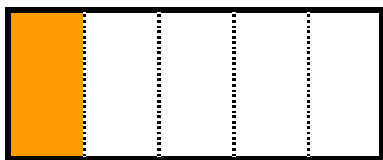


日にち：            月            日

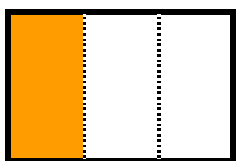
名まえ

1 つぎの大きさに色をぬりましょう。


①  $\frac{1}{5}$




②  $\frac{1}{3}$



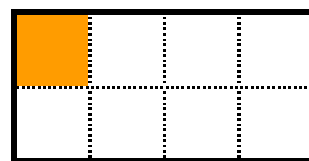
③  $\frac{1}{2}$



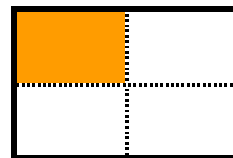
④  $\frac{1}{4}$




⑤  $\frac{1}{8}$



⑥  $\frac{1}{4}$




2 もとの大きさの  $\frac{1}{6}$  はどれですか。

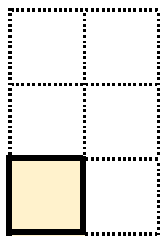


もとの大きさ

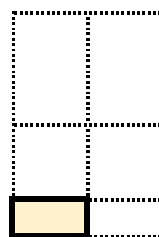
ア



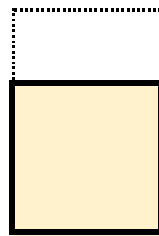
ウ



イ



エ



答え： **ウ**