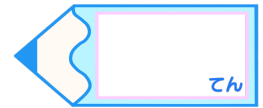


分数4

○分の一だけ色をぬる



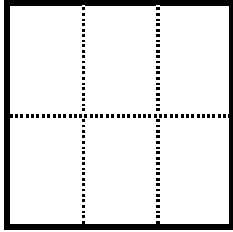
目指せ80点!



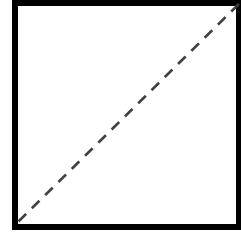
名まえ

1 つぎの大きさに色をぬりましょう。(各20点)


① $\frac{1}{6}$




③ $\frac{1}{2}$




② $\frac{1}{4}$



④ $\frac{1}{3}$

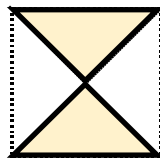


2 もとの大きさの $\frac{1}{4}$ はどれですか。(20点)

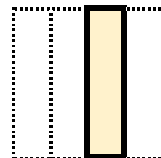


もとの大きさ

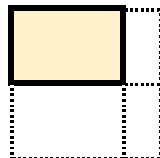
ア



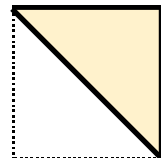
イ




ウ



エ



答え：

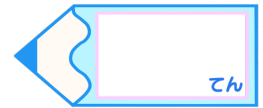


分数4

○分の一だけ色をぬる

15

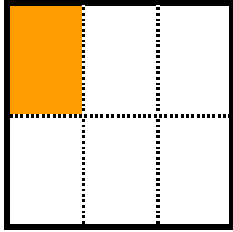
目指せ80点!




名まえ

1 つぎの大きさに色をぬりましょう。(各20点)


① $\frac{1}{6}$




③ $\frac{1}{2}$




② $\frac{1}{4}$



④ $\frac{1}{3}$

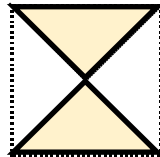


2 もとの大きさの $\frac{1}{4}$ はどれですか。(20点)

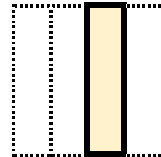


もとの大きさ

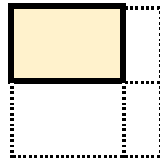
ア



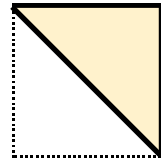
イ



ウ



エ



答え：

イ

