



計算のくふう7

● たし算のくふう
(何十といくつに分ける)

15

目指せ100点!



名まえ _____

・ くふうして計算しましょう。(各25点)

① $57 + 8 =$

② $3 + 39 =$

③ $47 + 4 =$

④ $7 + 63 =$



計算のくふう7

● たし算のくふう
(何十といくつに分ける)

15

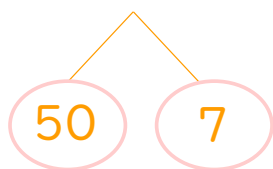
目指せ100点!



名まえ _____

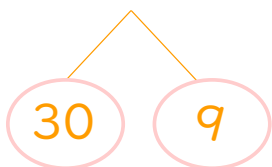
・ くふうして計算しましょう。(各25点)

① $57 + 8 = 65$



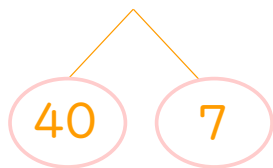
$$\begin{array}{l} 7 + 8 = 15 \\ 50 + 15 = 65 \end{array}$$

② $3 + 39 = 42$



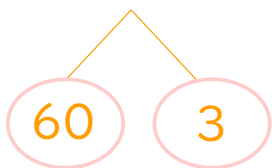
$$\begin{array}{l} 3 + 9 = 12 \\ 12 + 30 = 42 \end{array}$$

③ $47 + 4 = 51$



$$\begin{array}{l} 7 + 4 = 11 \\ 40 + 11 = 51 \end{array}$$

④ $7 + 63 = 70$



$$\begin{array}{l} 7 + 3 = 10 \\ 10 + 60 = 70 \end{array}$$