



計算のくふう8

◎ たし算のくふう
(何十をつくる)

15

目指せ100点!



名まえ _____

・ くふうして計算しましょう。(各25点)

① $67 + 9 =$

② $6 + 48 =$

③ $35 + 7 =$

④ $5 + 78 =$



計算のくふう8

◎ たし算のくふう
(何十をつくる)

15

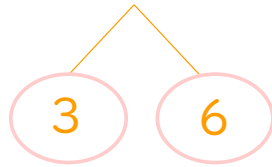
目指せ100点!



名まえ _____

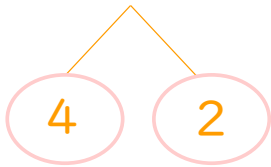
・ くふうして計算しましょう。(各25点)

① $67 + 9 = 76$



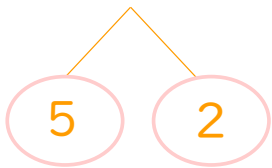
$$\left(\begin{array}{l} 67 + 3 = 70 \\ 70 + 6 = 76 \end{array} \right)$$

② $6 + 48 = 54$



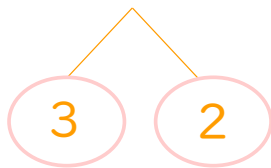
$$\left(\begin{array}{l} 2 + 48 = 50 \\ 50 + 4 = 54 \end{array} \right)$$

③ $35 + 7 = 42$



$$\left(\begin{array}{l} 35 + 5 = 40 \\ 40 + 2 = 42 \end{array} \right)$$

④ $5 + 78 = 83$



$$\left(\begin{array}{l} 2 + 78 = 80 \\ 80 + 3 = 83 \end{array} \right)$$

