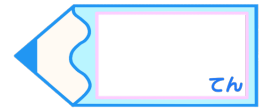


分数3

● もとの大きさの○分の一をさがす


15

目指せ80点!



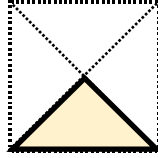
名まえ \_\_\_\_\_

1 もとの大きさの  $\frac{1}{2}$  はどれですか。(20点)

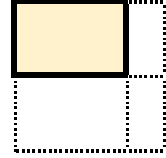


もとの大きさ

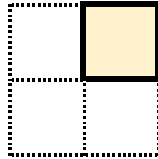
ア



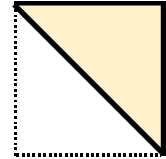
イ



ウ



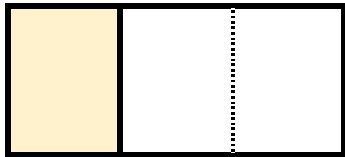
エ



答え: \_\_\_\_\_

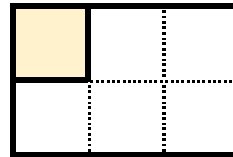
2 色をぬったぶぶんはもとの大きさの何分の一ですか。(各20点)

①




答え: \_\_\_\_\_

③



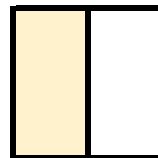
答え: \_\_\_\_\_

②




答え: \_\_\_\_\_

④



答え: \_\_\_\_\_



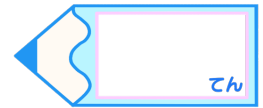


分数3

● もとの大きさの○分の一をさがす


15

目指せ80点!



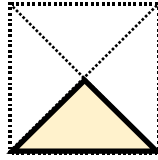
名まえ

1 もとの大きさの  $\frac{1}{2}$  はどれですか。(20点)

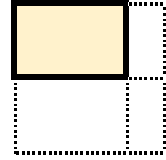


もとの大きさ

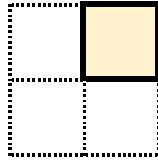
ア



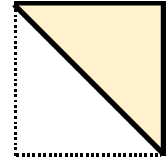
イ



ウ



エ

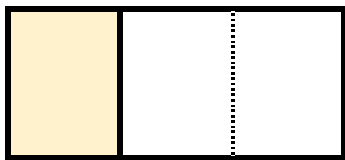


答え：

エ

2 色をぬったぶぶんはもとの大きさの何分の一ですか。(各20点)

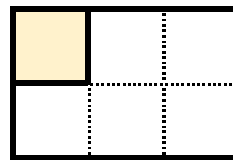
①



答え：

$\frac{1}{3}$

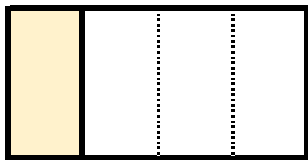
③



答え：

$\frac{1}{6}$

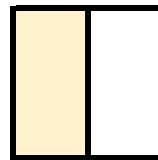
②



答え：

$\frac{1}{4}$

④



答え：

$\frac{1}{2}$

