


# かけ算 10

8のだんの九九



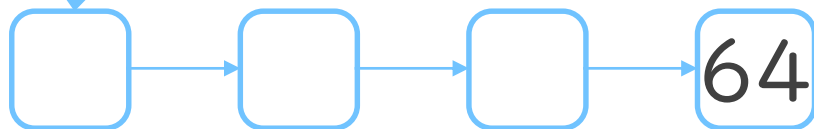
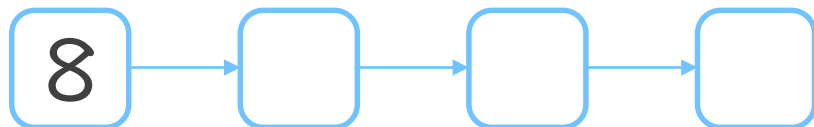
15

日にち： 月 日

名まえ \_\_\_\_\_



1. つぎの  にあてはまる数を書こう



2. つぎのけいさんをしましょう

①  $8 \times 8 =$


②  $8 \times 2 =$

③  $8 \times 5 =$

④  $8 \times 6 =$

⑤  $8 \times 9 =$






# かけ算 10

8のだんの九九


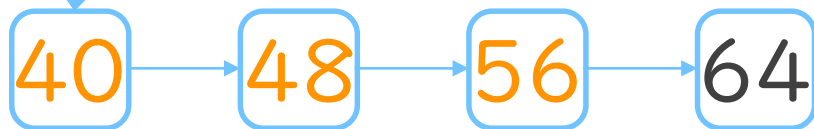
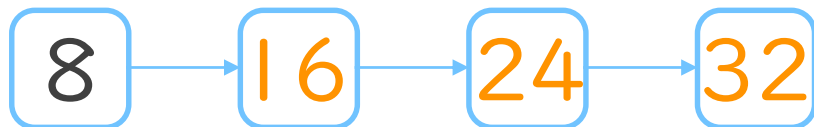
15

日にち： 月 日

名まえ \_\_\_\_\_



1. つぎの  にあてはまる数を書こう



2. つぎのけいさんをしましょう

①  $8 \times 8 = 64$

②  $8 \times 2 = 16$

③  $8 \times 5 = 40$

④  $8 \times 6 = 48$

⑤  $8 \times 9 = 72$

