

分数4

○分の一だけ色をぬる

16


目指せ80点!




名まえ

1 つぎの大きさに色をぬりましょう。(各20点)

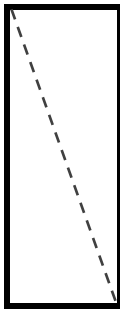
①  $\frac{1}{3}$



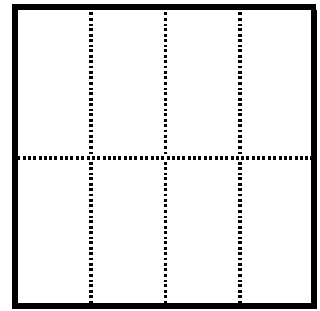
③  $\frac{1}{5}$




②  $\frac{1}{2}$



④  $\frac{1}{8}$

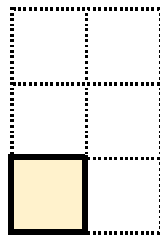


2 もとの大きさの  $\frac{1}{6}$  はどれですか。(20点)

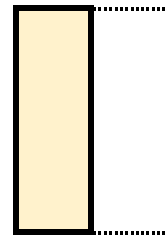


もとの大きさ

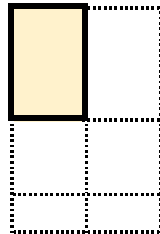
ア



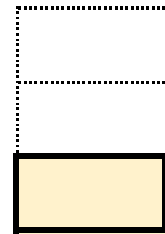
イ




ウ



エ



答え：

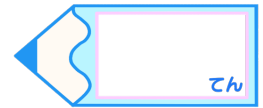


分数4

○分の一だけ色をぬる

16


目指せ80点!




名まえ

1 つぎの大きさに色をぬりましょう。(各20点)


①  $\frac{1}{3}$



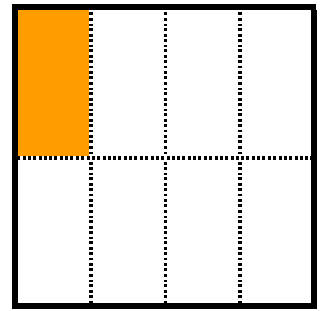
③  $\frac{1}{5}$




②  $\frac{1}{2}$



④  $\frac{1}{8}$

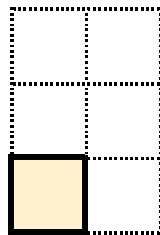


2 もとの大きさの  $\frac{1}{6}$  はどれですか。(20点)

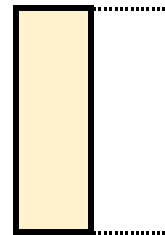


もとの大きさ

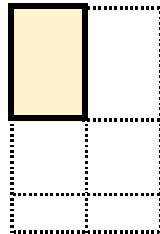
ア



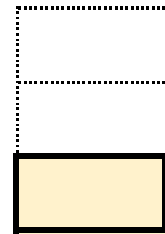
イ



ウ



エ



答え：

ア

