



計算のくふう8

◎ たし算のくふう
(何十をつくる)

16

目指せ100点!



名まえ _____

・ くふうして計算しましょう。(各25点)

① $47 + 6 =$

② $8 + 23 =$

③ $14 + 8 =$

④ $9 + 66 =$



計算のくふう8

◎ たし算のくふう
(何十をつくる)

16

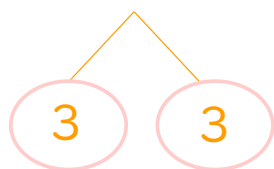
目指せ100点!



名まえ _____

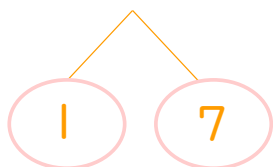
・ くふうして計算しましょう。(各25点)

① $47 + 6 = 53$



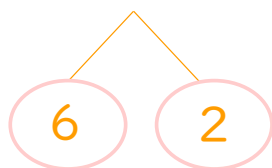
$$\left(\begin{array}{l} 47 + 3 = 50 \\ 50 + 3 = 53 \end{array} \right)$$

② $8 + 23 = 31$



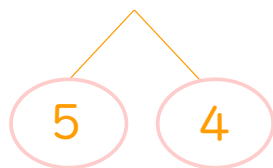
$$\left(\begin{array}{l} 7 + 23 = 30 \\ 30 + 1 = 31 \end{array} \right)$$

③ $14 + 8 = 22$



$$\left(\begin{array}{l} 14 + 6 = 20 \\ 20 + 2 = 22 \end{array} \right)$$

④ $9 + 66 = 75$



$$\left(\begin{array}{l} 4 + 66 = 70 \\ 70 + 5 = 75 \end{array} \right)$$

