



計算のくふう9

◎ ひき算のくふう
(何十といくつに分ける)

16

目指せ100点!



名まえ _____

・ くふうして計算しましょう。(各25点)

① $24 - 7 =$

② $6 + 66 =$

③ $53 - 9 =$

④ $42 - 4 =$




計算のくふう9

◎ ひき算のくふう
(何十といくつに分ける)

16

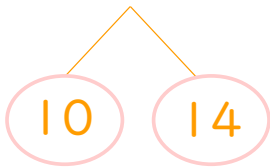
目指せ100点!



名まえ

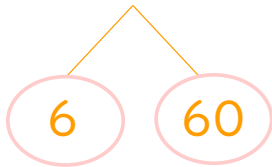
・ くふうして計算しましょう。(各25点)

① $24 - 7 = 17$



$$\left(\begin{array}{l} 14 - 7 = 7 \\ 10 + 7 = 17 \end{array} \right)$$

② $6 + 66 = 72$

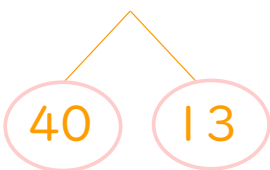


※別解

6は4と2
 $66 + 4 = 70$
 $70 + 2 = 72$

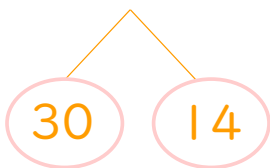
$$\left(\begin{array}{l} 6 + 6 = 12 \\ 60 + 12 = 72 \end{array} \right)$$

③ $53 - 9 = 44$



$$\left(\begin{array}{l} 13 - 9 = 4 \\ 40 + 4 = 44 \end{array} \right)$$

④ $42 - 4 = 38$



$$\left(\begin{array}{l} 12 - 4 = 8 \\ 30 + 8 = 38 \end{array} \right)$$

