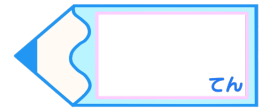


分数3

● もとの大きさの○分の一をさがす


16

目指せ80点!



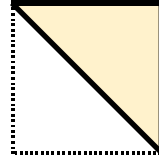
名まえ

1 もとの大きさの $\frac{1}{4}$ はどれですか。(20点)

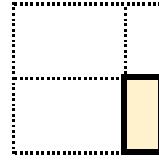


もとの大きさ

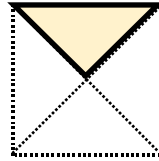
ア



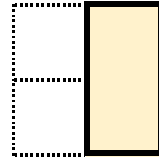
イ



ウ



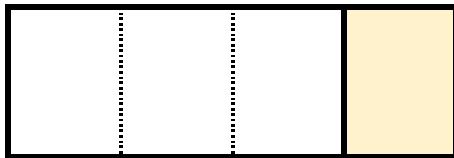
エ



答え：

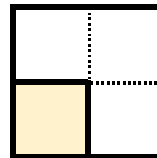
2 色をぬったぶぶんはもとの大きさの何分の一ですか。(各20点)

①




答え：

③




答え：

②




答え：

④



答え：



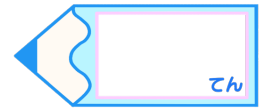


分数3

● もとの大きさの○分の一をさがす


16

目指せ80点!



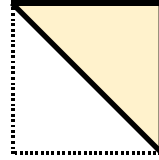
名まえ

1 もとの大きさの $\frac{1}{4}$ はどれですか。(20点)

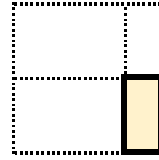


もとの大きさ


ア



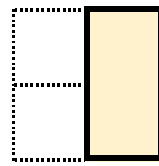
イ



ウ



エ

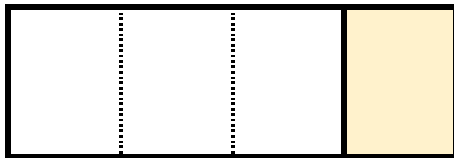


答え：

ウ

2 色をぬったぶぶんはもとの大きさの何分の一ですか。(各20点)

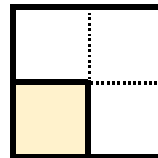
①



答え：

$\frac{1}{4}$


③



答え：

$\frac{1}{4}$


②



答え：

$\frac{1}{2}$

④



答え：

$\frac{1}{5}$

