



長さのたんい 3

● ものさしの見かた (cm)

16

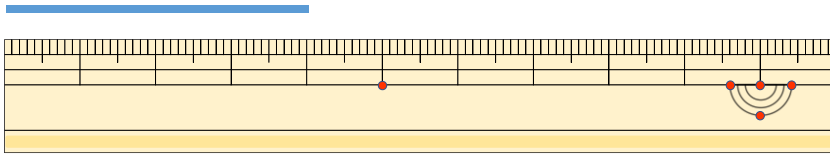
めざせ80点!



名まえ _____

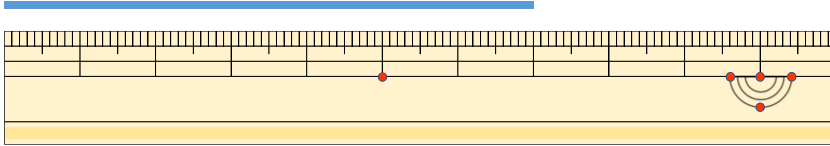
1 線の長さは何cmでしょう。(各20点)

①



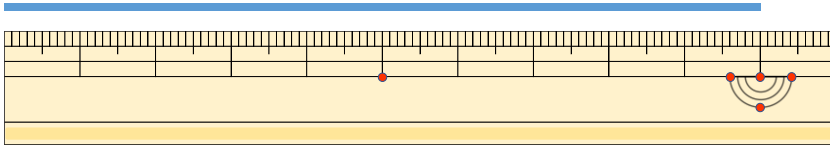
答え ()

②



答え ()


③



答え ()

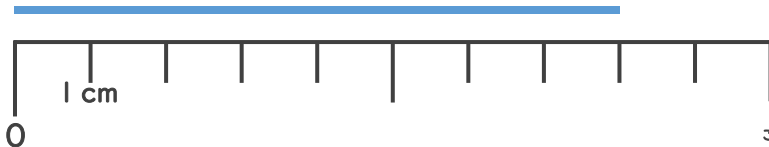
2 線の長さは何cmでしょう。(各20点)

①



答え ()

②



答え ()





長さのたんい 3

● ものさしの見かた (cm)

16

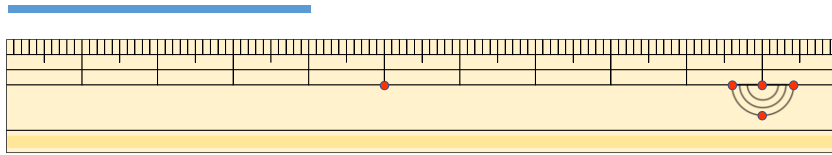
めざせ80点!



名まえ _____

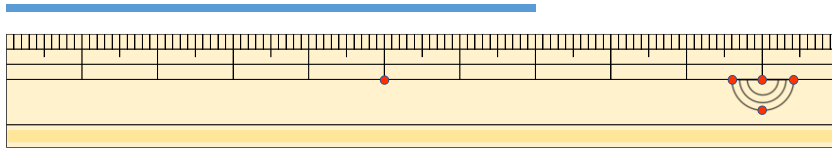
1 線の長さは何cmでしょう。(各20点)

①



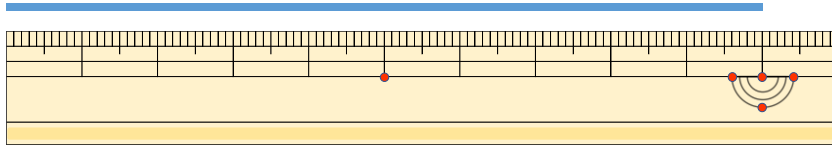
こた 答え (4 cm)

②



こた 答え (7 cm)


③



こた 答え (10cm)

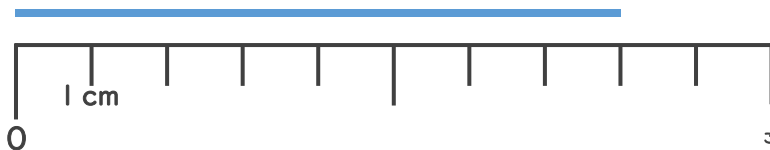
2 線の長さは何cmでしょう。(各20点)

①



こた 答え (3 cm)

②



こた 答え (8 cm)

