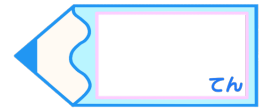


分数 2

色をぬった部分は何分の一？




目指せ80点!



名まえ

・色をぬったぶんはもとの大きさの何分の一ですか。(各20点)


①



答え：

\_\_\_\_\_

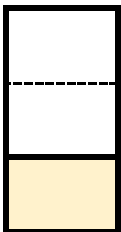
②



答え：

\_\_\_\_\_

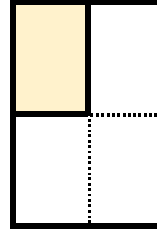
③



答え：

\_\_\_\_\_

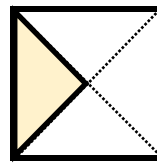
④



答え：


\_\_\_\_\_

⑤



答え：

\_\_\_\_\_

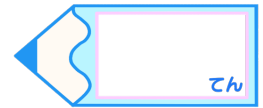


# 分数 2

色をぬった部分は何分の一？

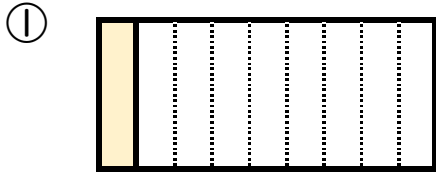
16

目指せ80点!

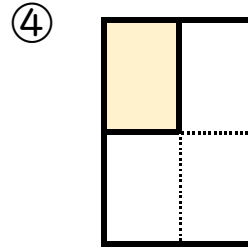


名まえ

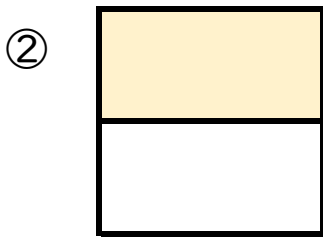
・色をぬったぶんはもとの大きさの何分の一ですか。(各20点)



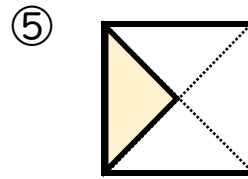
答え： $\frac{1}{9}$



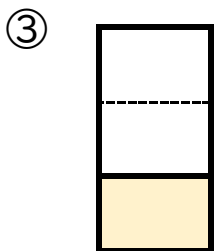
答え： $\frac{1}{4}$



答え： $\frac{1}{2}$



答え： $\frac{1}{4}$



答え： $\frac{1}{3}$