


# かけ算 5

2のだんの九九

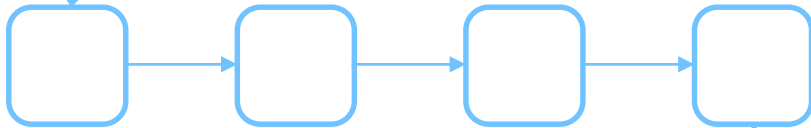
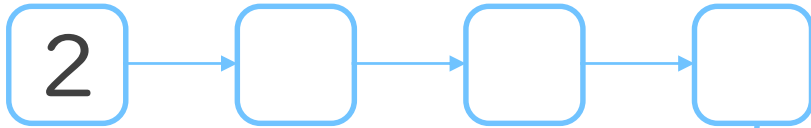


日にち： 月 日


名まえ \_\_\_\_\_



1. つぎの  にあてはまる数を書こう  
(ぜんぶせいかいで50点)



18



2. つぎのけいさんをしましょう  
(1もん10点ずつ)


①  $2 \times 3 =$

②  $2 \times 8 =$

③  $2 \times 4 =$

④  $2 \times 7 =$

⑤  $2 \times 2 =$




# かけ算 5

2のだんの九九


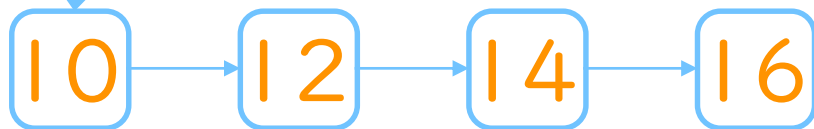
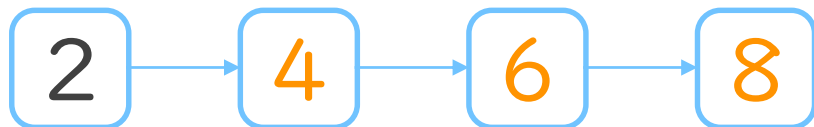


日にち： 月 日

名まえ \_\_\_\_\_



1. つぎの  にあてはまる数を書こう  
(ぜんぶせいかいで50点)



2. つぎのけいさんをしましょう  
(1もん10点ずつ)

①  $2 \times 3 = 6$

②  $2 \times 8 = 16$

③  $2 \times 4 = 8$

④  $2 \times 7 = 14$

⑤  $2 \times 2 = 4$