




かけ算 6

4のだんの九九

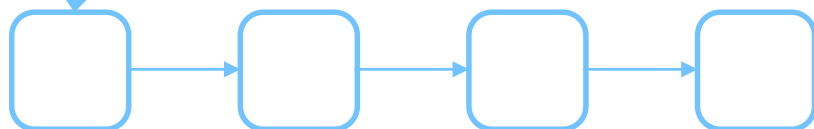
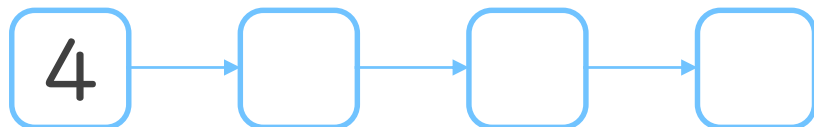


日にち： 月 日


名まえ _____



1. つぎの にあてはまる数を書こう



36



2. つぎのけいさんをしましょう

① $4 \times 3 =$

② $4 \times 8 =$

③ $4 \times 4 =$

④ $4 \times 7 =$

⑤ $4 \times 2 =$




かけ算 6

4のだんの九九


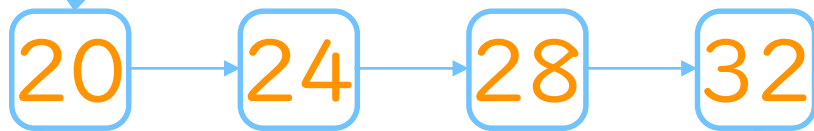
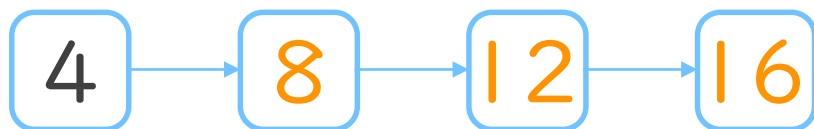


日にち： 月 日

名まえ _____



1. つぎの にあてはまる数を書こう



2. つぎのけいさんをしましょう

① $4 \times 3 = 12$

② $4 \times 8 = 32$

③ $4 \times 4 = 16$

④ $4 \times 7 = 28$

⑤ $4 \times 2 = 8$