


かけ算 4

5のだんの九九

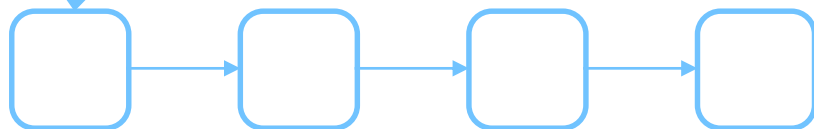
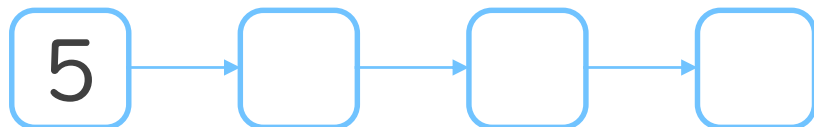


日にち： 月 日


名まえ _____



1. つぎの にあてはまる数を書こう
(ぜんぶせいかいで50点)



45



2. つぎのけいさんをしましょう
(1もん10点ずつ)


① $5 \times 3 =$

② $5 \times 8 =$

③ $5 \times 4 =$

④ $5 \times 7 =$

⑤ $5 \times 2 =$




かけ算 4

5のだんの九九


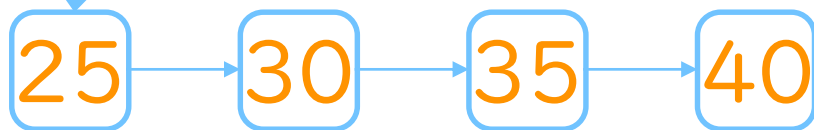
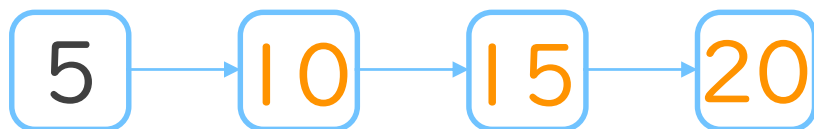


日にち： 月 日

名まえ _____



1. つぎの にあてはまる数を書こう
(ぜんぶせいかいで50点)



2. つぎのけいさんをしましょう
(1もん10点ずつ)

① $5 \times 3 = 15$

② $5 \times 8 = 40$

③ $5 \times 4 = 20$

④ $5 \times 7 = 35$

⑤ $5 \times 2 = 10$