



小数の意味と表し方2

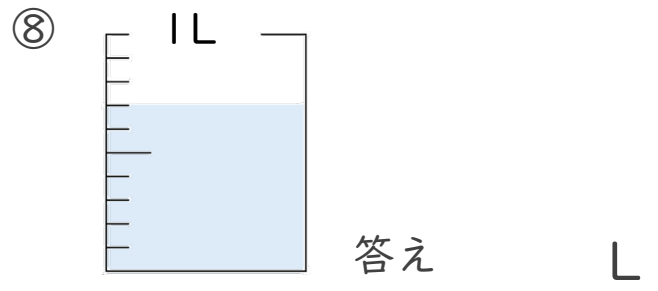
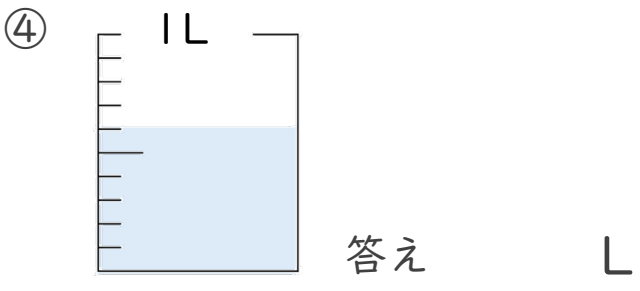
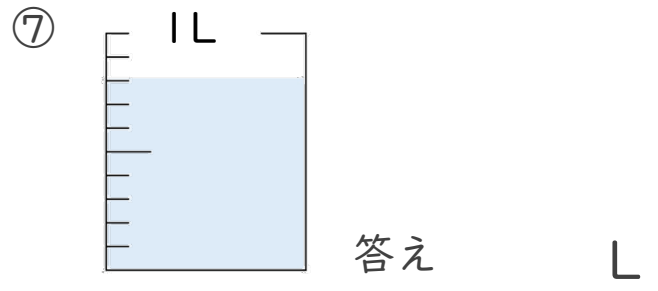
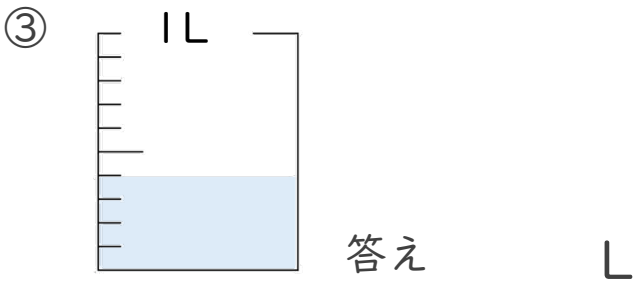
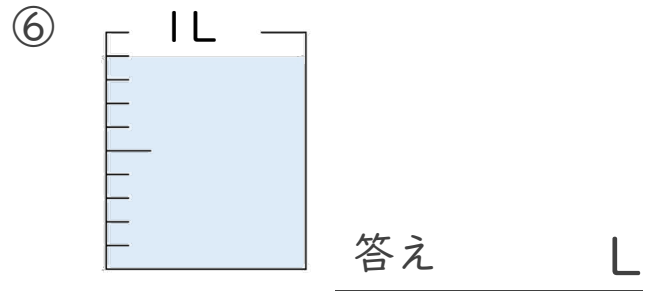
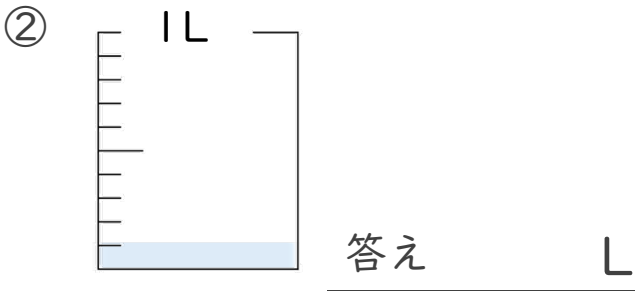
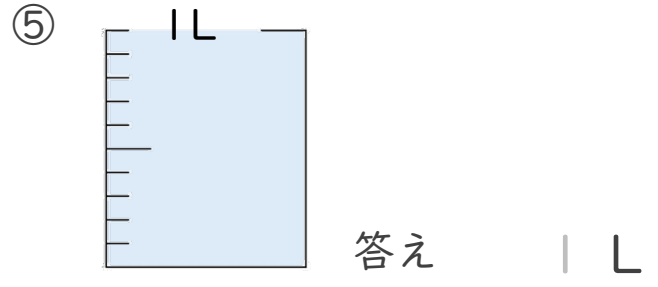
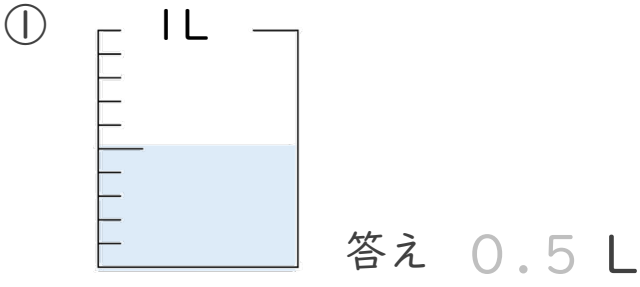
◎ 水のかさ (真小数)




日にち： 月 日

名まえ _____

・ 水のかさは、何Lでしょう。(うすい字はなぞりましょう。)





小数の意味と表し方2

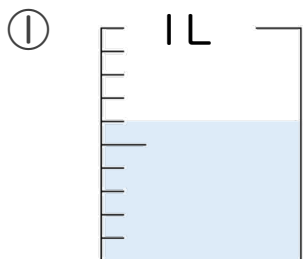
◎ 水のかさ (真小数)



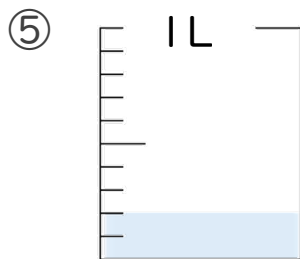
日にち： 月 日

名まえ _____

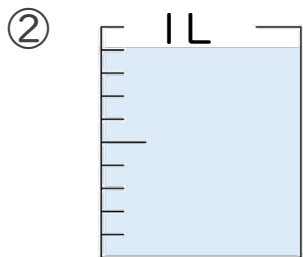
・ 水のかさは、何Lでしょう。(うすい字はなぞりましょう。)



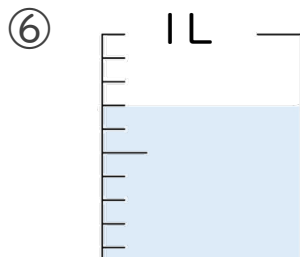
答え 0.6 L



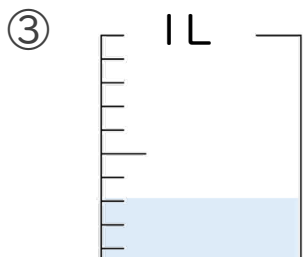
答え _____ L



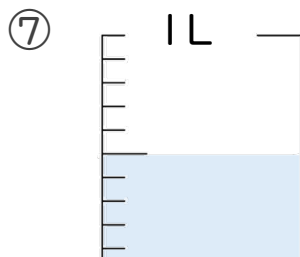
答え _____ L



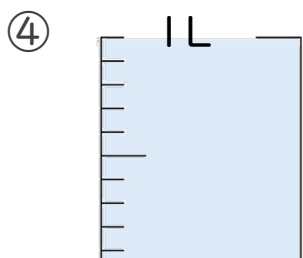
答え _____ L



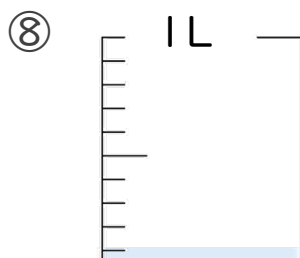
答え _____ L



答え _____ L




答え _____ L



答え _____ L





小数の意味と表し方2

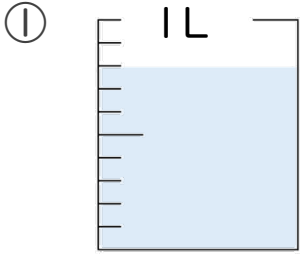
◎ 水のかさ (真小数)



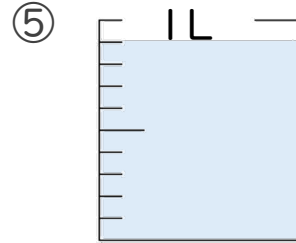
日にち： 月 日

名まえ _____

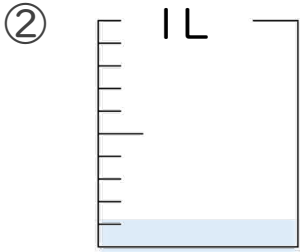
・ 水のかさは、何Lでしょう。(うすい字はなぞりましょう。)



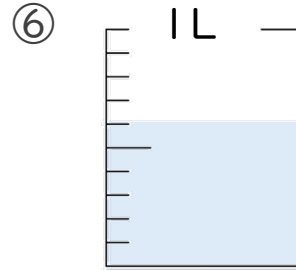
答え 0.8 L



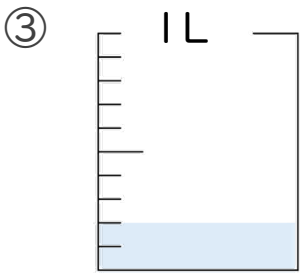
答え _____ L



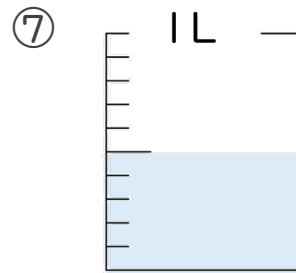
答え _____ L



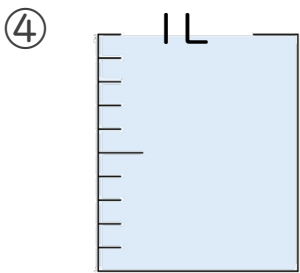
答え _____ L



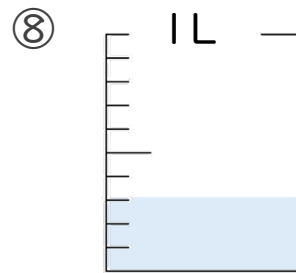
答え _____ L



答え _____ L




答え _____ L



答え _____ L





小数の意味と表し方2

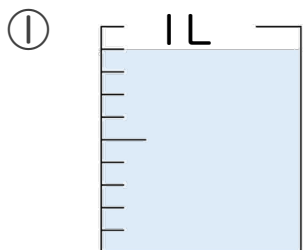
◎ 水のかさ (真小数)



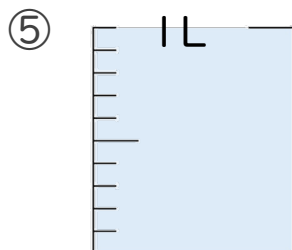
日にち： 月 日

名まえ _____

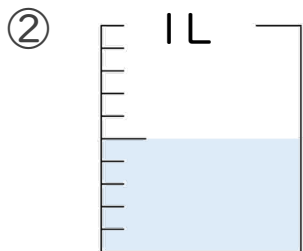
・ 水のかさは、何Lでしょう。(うすい字はなぞりましょう。)



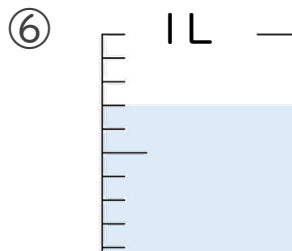
答え 0.9 L



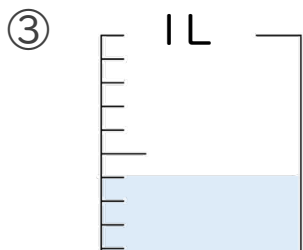
答え _____ L



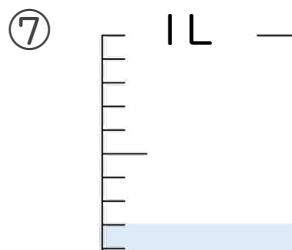
答え _____ L



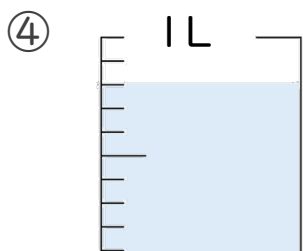
答え _____ L



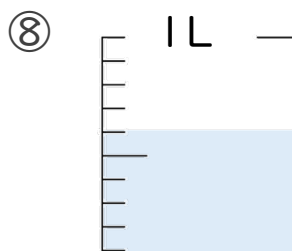
答え _____ L



答え _____ L




答え _____ L



答え _____ L





小数の意味と表し方2

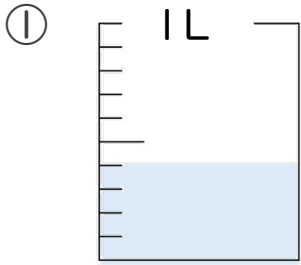
◎ 水のかさ (真小数)



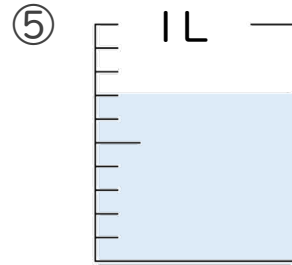
日にち： 月 日

名まえ _____

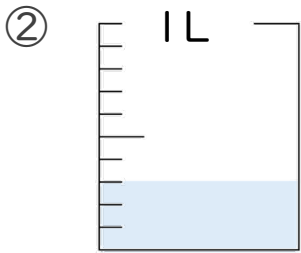
・ 水のかさは、何Lでしょう。(うすい字はなぞりましょう。)



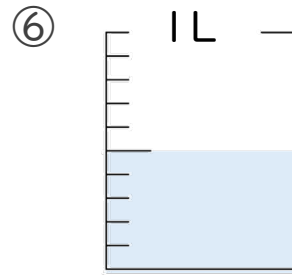
答え 0.4 L



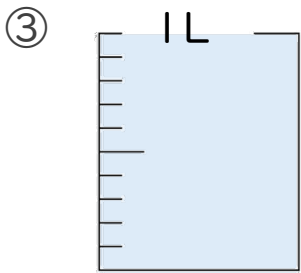
答え _____ L



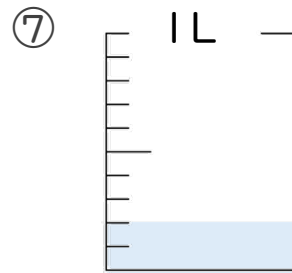
答え _____ L



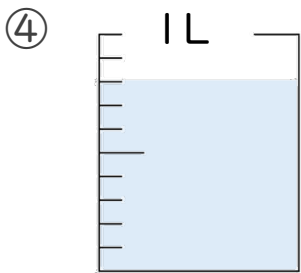
答え _____ L



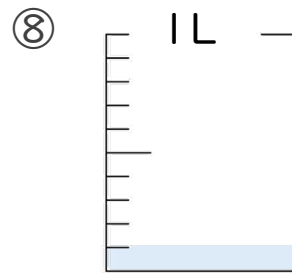
答え _____ L



答え _____ L




答え _____ L



答え _____ L





小数の意味と表し方2

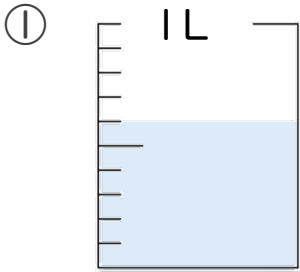
◎ 水のかさ (真小数)



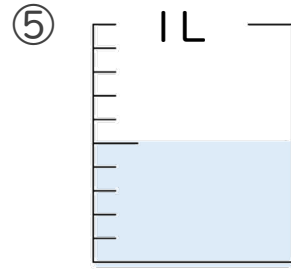
日にち： 月 日

名まえ _____

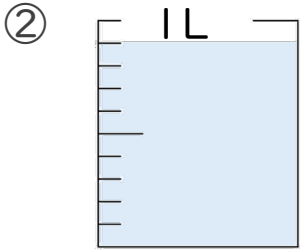
・ 水のかさは、何Lでしょう。(うすい字はなぞりましょう。)



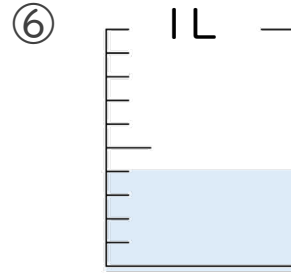
答え 0.6 L



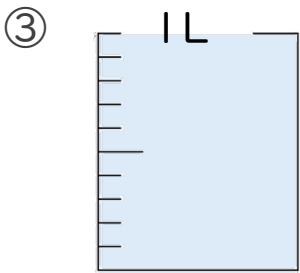
答え _____ L



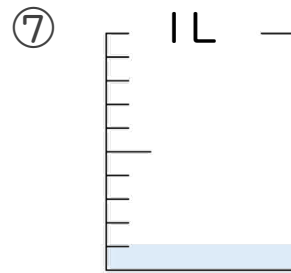
答え _____ L



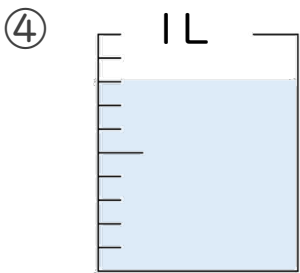
答え _____ L



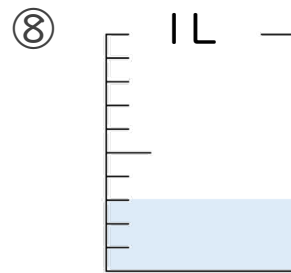
答え _____ L



答え _____ L




答え _____ L



答え _____ L





小数の意味と表し方2

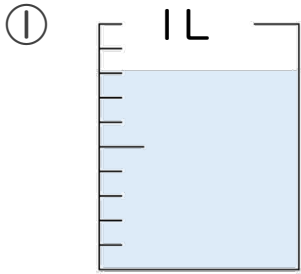
◎ 水のかさ (真小数)



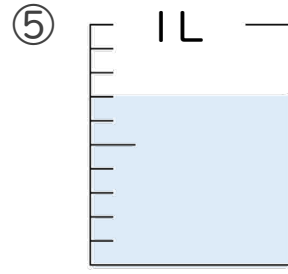
日にち： 月 日

名まえ _____

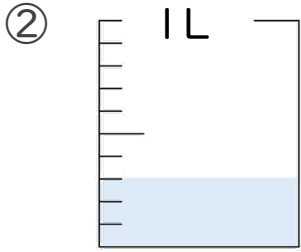
・ 水のかさは、何Lでしょう。(うすい字はなぞりましょう。)



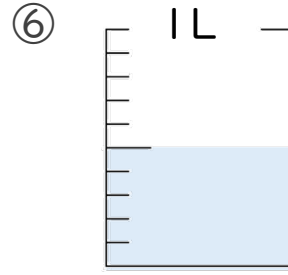
答え 0.8 L



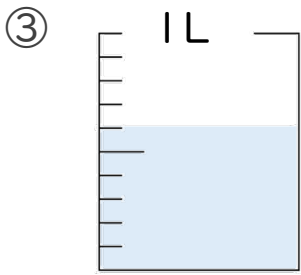
答え _____ L



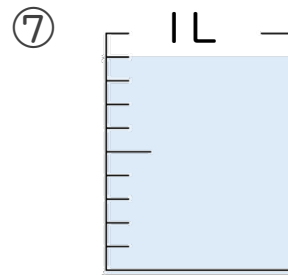
答え _____ L



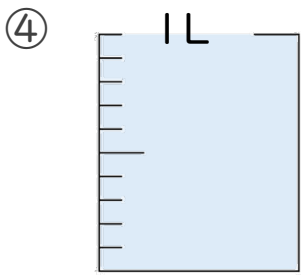
答え _____ L



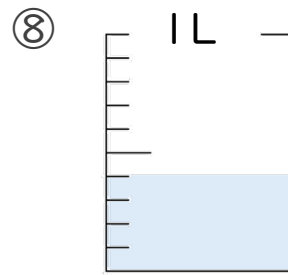
答え _____ L



答え _____ L



答え _____ L



答え _____ L





小数の意味と表し方2


◎ 水のかさ (真小数)




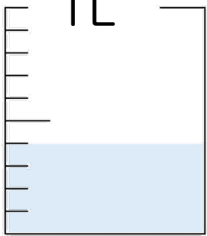
日にち： 月 日

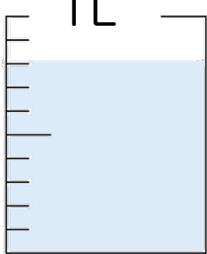
名まえ _____


・ 水のかさは、何Lでしょう。(うすい字はなぞりましょう。)


①  答え 0.1 L

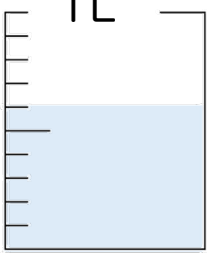
⑤  答え _____ L


②  答え _____ L

⑥  答え _____ L

③  答え _____ L

⑦  答え _____ L

④  答え _____ L

⑧  答え _____ L





小数の意味と表し方2

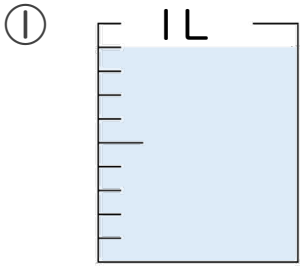
◎ 水のかさ (真小数)



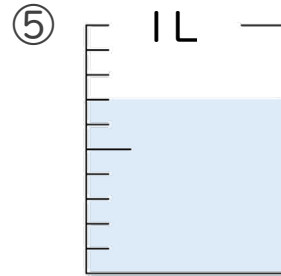
日にち： 月 日

名まえ _____

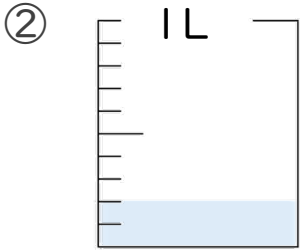
・ 水のかさは、何Lでしょう。(うすい字はなぞりましょう。)



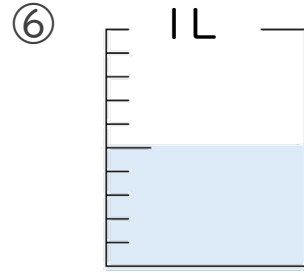
答え 0.9 L



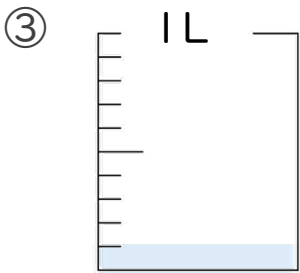
答え _____ L



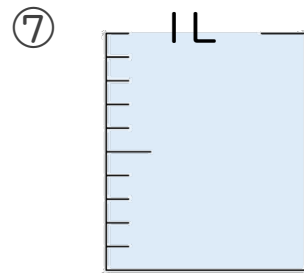
答え _____ L



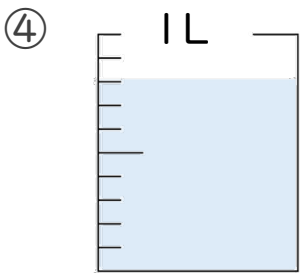
答え _____ L



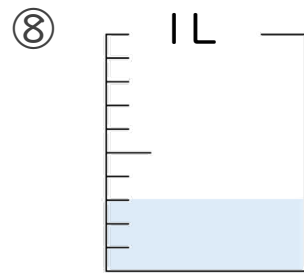
答え _____ L



答え _____ L



答え _____ L



答え _____ L





小数の意味と表し方2

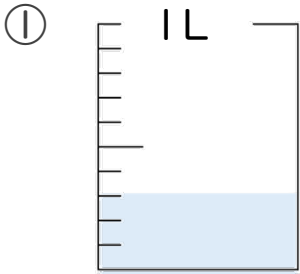
◎ 水のかさ (真小数)



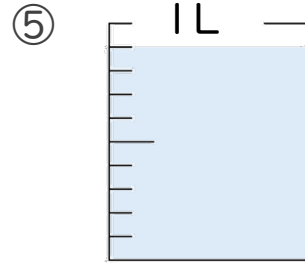
日にち： 月 日

名まえ _____

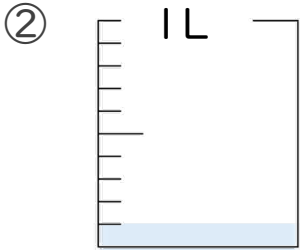
・ 水のかさは、何Lでしょう。(うすい字はなぞりましょう。)



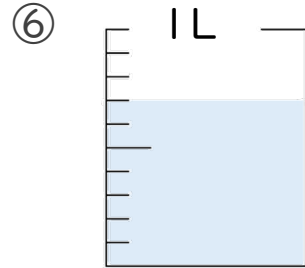
答え 0.3 L



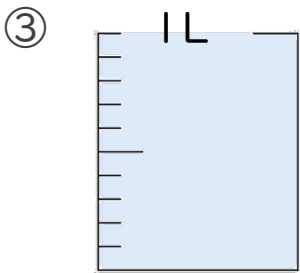
答え _____ L



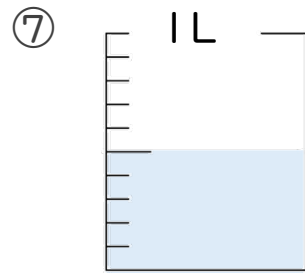
答え _____ L



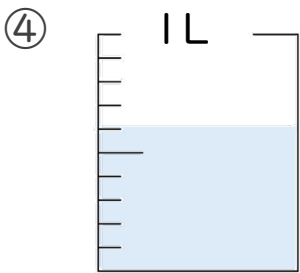
答え _____ L



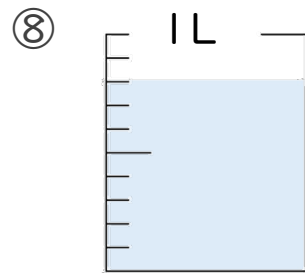
答え _____ L



答え _____ L



答え _____ L



答え _____ L





小数の意味と表し方2

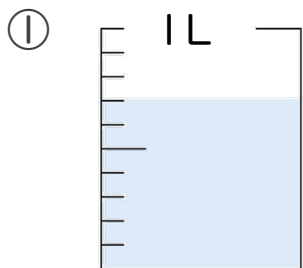
◎ 水のかさ (真小数)



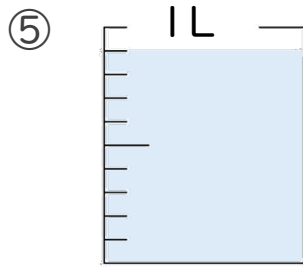
日にち： 月 日

名まえ _____

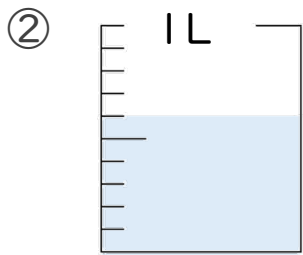
・ 水のかさは、何Lでしょう。(うすい字はなぞりましょう。)



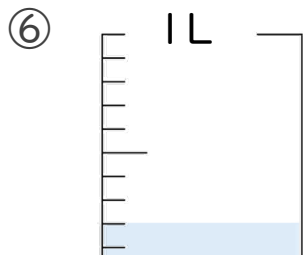
答え 0.7 L



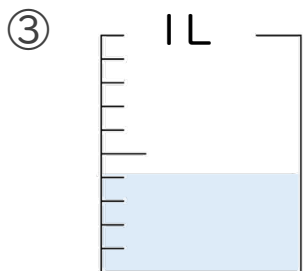
答え _____ L



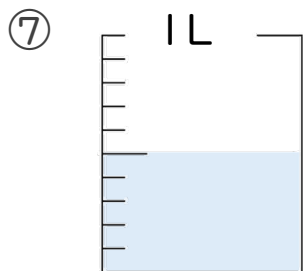
答え _____ L



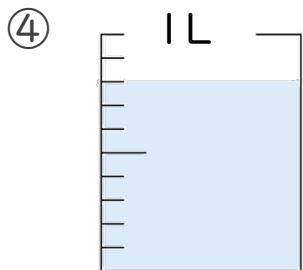
答え _____ L



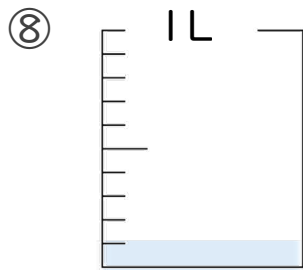
答え _____ L



答え _____ L




答え _____ L



答え _____ L





小数の意味と表し方2

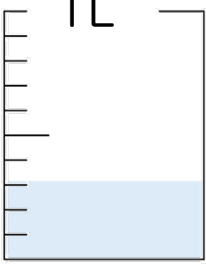
◎ 水のかさ (真小数)

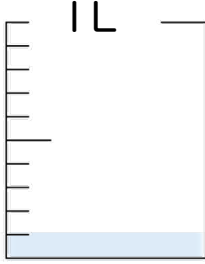


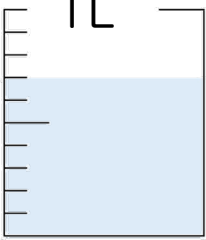
日にち： 月 日


名まえ _____

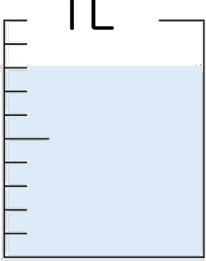
・ 水のかさは、何Lでしょう。(うすい字はなぞりましょう。)


①  答え 0.3 L

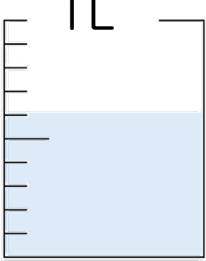
⑤  答え _____ L


②  答え _____ L

⑥  答え _____ L


③  答え _____ L

⑦  答え _____ L

④  答え _____ L

⑧  答え _____ L





小数の意味と表し方2

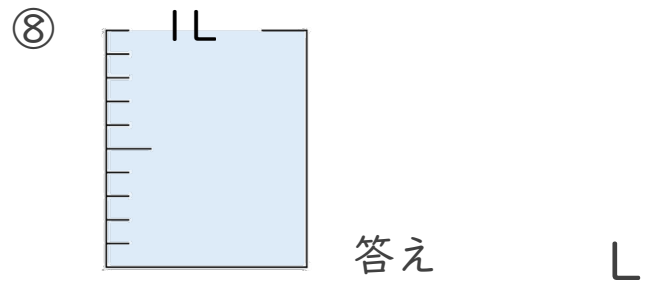
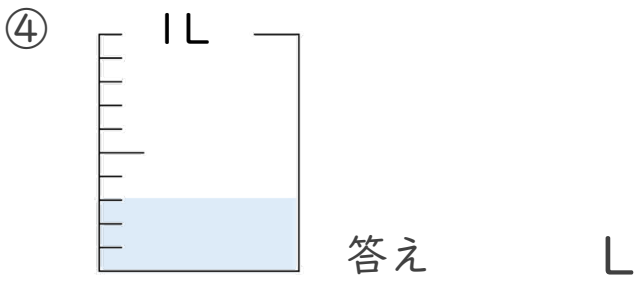
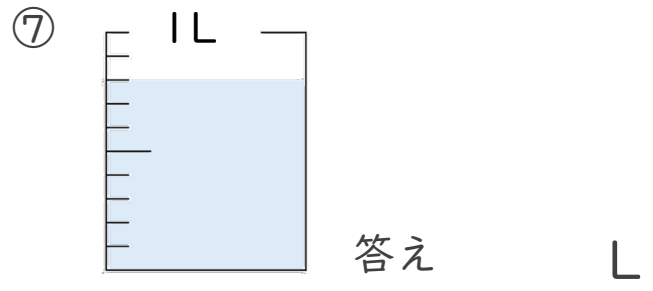
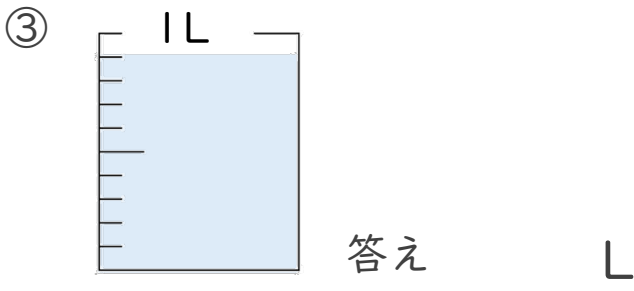
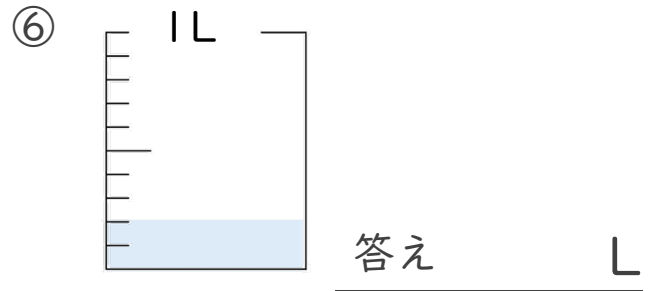
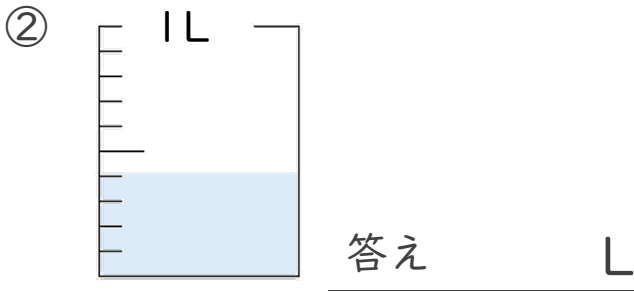
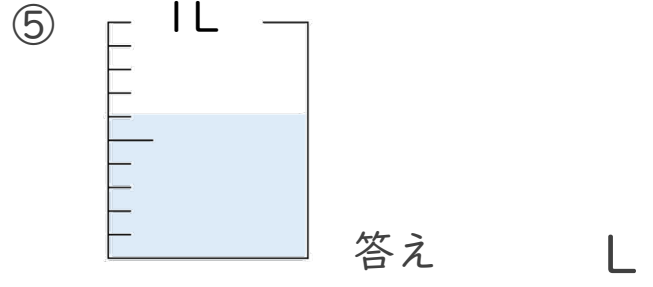
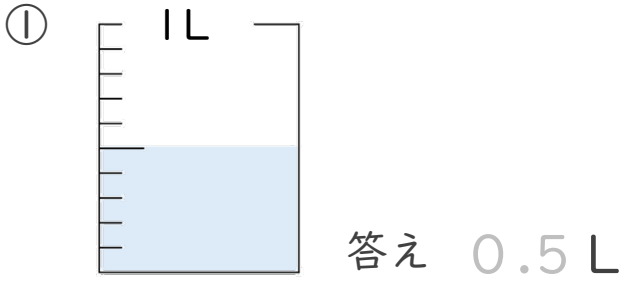
◎ 水のかさ (真小数)

13

日にち： 月 日

名まえ _____

・ 水のかさは、何Lでしょう。(うすい字はなぞりましょう。)





小数の意味と表し方2

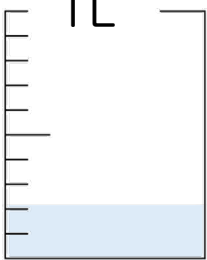
◎ 水のかさ (真小数)


14

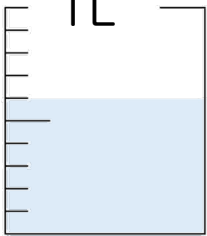
日にち： 月 日


名まえ _____

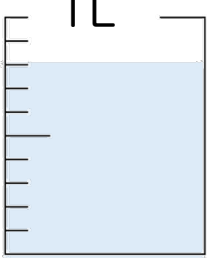
・ 水のかさは、何Lでしょう。(うすい字はなぞりましょう。)

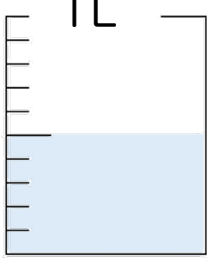
①  答え 0.2 L

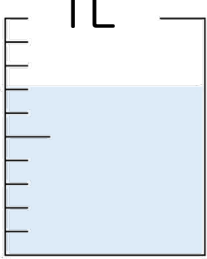
⑤  答え _____ L


②  答え _____ L

⑥  答え _____ L

③  答え _____ L

⑦  答え _____ L

④  答え _____ L

⑧  答え _____ L





小数の意味と表し方2

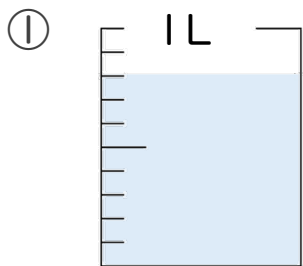
◎ 水のかさ (真小数)

15

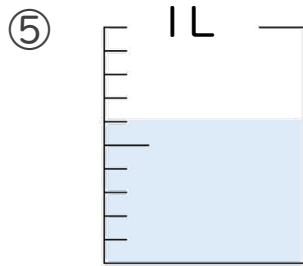
日にち： 月 日

名まえ _____

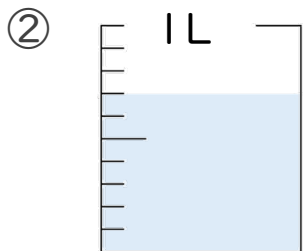
・ 水のかさは、何Lでしょう。(うすい字はなぞりましょう。)



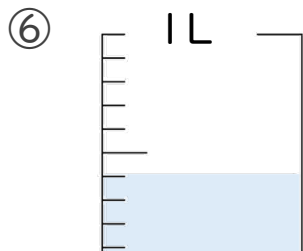
答え 0.8 L



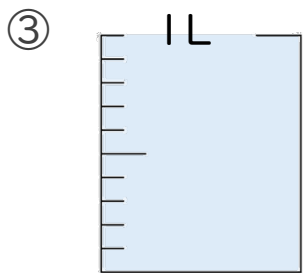
答え _____ L



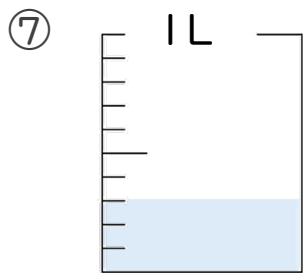
答え _____ L



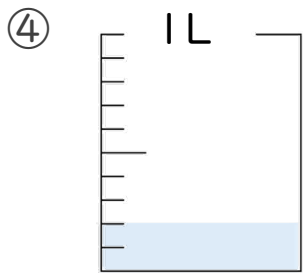
答え _____ L



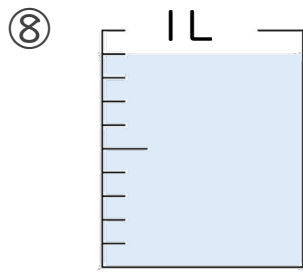
答え _____ L



答え _____ L




答え _____ L



答え _____ L





小数の意味と表し方2

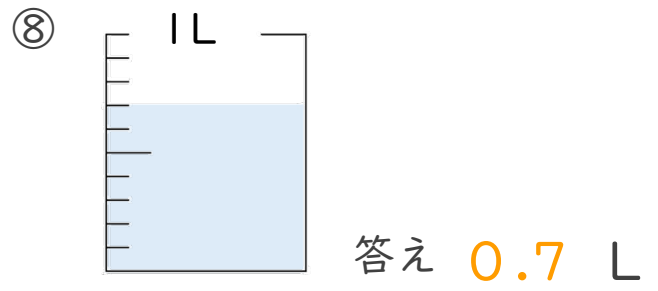
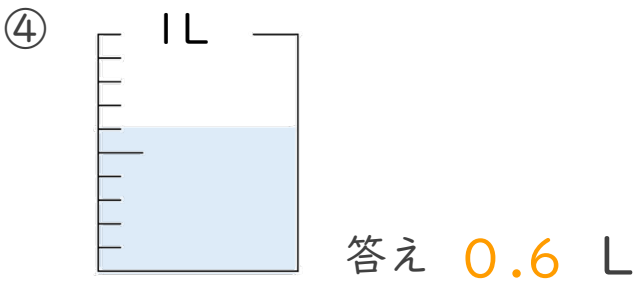
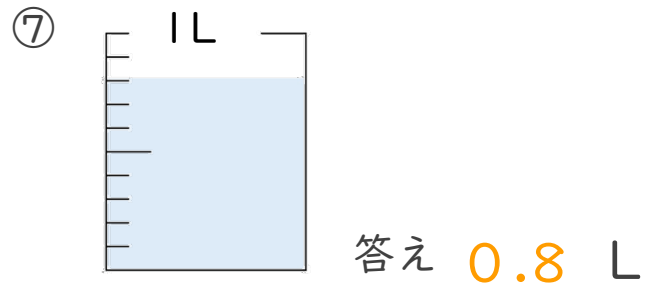
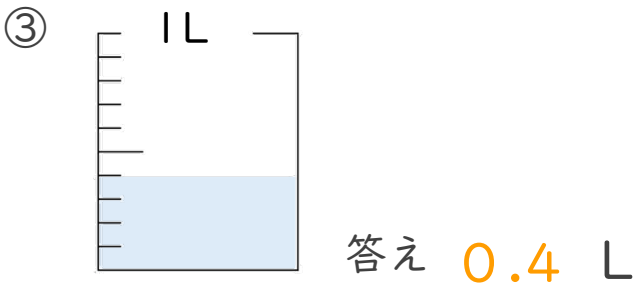
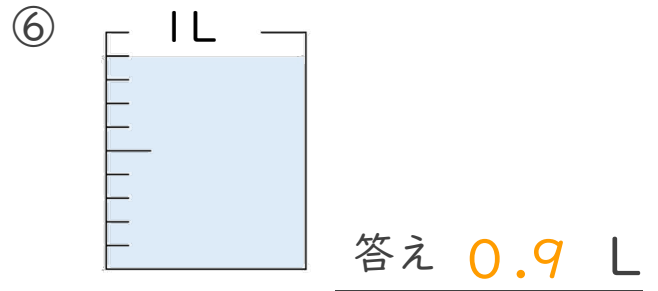
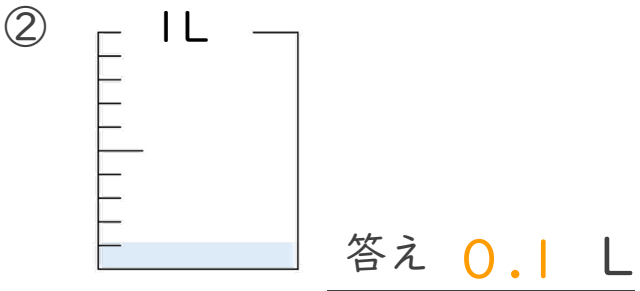
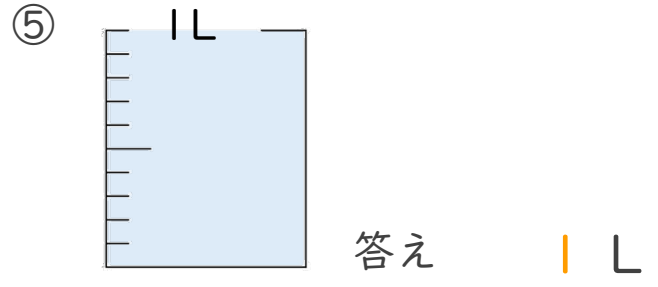
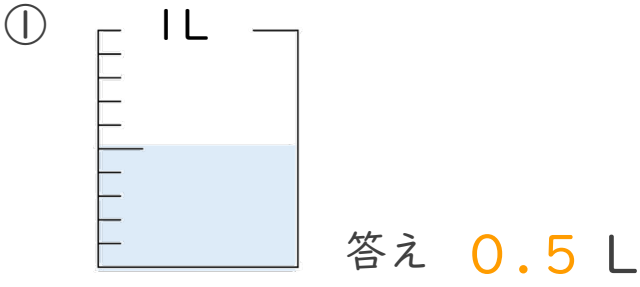
◎ 水のかさ (真小数)




日にち： 月 日

名まえ _____

・ 水のかさは、何Lでしょう。(うすい字はなぞりましょう。)





小数の意味と表し方 2

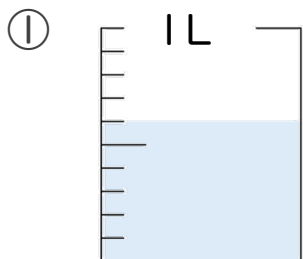
◎ 水のかさ (真小数)



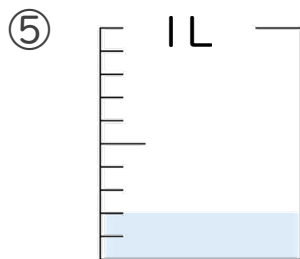
日にち： 月 日

名まえ _____

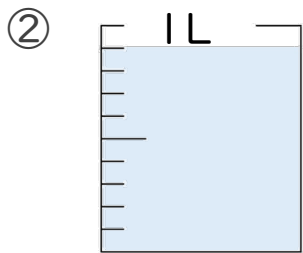
・ 水のかさは、何Lでしょう。(うすい字はなぞりましょう。)



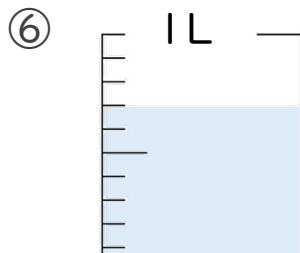
答え 0.6 L



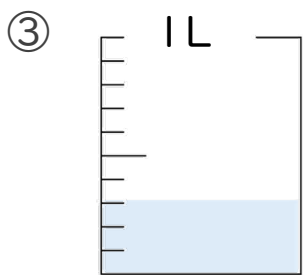
答え 0.2 L



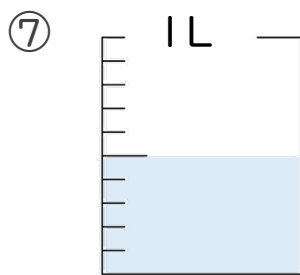
答え 0.9 L



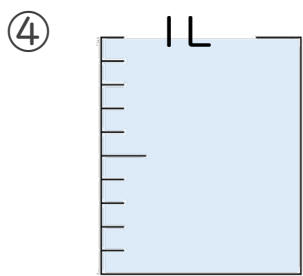
答え 0.7 L



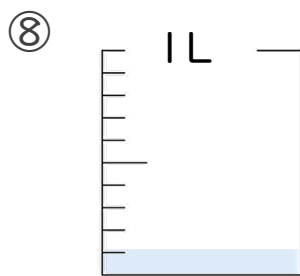
答え 0.3 L



答え 0.5 L




答え 0.1 L



答え 0.1 L





小数の意味と表し方2

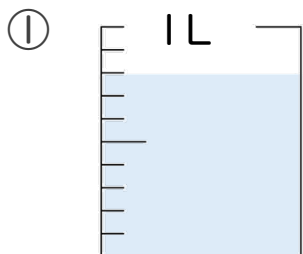
◎ 水のかさ (真小数)



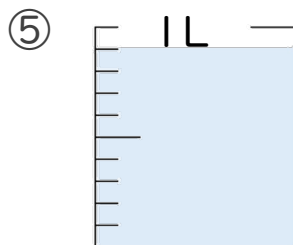
日にち： 月 日

名まえ _____

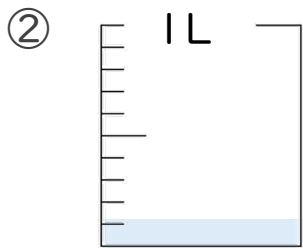
・ 水のかさは、何Lでしょう。(うすい字はなぞりましょう。)



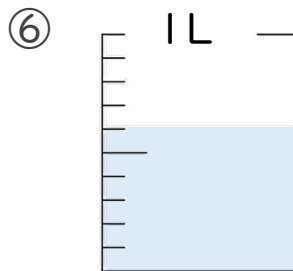
答え 0.8 L



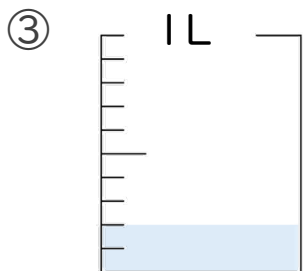
答え 0.9 L



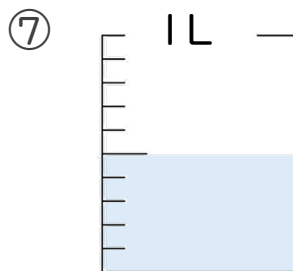
答え 0.1 L



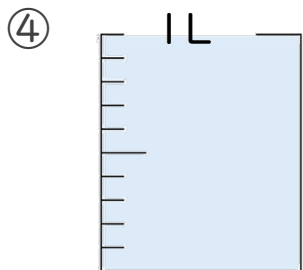
答え 0.6 L



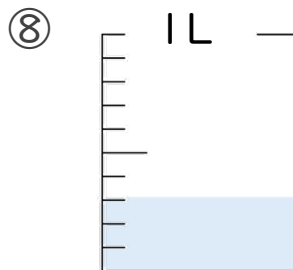
答え 0.2 L



答え 0.5 L



答え 1 L



答え 0.3 L





小数の意味と表し方2

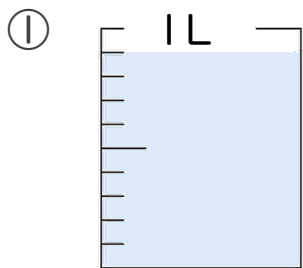
◎ 水のかさ (真小数)



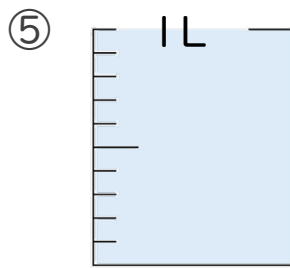
日にち： 月 日

名まえ _____

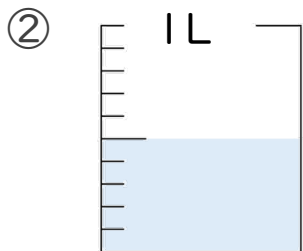
・ 水のかさは、何Lでしょう。(うすい字はなぞりましょう。)



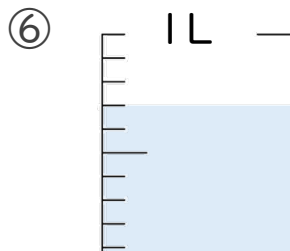
答え 0.9 L



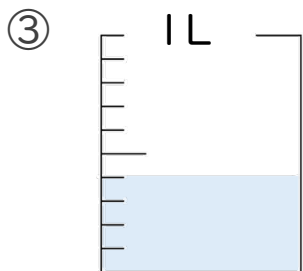
答え 1 L



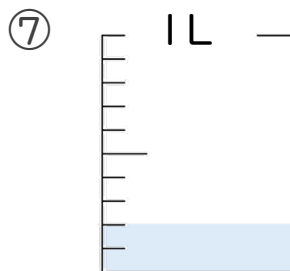
答え 0.5 L



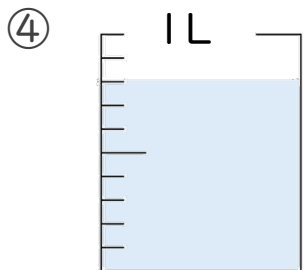
答え 0.7 L



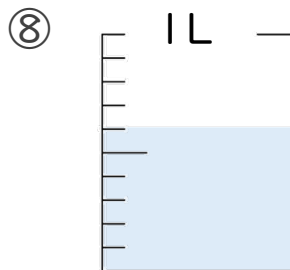
答え 0.4 L



答え 0.2 L




答え 0.8 L



答え 0.6 L





小数の意味と表し方 2

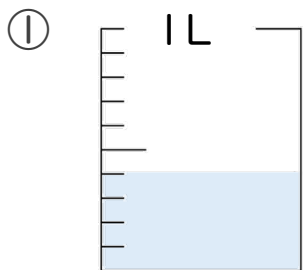
◎ 水のかさ (真小数)



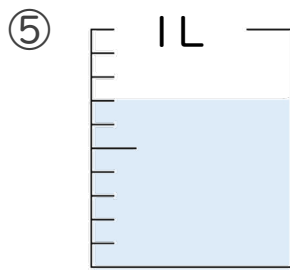
日にち： 月 日

名まえ _____

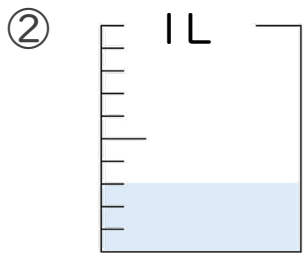
・ 水のかさは、何Lでしょう。(うすい字はなぞりましょう。)



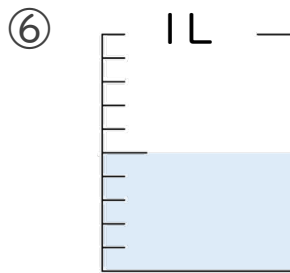
答え 0.4 L



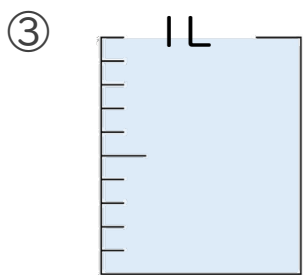
答え 0.7 L



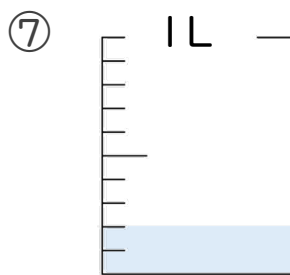
答え 0.3 L



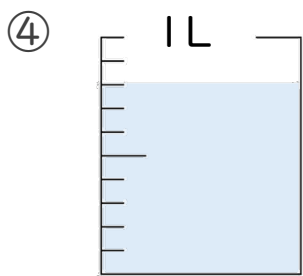
答え 0.5 L



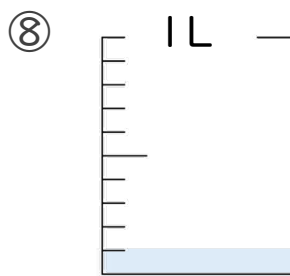
答え 1 L



答え 0.2 L




答え 0.8 L



答え 0.1 L





小数の意味と表し方 2

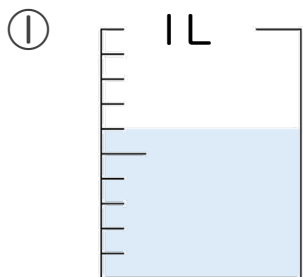
◎ 水のかさ (真小数)



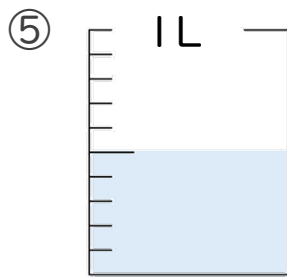
日にち： 月 日

名まえ _____

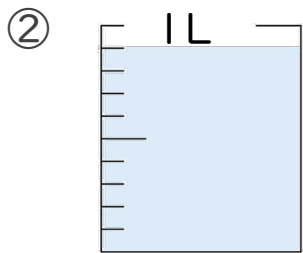
・ 水のかさは、何Lでしょう。(うすい字はなぞりましょう。)



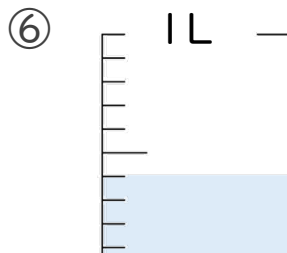
答え 0.6 L



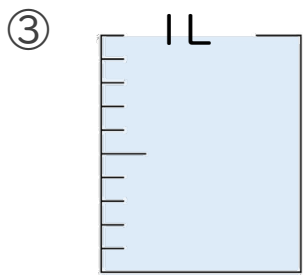
答え 0.5 L



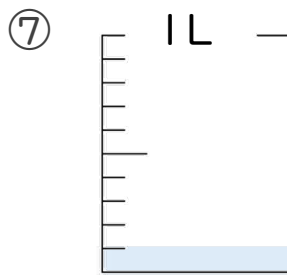
答え 0.9 L



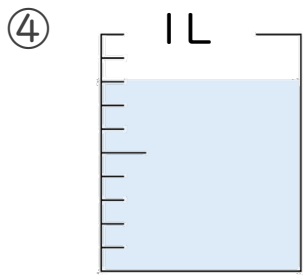
答え 0.4 L



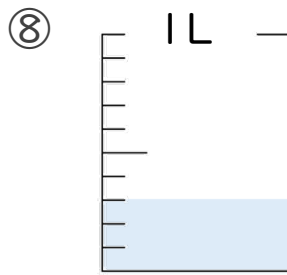
答え 1 L



答え 0.1 L




答え 0.8 L



答え 0.3 L





小数の意味と表し方2

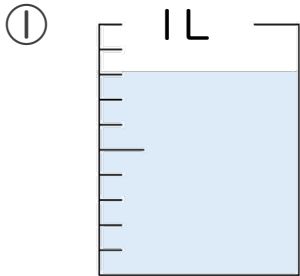
◎ 水のかさ (真小数)



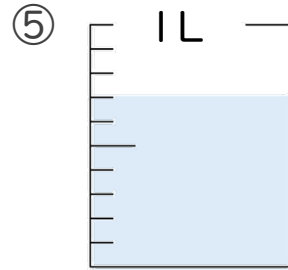
日にち： 月 日

名まえ _____

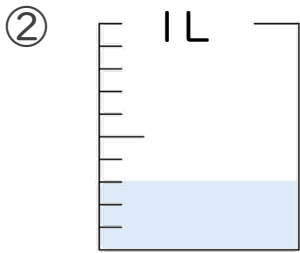
・ 水のかさは、何Lでしょう。(うすい字はなぞりましょう。)



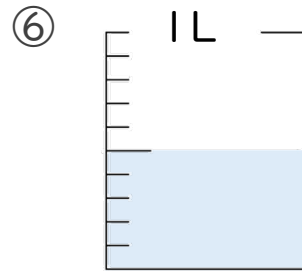
答え 0.8 L



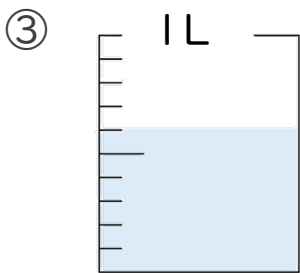
答え 0.7 L



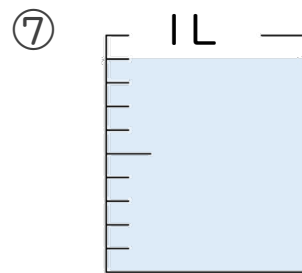
答え 0.3 L



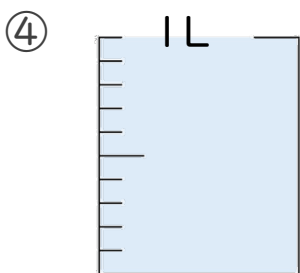
答え 0.5 L



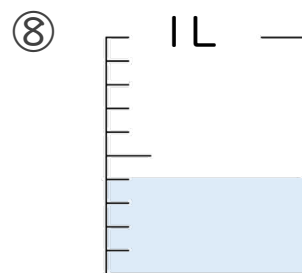
答え 0.6 L



答え 0.9 L




答え 1 L



答え 0.4 L





小数の意味と表し方2

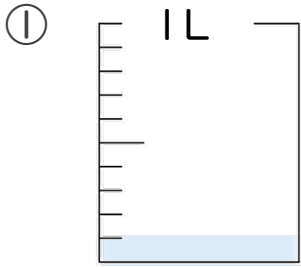
◎ 水のかさ (真小数)



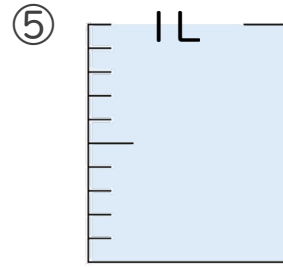
日にち： 月 日

名まえ _____

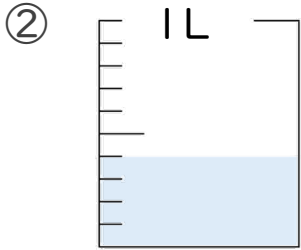
・ 水のかさは、何Lでしょう。(うすい字はなぞりましょう。)



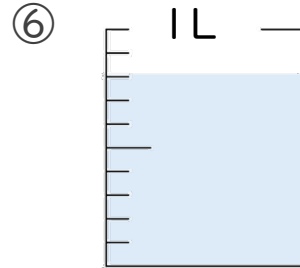
答え 0.1 L



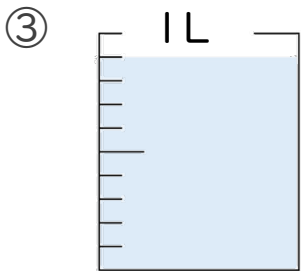
答え 1 L



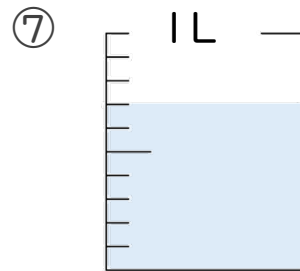
答え 0.4 L



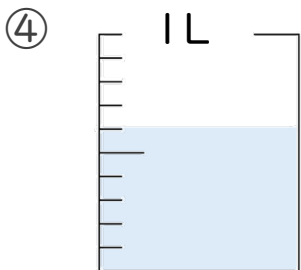
答え 0.8 L



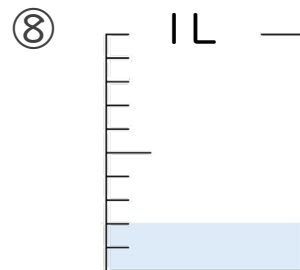
答え 0.9 L



答え 0.7 L



答え 0.6 L



答え 0.2 L





小数の意味と表し方 2

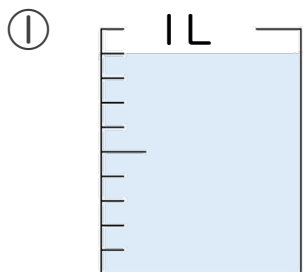
◎ 水のかさ (真小数)



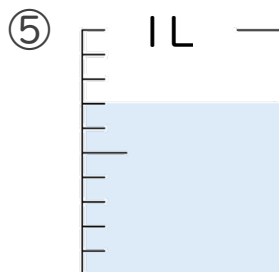
日にち： 月 日

名まえ _____

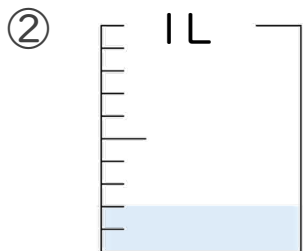
・ 水のかさは、何Lでしょう。(うすい字はなぞりましょう。)



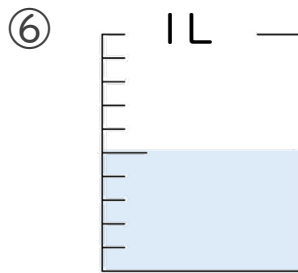
答え 0.9 L



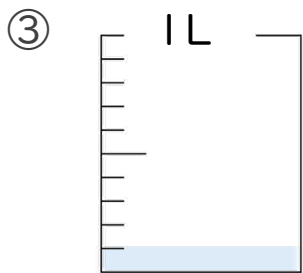
答え 0.7 L



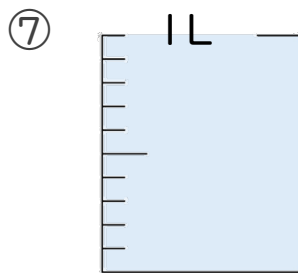
答え 0.2 L



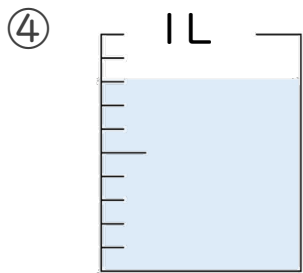
答え 0.5 L



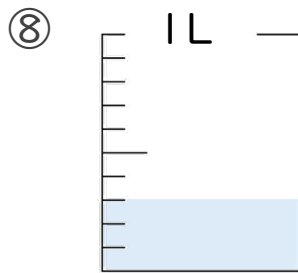
答え 0.1 L



答え 1 L




答え 0.8 L



答え 0.3 L





小数の意味と表し方2

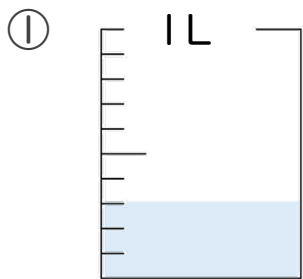
◎ 水のかさ (真小数)



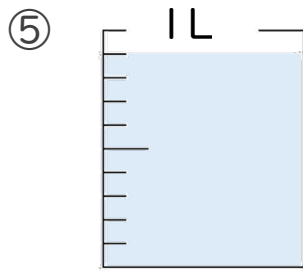
日にち： 月 日

名まえ _____

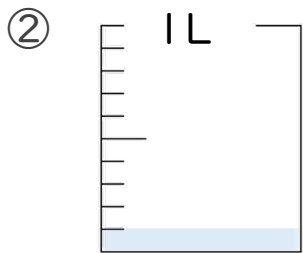
・ 水のかさは、何Lでしょう。(うすい字はなぞりましょう。)



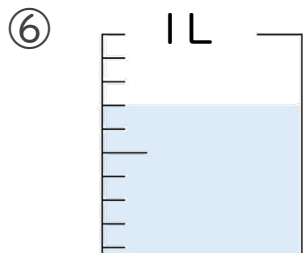
答え 0.3 L



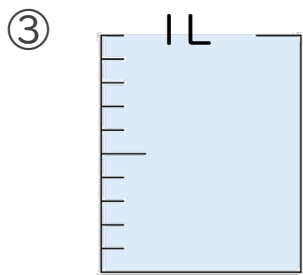
答え 0.9 L



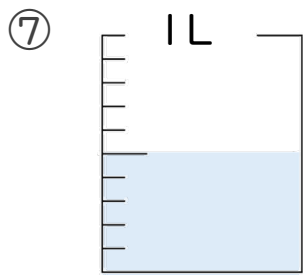
答え 0.1 L



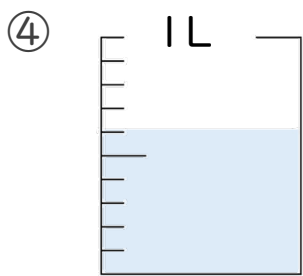
答え 0.7 L



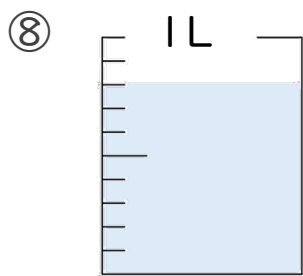
答え 1 L



答え 0.5 L



答え 0.6 L



答え 0.8 L





小数の意味と表し方2

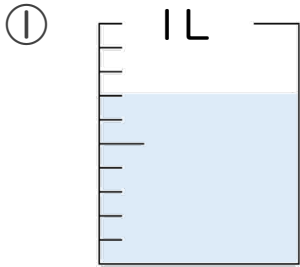
◎ 水のかさ (真小数)



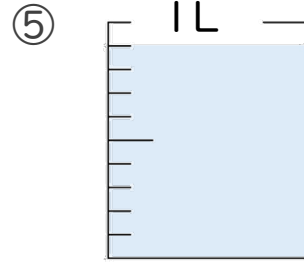
日にち： 月 日

名まえ _____

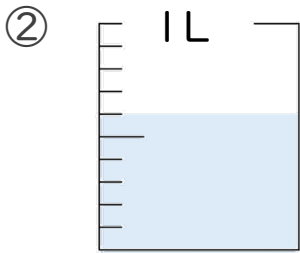
・ 水のかさは、何Lでしょう。(うすい字はなぞりましょう。)



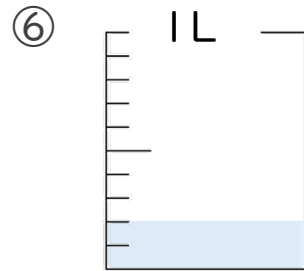
答え 0.7 L



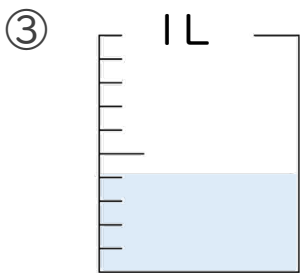
答え 0.9 L



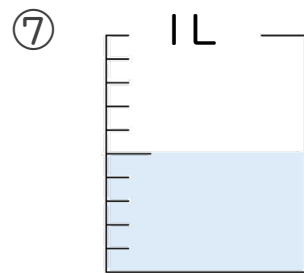
答え 0.6 L



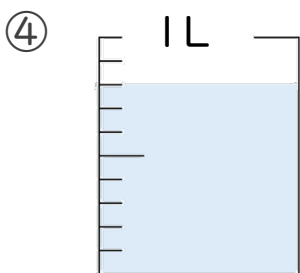
答え 0.2 L



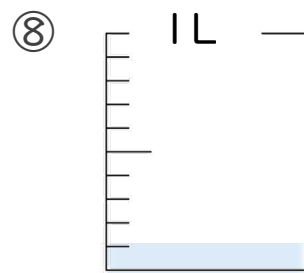
答え 0.4 L



答え 0.5 L



答え 0.8 L



答え 0.1 L





小数の意味と表し方2

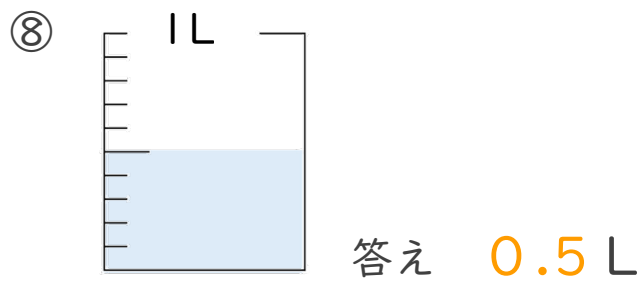
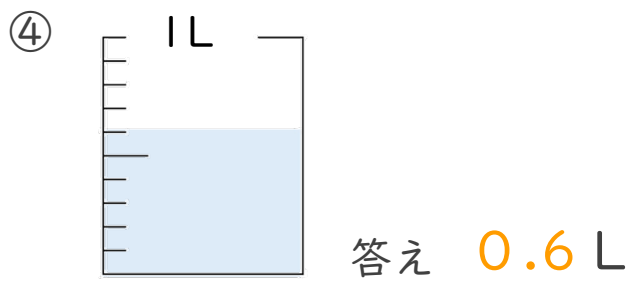
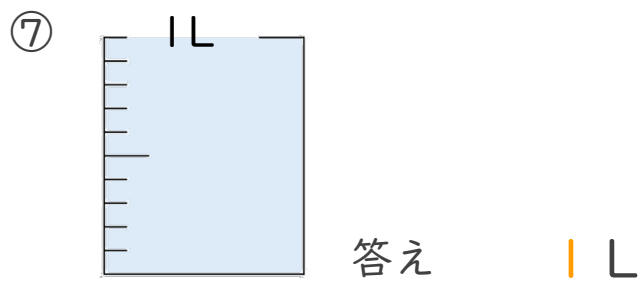
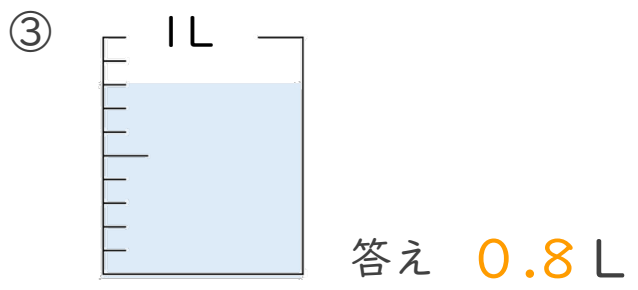
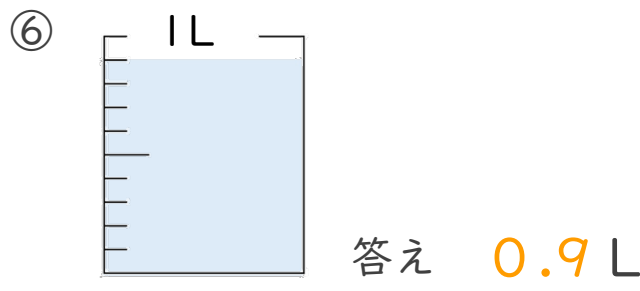
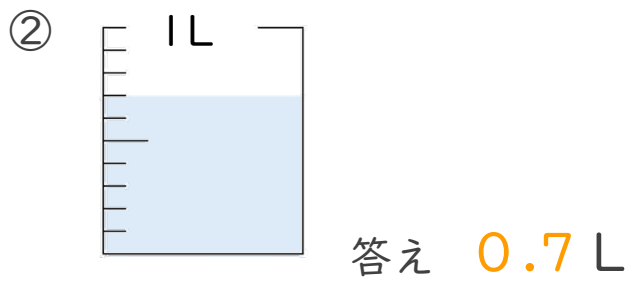

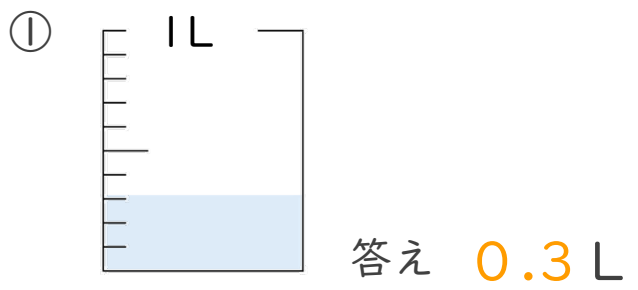
◎ 水のかさ (真小数)


12

日にち： 月 日

名まえ _____

・ 水のかさは、何Lでしょう。(うすい字はなぞりましょう。)





小数の意味と表し方2

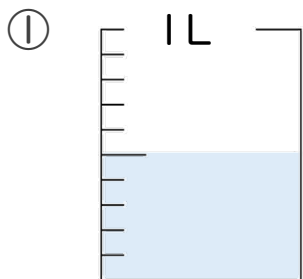
◎ 水のかさ (真小数)

13

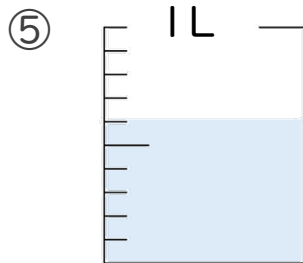
日にち： 月 日

名まえ _____

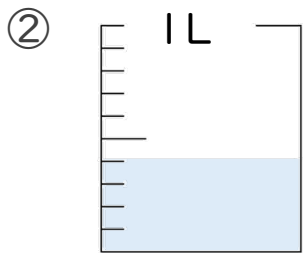
・ 水のかさは、何Lでしょう。(うすい字はなぞりましょう。)



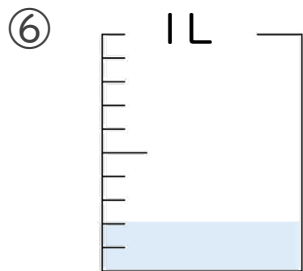
答え 0.5 L



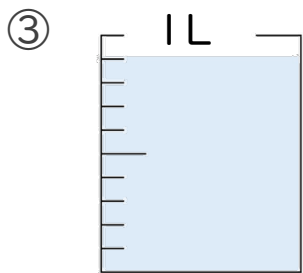
答え 0.6 L



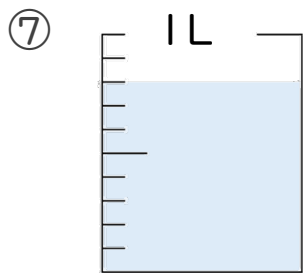
答え 0.4 L



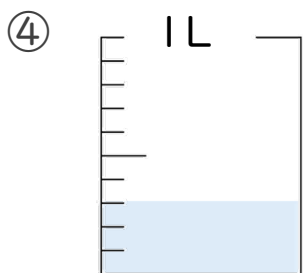
答え 0.2 L



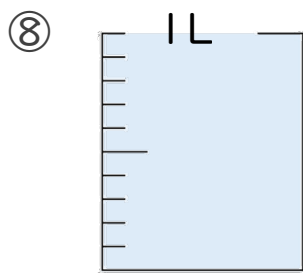
答え 0.9 L



答え 0.8 L




答え 0.3 L



答え 1 L





小数の意味と表し方2

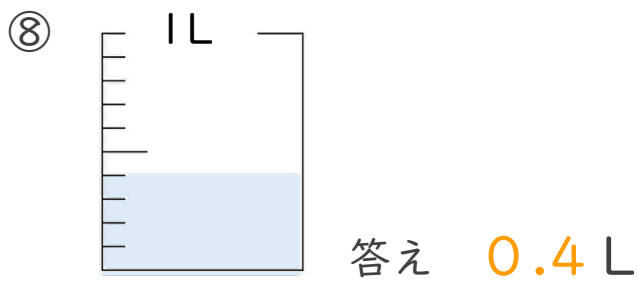
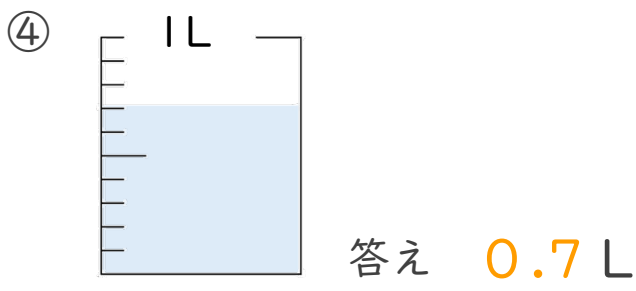
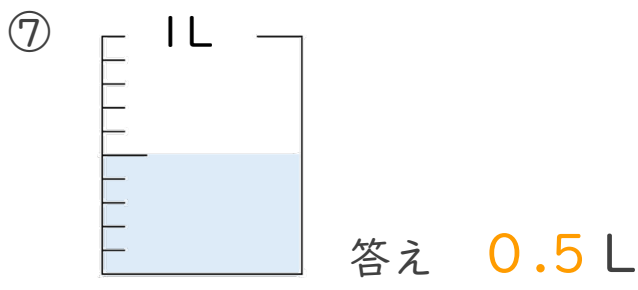
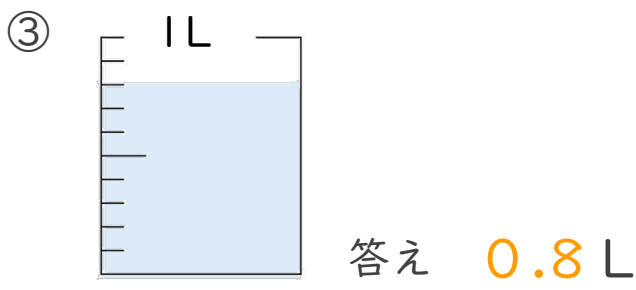
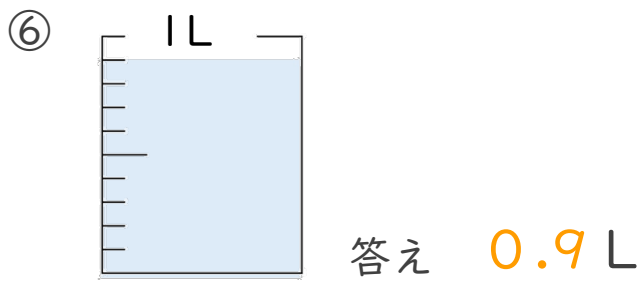
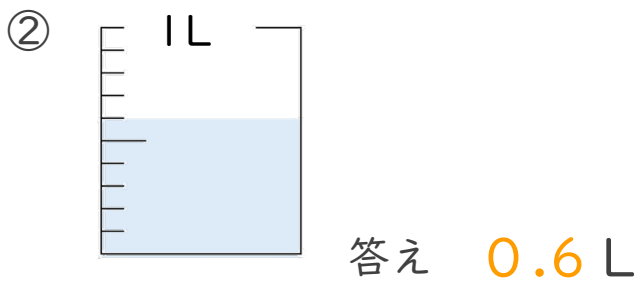
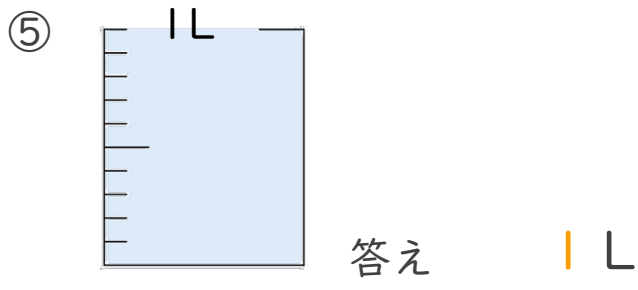
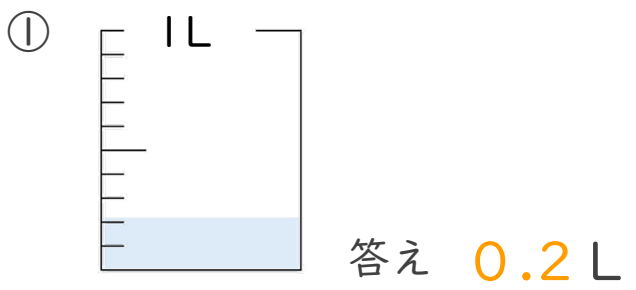
◎ 水のかさ (真小数)


14

日にち： 月 日

名まえ _____

・ 水のかさは、何Lでしょう。(うすい字はなぞりましょう。)





小数の意味と表し方2

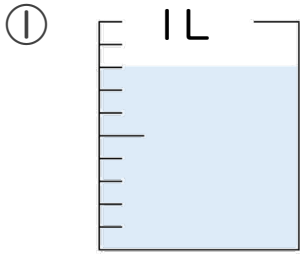
◎ 水のかさ (真小数)

15

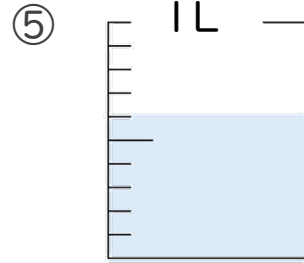
日にち： 月 日

名まえ _____

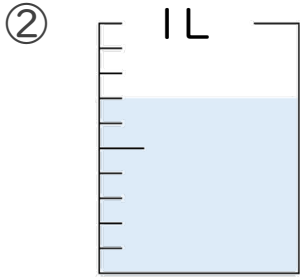
・ 水のかさは、何Lでしょう。(うすい字はなぞりましょう。)



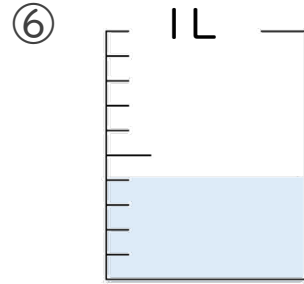
答え 0.8 L



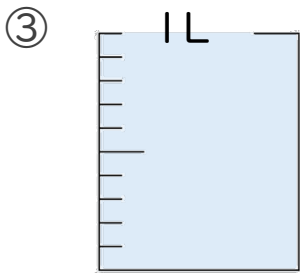
答え 0.6 L



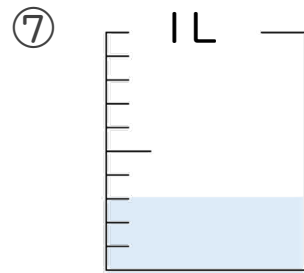
答え 0.7 L



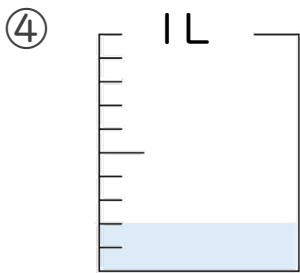
答え 0.4 L



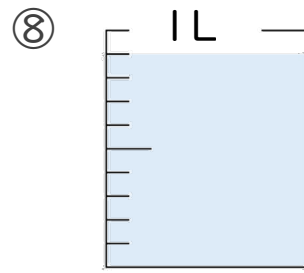
答え 1 L



答え 0.3 L



答え 0.2 L



答え 0.9 L

