

小数の意味と表し方 4

◎ 水のかさをぬる

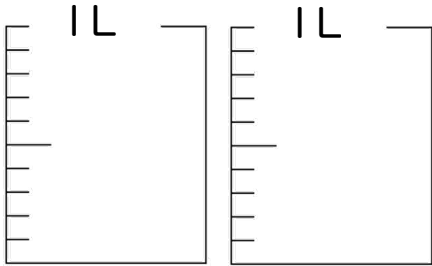


日にち： 月 日

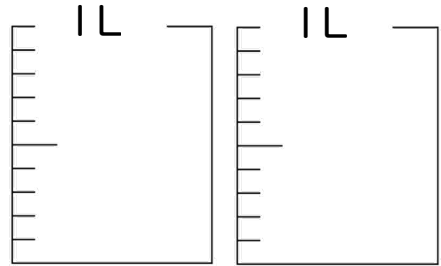
名まえ _____

・ 水のかさだけ色を塗りましょう

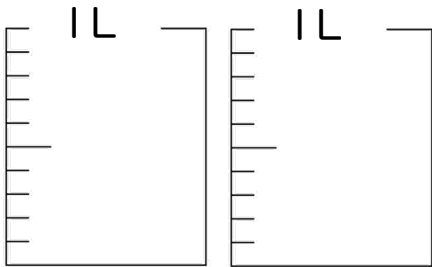
① 0.5 L



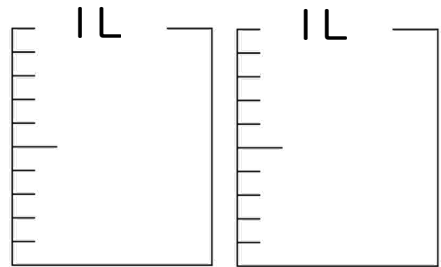
⑤ 0.7 L



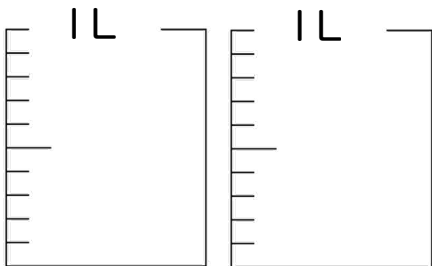
② 1.5 L



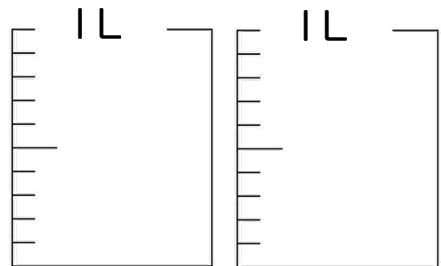
⑥ 1.1 L



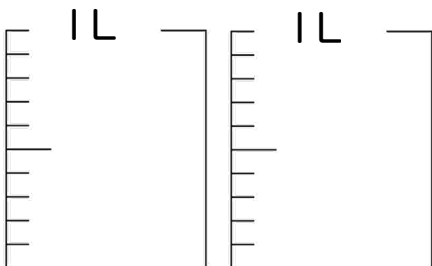
③ 1 L



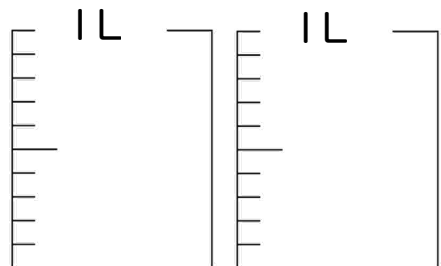
⑦ 0.9 L




④ 0.3 L



⑧ 1.4 L





小数の意味と表し方 4

◎ 水のかさをぬる

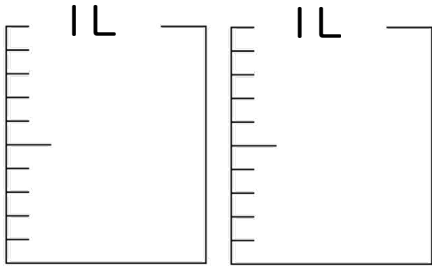


日にち： 月 日

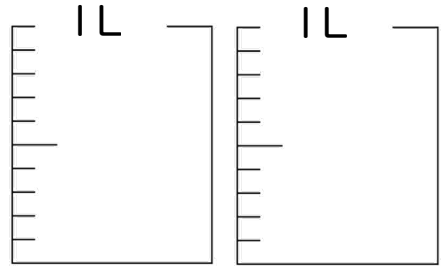
名まえ _____

・ 水のかさだけ色を塗りましょう

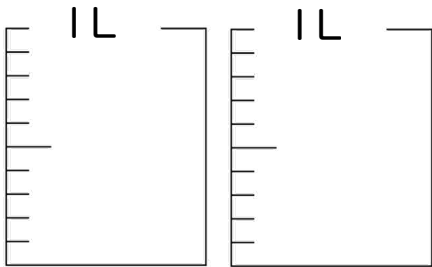
① 1.9 L



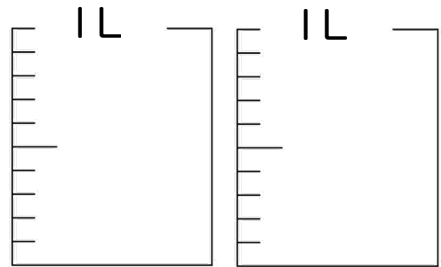
⑤ 1.6 L



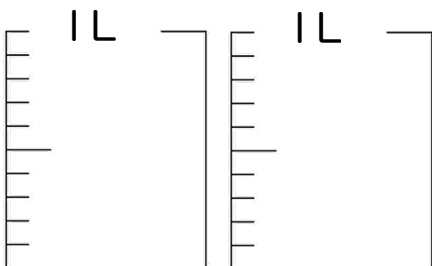
② 1.1 L



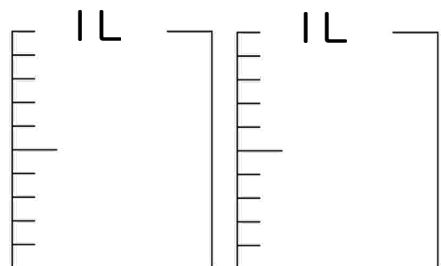
⑥ 0.5 L



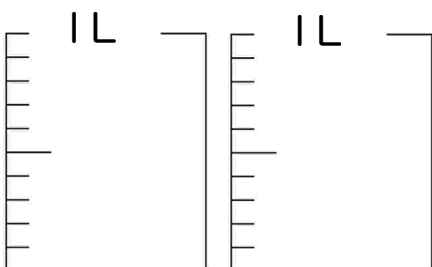
③ 1.8 L



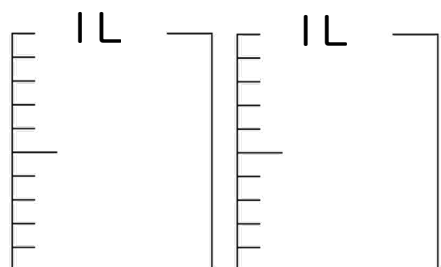
⑦ 1.7 L




④ 0.4 L



⑧ 1.5 L





小数の意味と表し方 4

◎ 水のかさをぬる

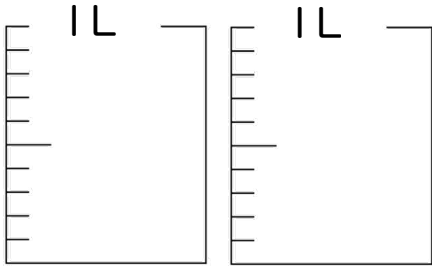


日にち： 月 日

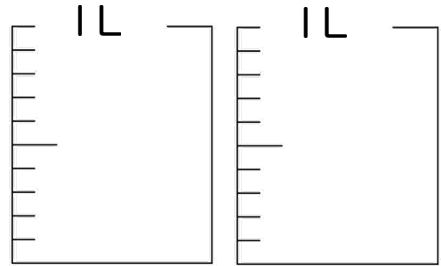
名まえ _____

・ 水のかさだけ色を塗りましょう

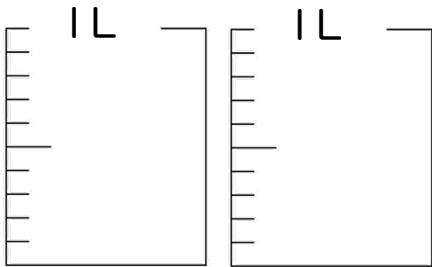
① 1.7 L



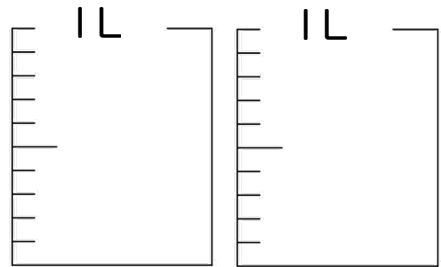
⑤ 0.3 L



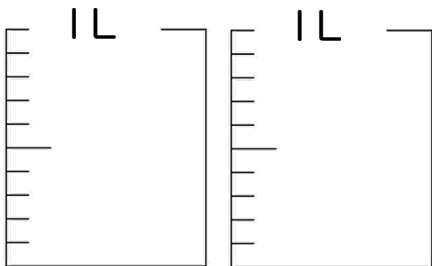
② 0.6 L



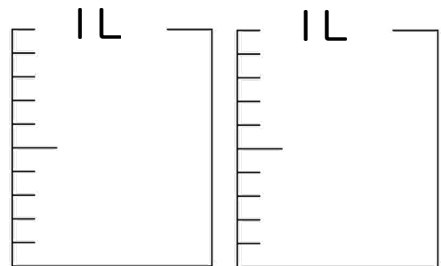
⑥ 1.9 L



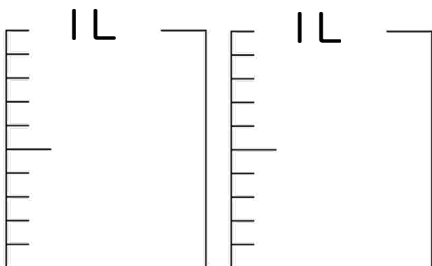
③ 0.1 L



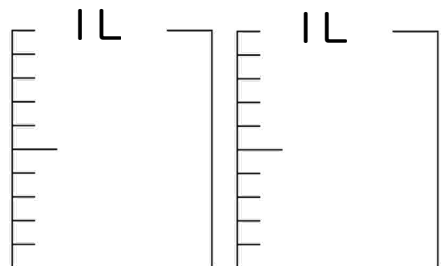
⑦ 0.4 L




④ 1.8 L



⑧ 1.6 L





小数の意味と表し方 4

◎ 水のかさをぬる

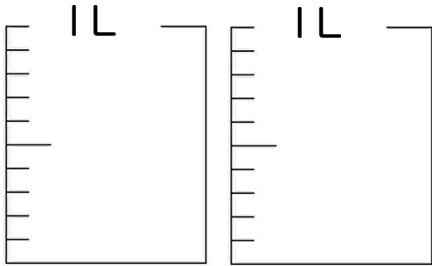


日にち： 月 日

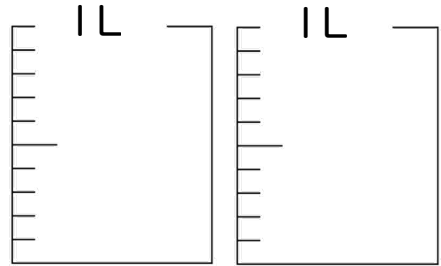
名まえ _____

・ 水のかさだけ色を塗りましょう

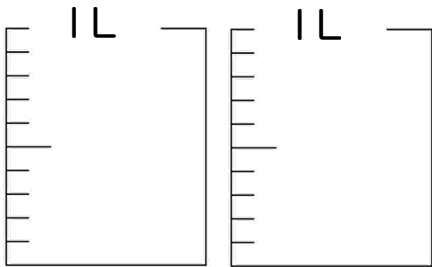
① 1.4 L



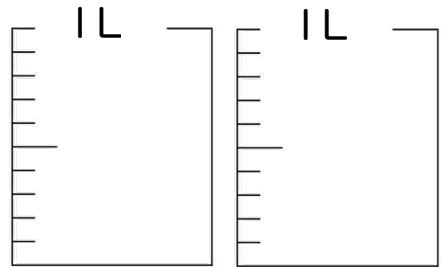
⑤ 1.5 L



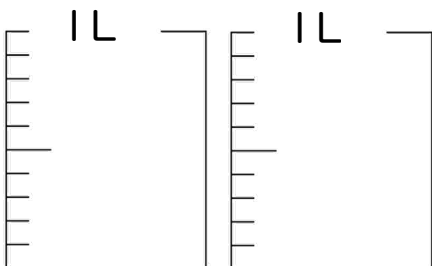
② 0.7 L



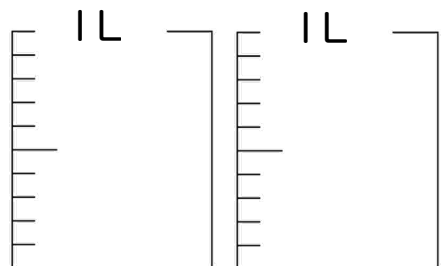
⑥ 2 L



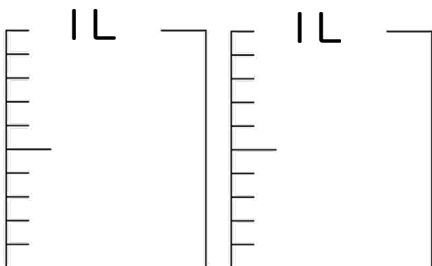
③ 0.4 L



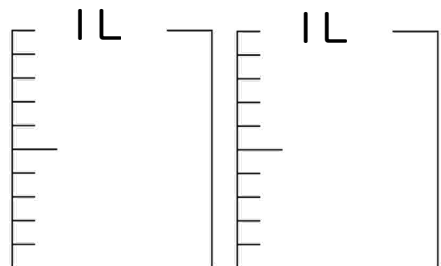
⑦ 1.9 L




④ 1.1 L



⑧ 1 L





小数の意味と表し方 4

◎ 水のかさをぬる

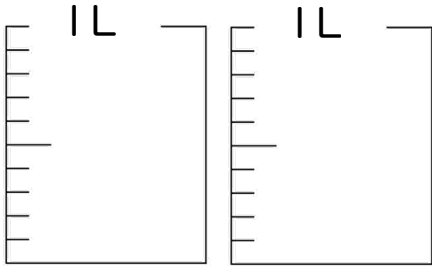


日にち： 月 日

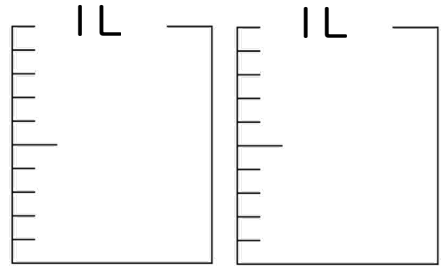
名まえ _____

・ 水のかさだけ色を塗りましょう

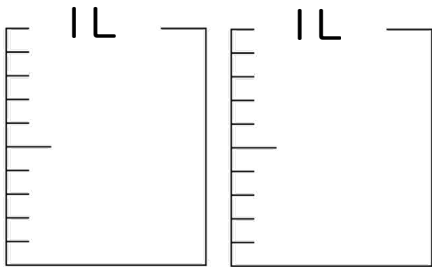
① 0.3 L



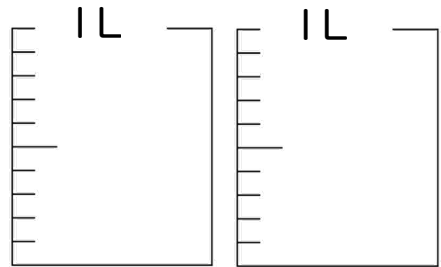
⑤ 1.6 L



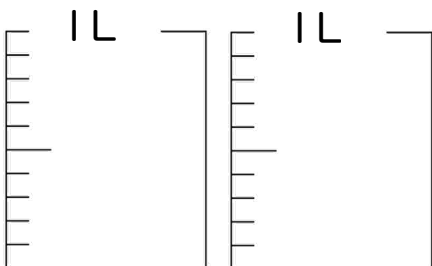
② 1.1 L



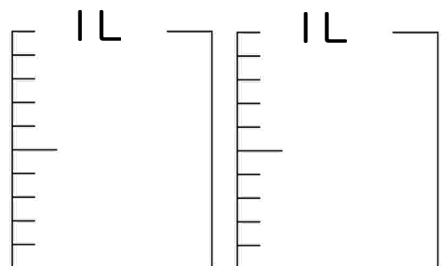
⑥ 0.1 L



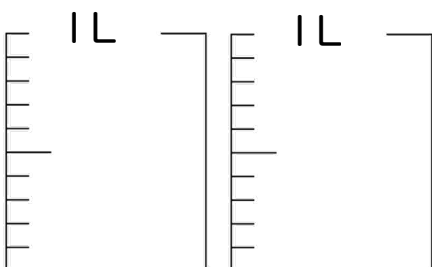
③ 1.9 L



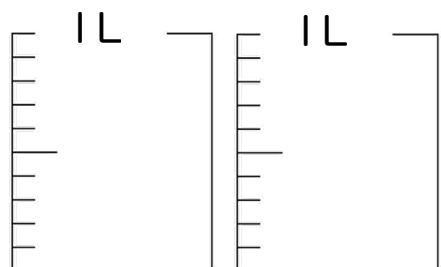
⑦ 1.5 L



④ 0.2 L



⑧ 1.2 L





小数の意味と表し方 4

◎ 水のかさをぬる

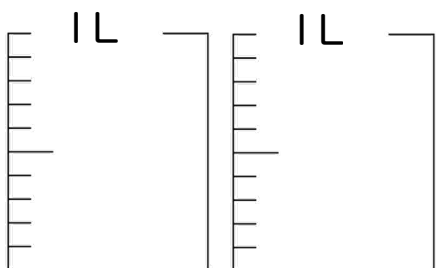


日にち： 月 日

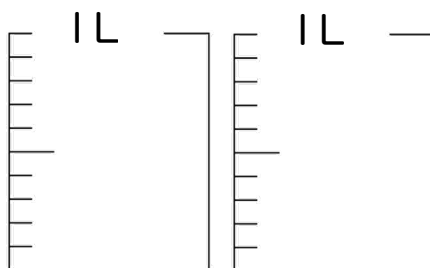
名まえ _____

・ 水のかさだけ色を塗りましょう

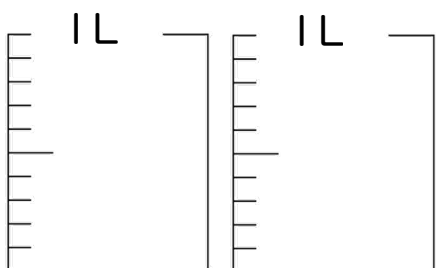
① 1.4 L



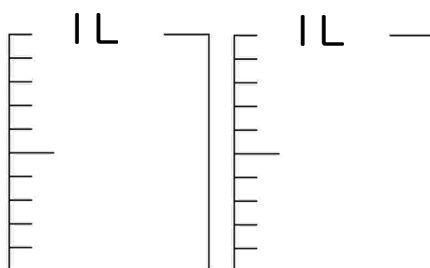
⑤ 0.2 L



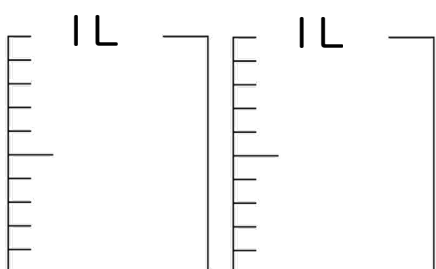
② 1.9 L



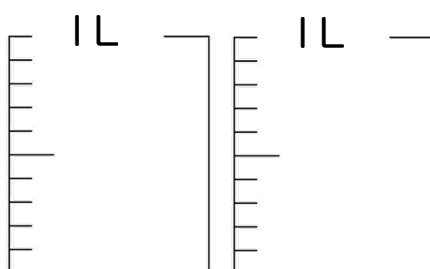
⑥ 1.8 L



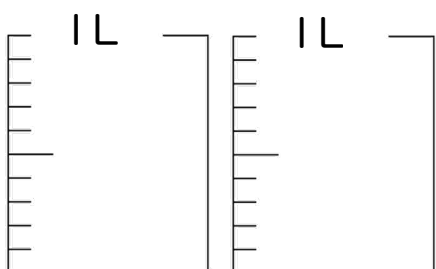
③ 1.1 L



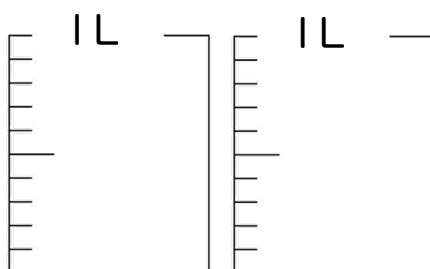
⑦ 0.7 L




④ 1.6 L



⑧ 0.3 L





小数の意味と表し方 4

◎ 水のかさをぬる

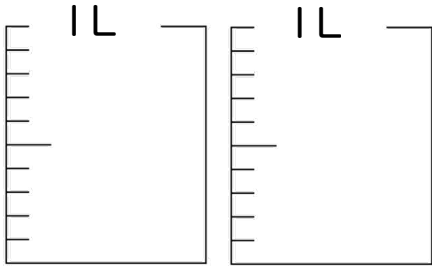


日にち： 月 日

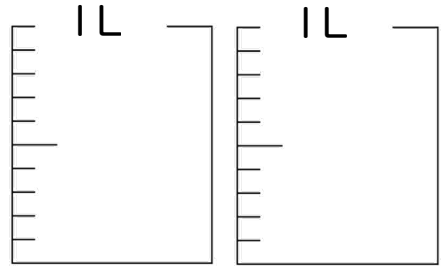
名まえ _____

・ 水のかさだけ色を塗りましょう

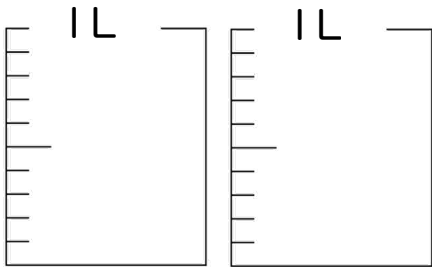
① 0.2 L



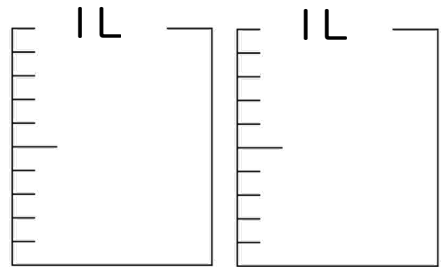
⑤ 1.1 L



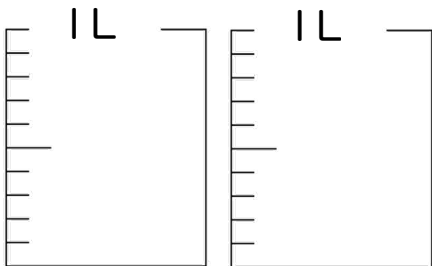
② 1.2 L



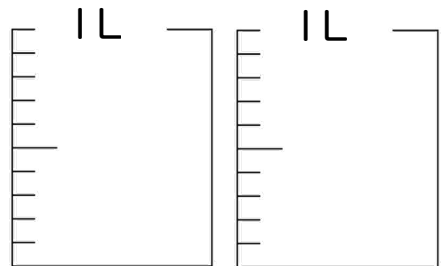
⑥ 0.4 L



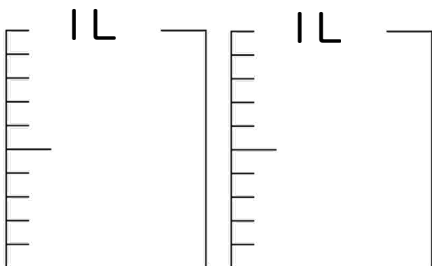
③ 1.6 L



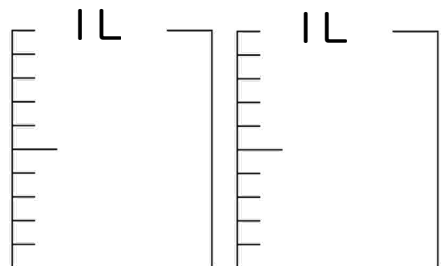
⑦ 1.9 L



④ 1 L



⑧ 1.4 L





小数の意味と表し方 4

◎ 水のかさをぬる

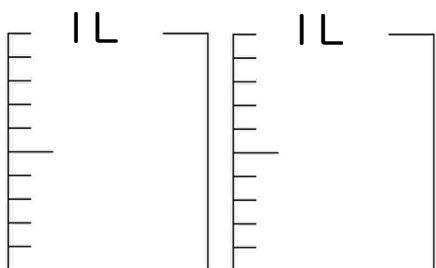


日にち： 月 日

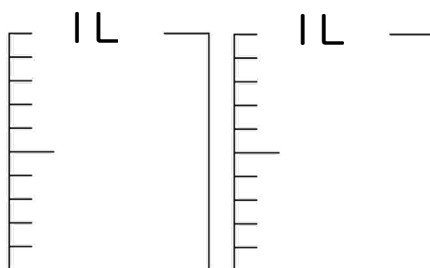
名まえ _____

・ 水のかさだけ色を塗りましょう

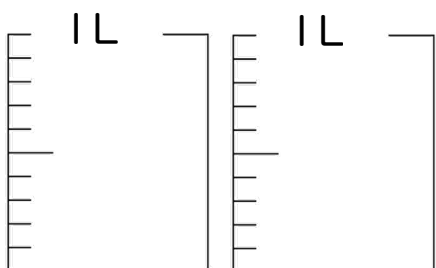
① 0.8 L



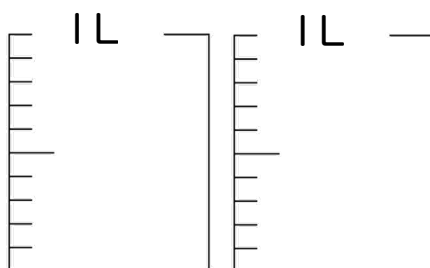
⑤ 1 L



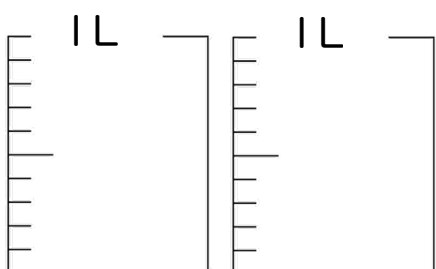
② 0.3 L



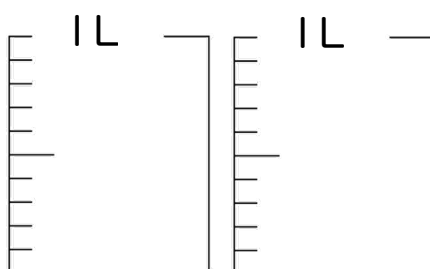
⑥ 2 L



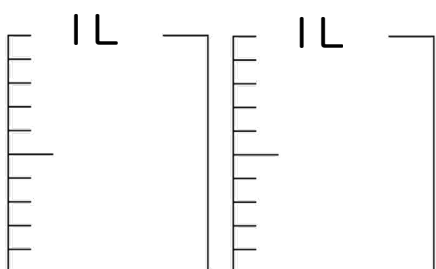
③ 1.8 L



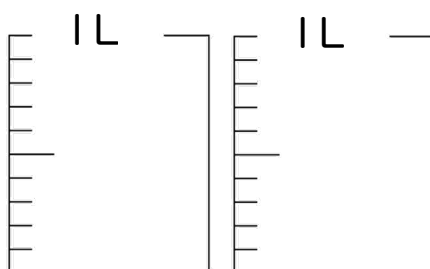
⑦ 1.9 L



④ 0.4 L



⑧ 1.3 L





小数の意味と表し方 4

◎ 水のかさをぬる

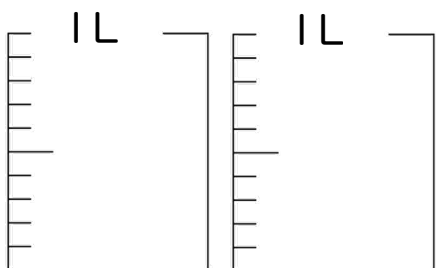


日にち： 月 日

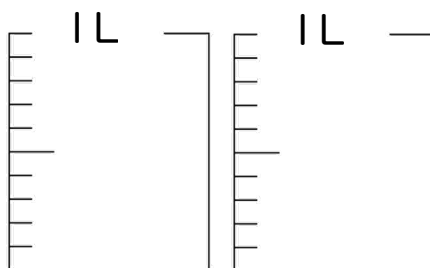
名まえ _____

・ 水のかさだけ色を塗りましょう

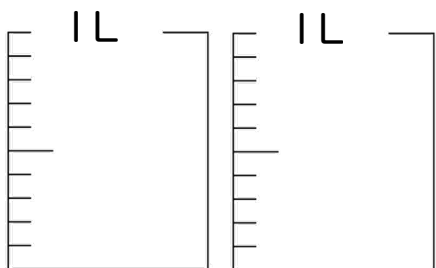
① 0.3 L



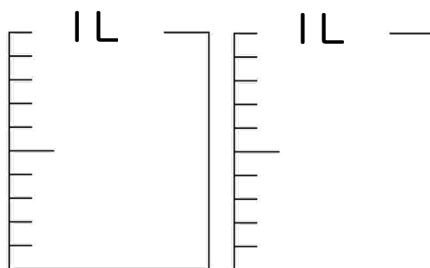
⑤ 1.4 L



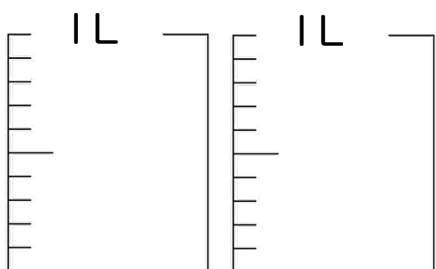
② 1.5 L



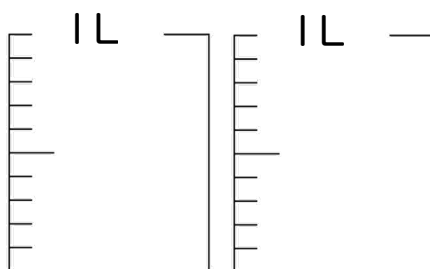
⑥ 1 L



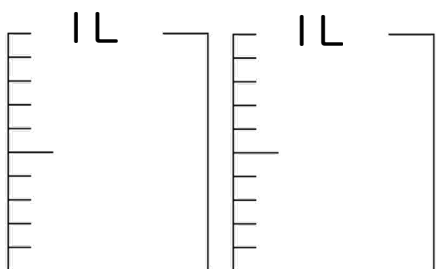
③ 0.4 L



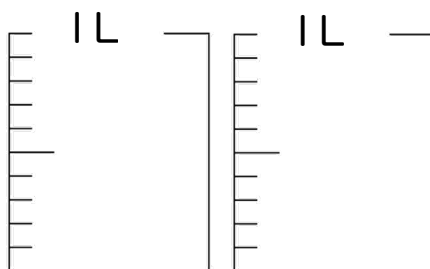
⑦ 1.2 L




④ 0.1 L



⑧ 0.6 L





小数の意味と表し方 4

◎ 水のかさをぬる

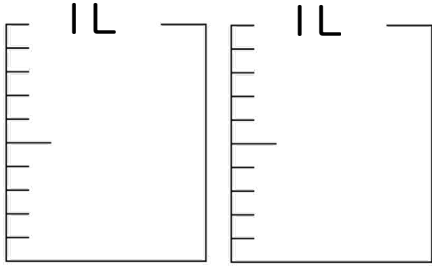


日にち： 月 日

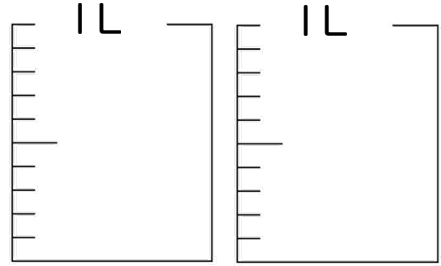
名まえ _____

1 水のかさだけ色を塗りましょう

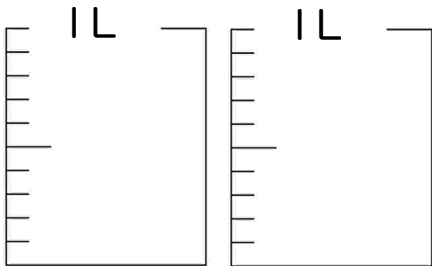
① 0.5 L



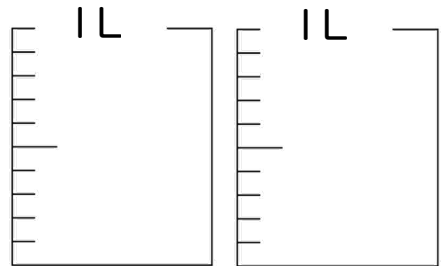
③ 0.7 L



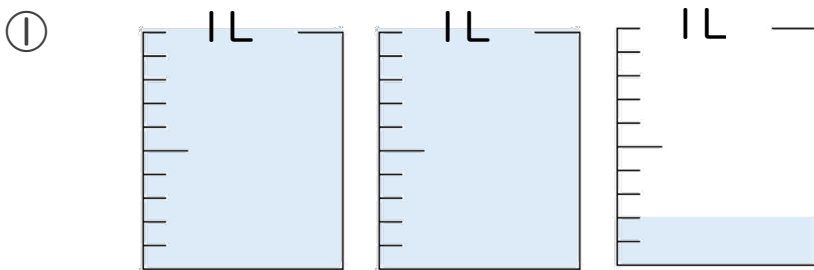
② 1.5 L



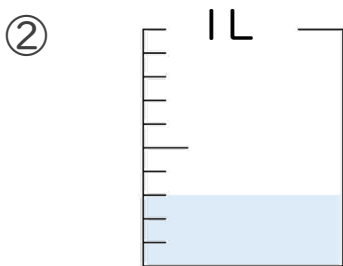
④ 1.1 L



2 水のかさは、何Lでしょう。




答え _____ L



答え _____ L





小数の意味と表し方 4

◎ 水のかさをぬる

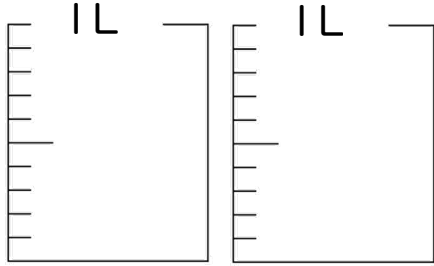


日にち： 月 日

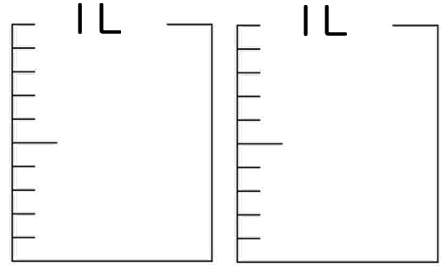
名まえ _____

1 水のかさだけ色を塗りましょう

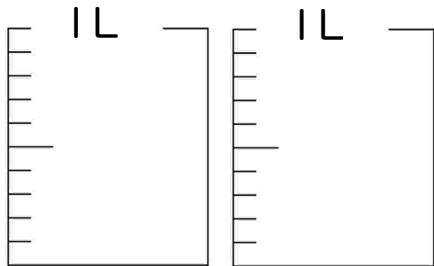
① 2 L



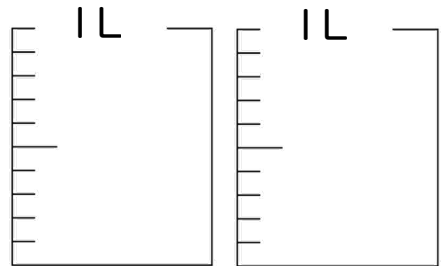
③ 1.1 L



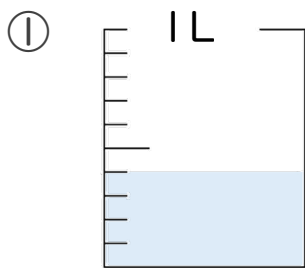
② 0.8 L



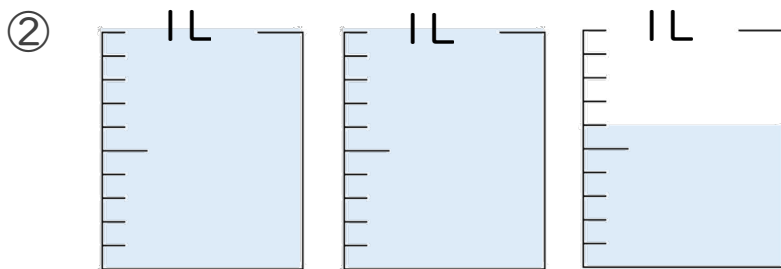
④ 1.5 L



2 水のかさは、何Lでしょう。




答え _____ L



答え _____ L





小数の意味と表し方 4

◎ 水のかさをぬる

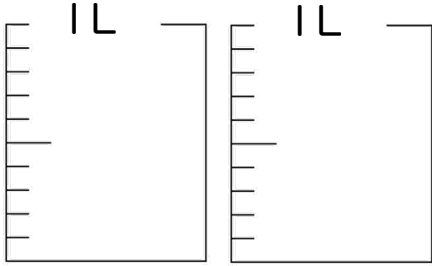
12

日にち： 月 日

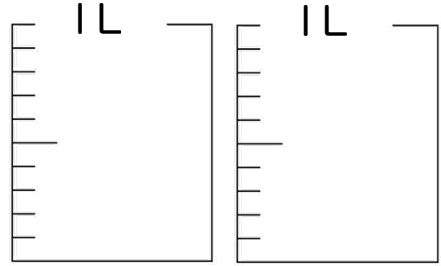
名まえ _____

1 水のかさだけ色を塗りましょう

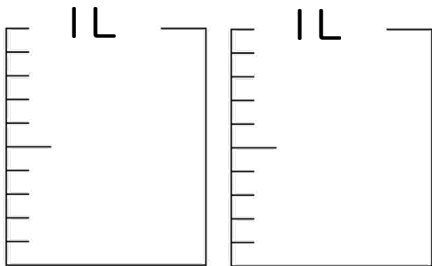
① 0.7 L



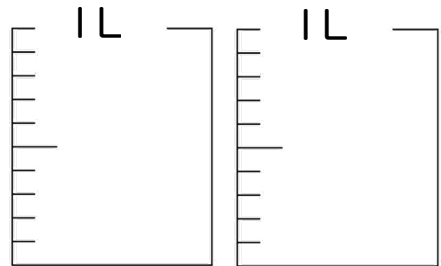
③ 1.5 L



② 1.4 L

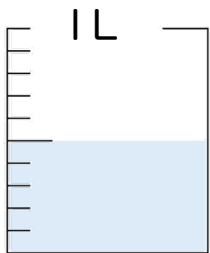


④ 2 L



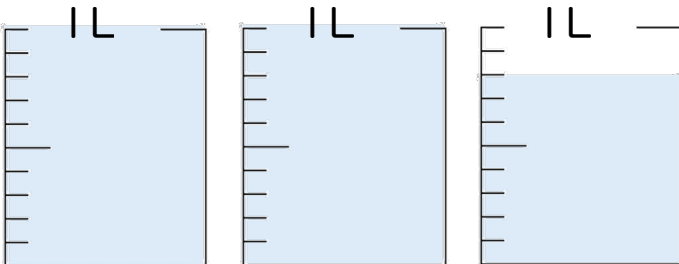
2 水のかさは、何Lでしょう。

①




答え _____ L

②



答え _____ L





小数の意味と表し方 4

◎ 水のかさをぬる

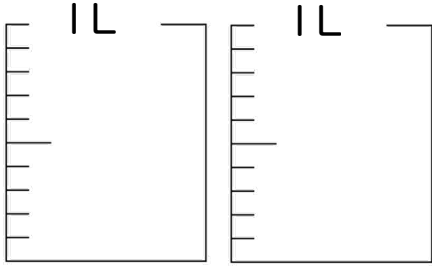
13

日にち： 月 日

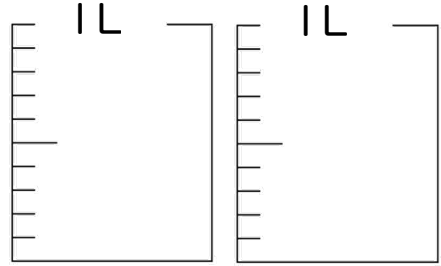
名まえ _____

1 水のかさだけ色を塗りましょう

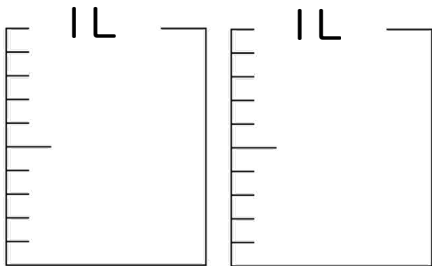
① 1.6 L



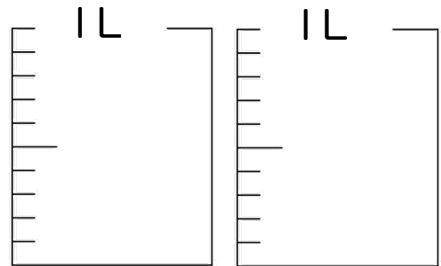
③ 0.4 L



② 1.5 L

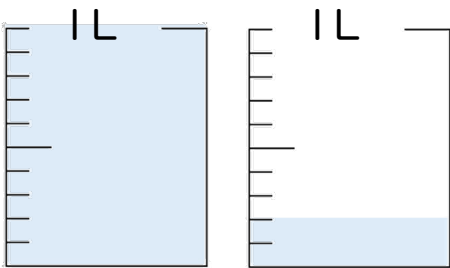


④ 1.9 L



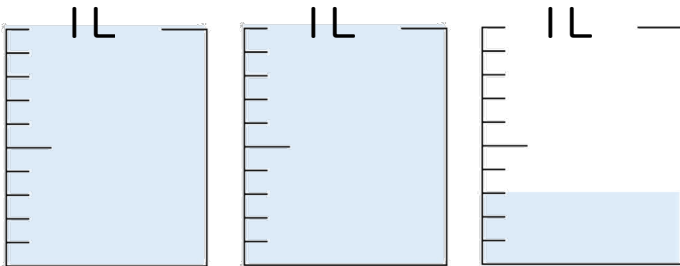
2 水のかさは、何Lでしょう。

①




答え _____ L

②



答え _____ L





小数の意味と表し方 4

◎ 水のかさをぬる

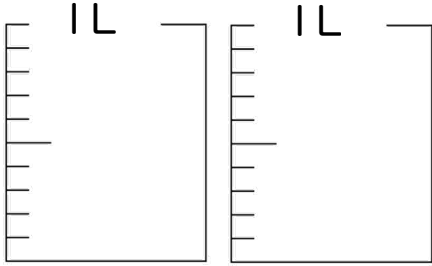
14

日にち： 月 日

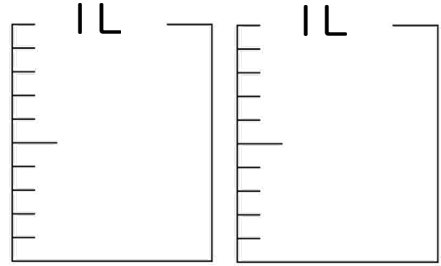
名まえ _____

1 水のかさだけ色を塗りましょう

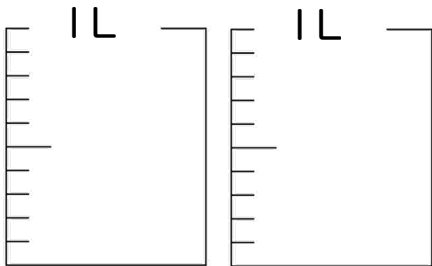
① 0.3 L



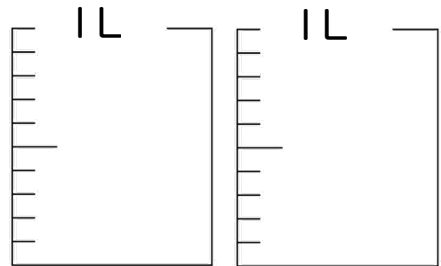
③ 0.1 L



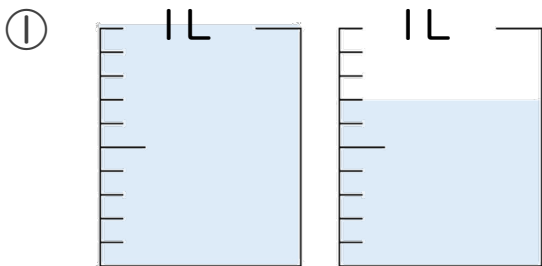
② 1.7 L



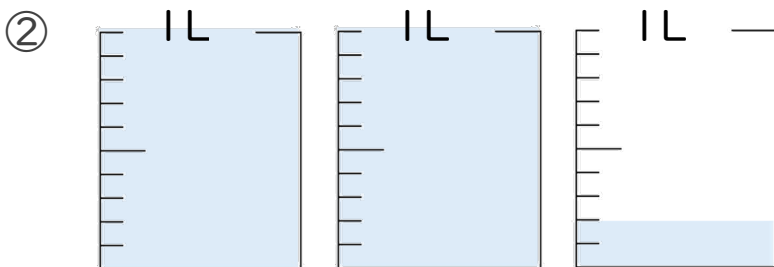
④ 1.8 L




2 水のかさは、何Lでしょう。



答え _____ L



答え _____ L



小数の意味と表し方 4

◎ 水のかさをぬる

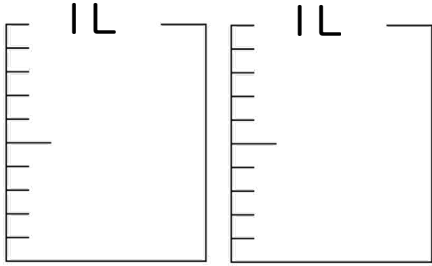
15

日にち： 月 日

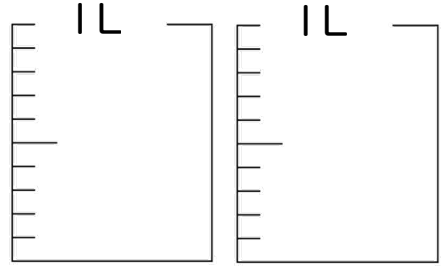
名まえ _____

1 水のかさだけ色を塗りましょう

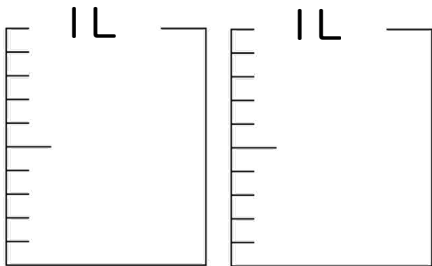
① 1.4 L



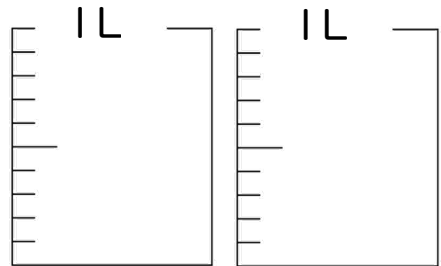
③ 1.1 L



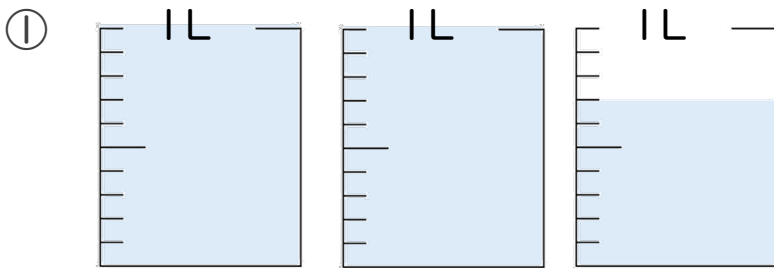
② 2 L



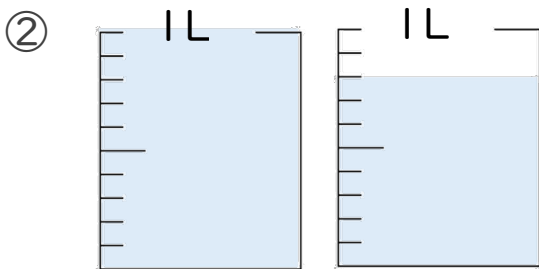
④ 1 L



2 水のかさは、何Lでしょう。




答え _____ L



答え _____ L





小数の意味と表し方 4

◎ 水のかさをぬる

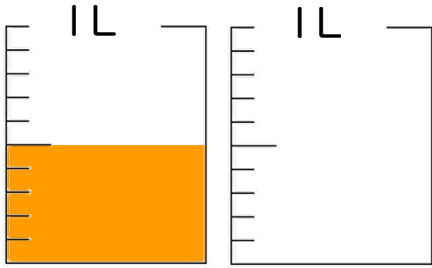


日にち： 月 日

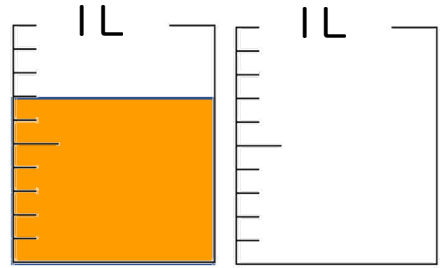
名まえ _____

・ 水のかさだけ色を塗りましょう

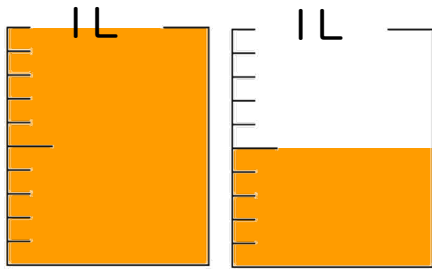
① 0.5 L



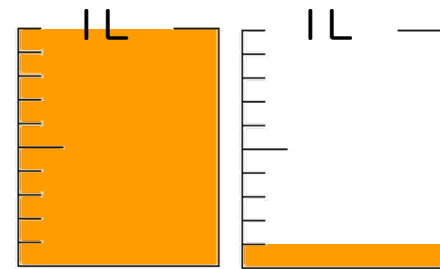
⑤ 0.7 L



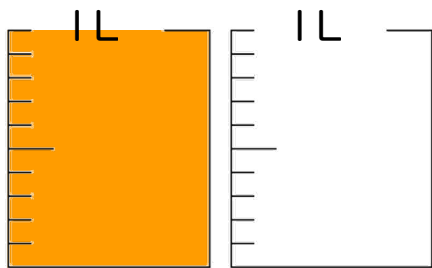
② 1.5 L



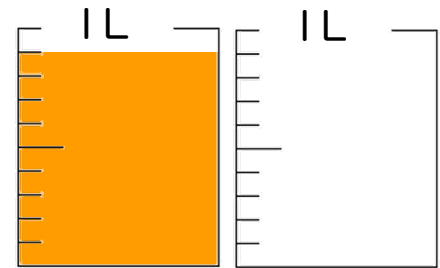
⑥ 1.1 L



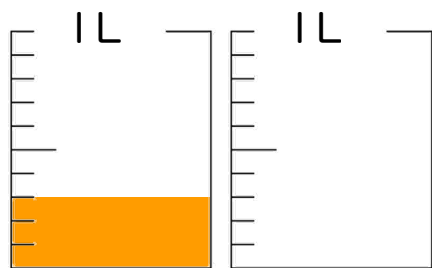
③ 1 L



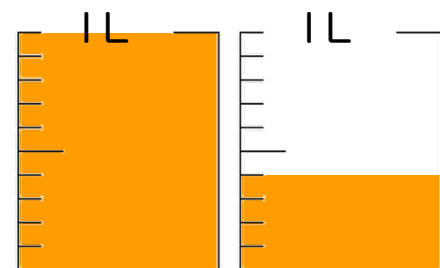
⑦ 0.9 L




④ 0.3 L



⑧ 1.4 L





小数の意味と表し方 4

◎ 水のかさをぬる

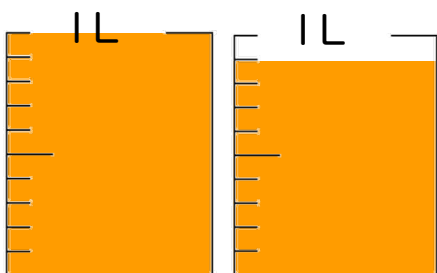


日にち： 月 日

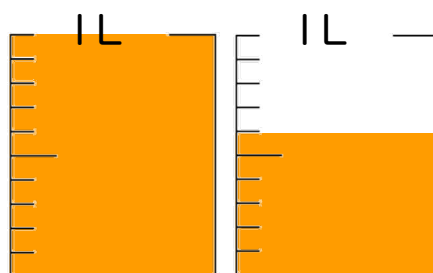
名まえ _____

・ 水のかさだけ色を塗りましょう

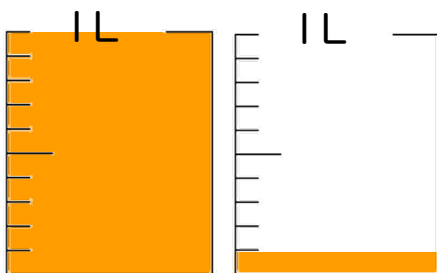
① 1.9 L



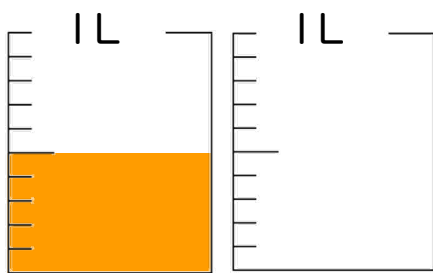
⑤ 1.6 L



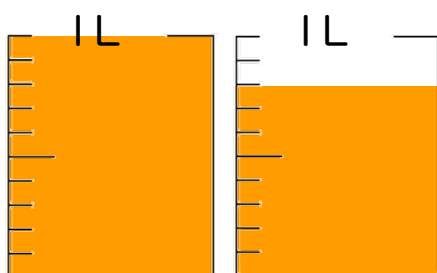
② 1.1 L



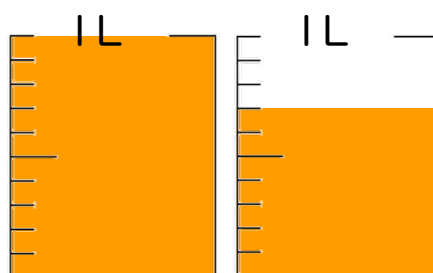
⑥ 0.5 L



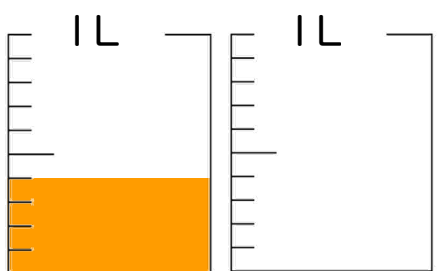
③ 1.8 L



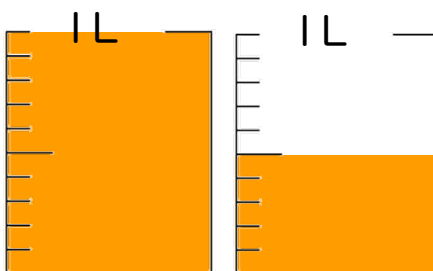
⑦ 1.7 L




④ 0.4 L



⑧ 1.5 L





小数の意味と表し方 4

◎ 水のかさをぬる

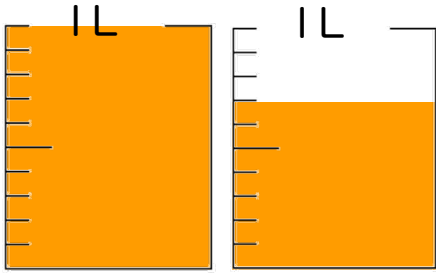


日にち： 月 日

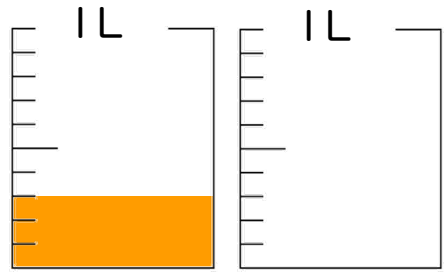
名まえ _____

・ 水のかさだけ色を塗りましょう

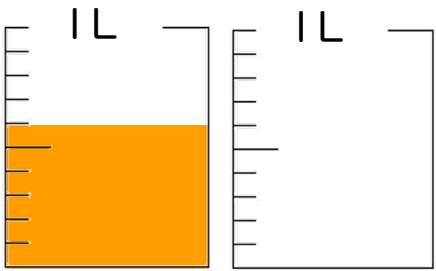
① 1.7 L



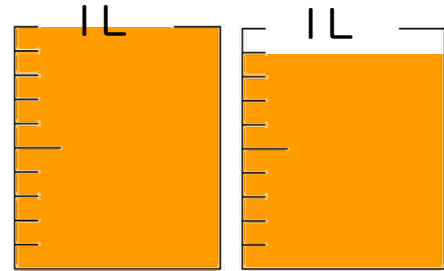
⑤ 0.3 L



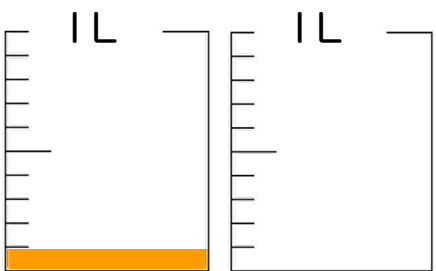
② 0.6 L



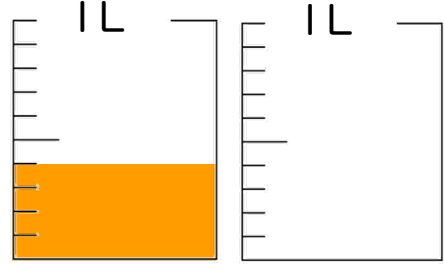
⑥ 1.9 L



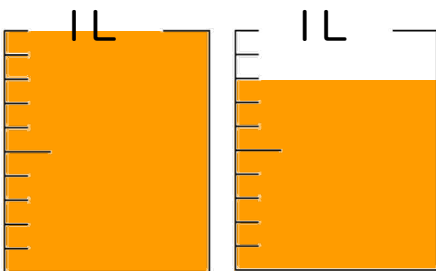
③ 0.1 L



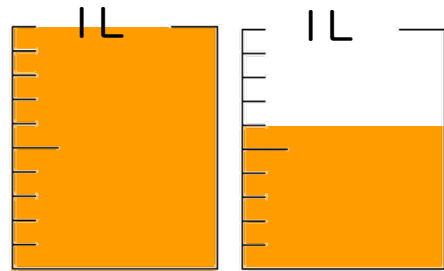
⑦ 0.4 L



④ 1.8 L



⑧ 1.6 L





小数の意味と表し方 4

◎ 水のかさをぬる

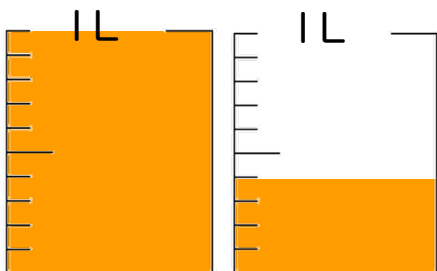


日にち： 月 日

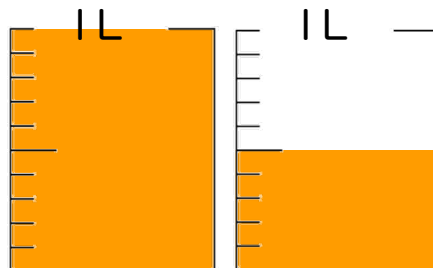
名まえ _____

・ 水のかさだけ色を塗りましょう

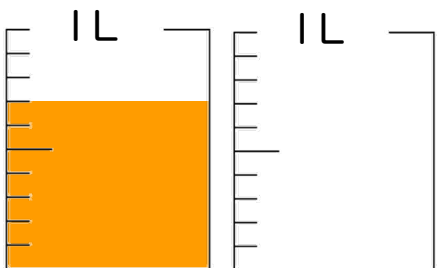
① 1.4 L



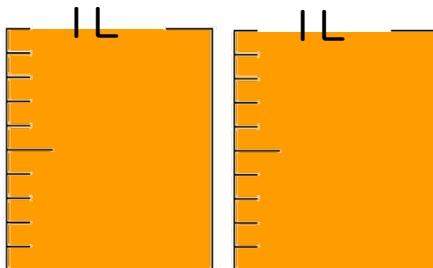
⑤ 1.5 L



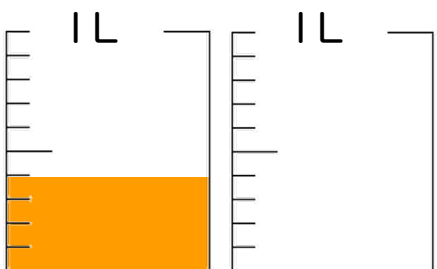
② 0.7 L



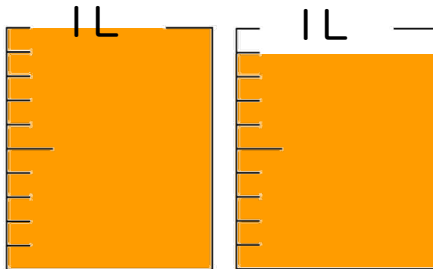
⑥ 2 L



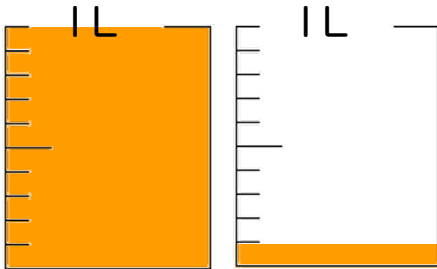
③ 0.4 L



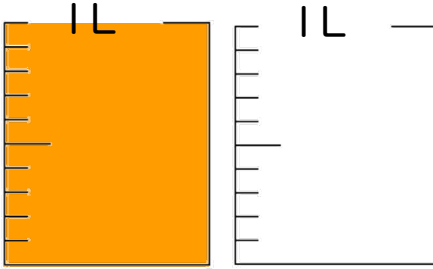
⑦ 1.9 L



④ 1.1 L




⑧ 1 L



④ 確認 答え



すらすらぷりん



小数の意味と表し方 4

◎ 水のかさをぬる

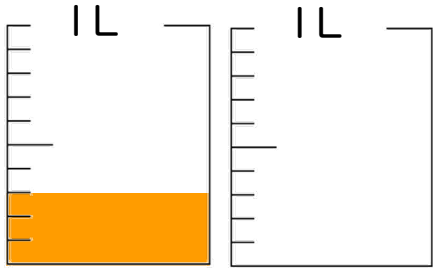


日にち： 月 日

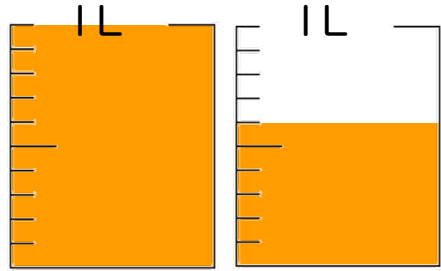
名まえ _____

・ 水のかさだけ色を塗りましょう

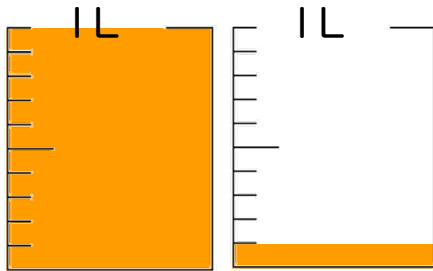
① 0.3 L



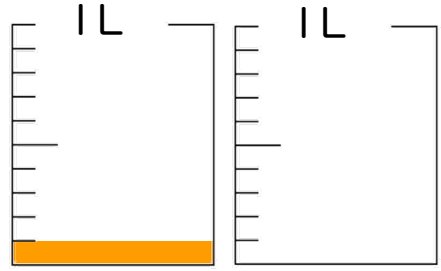
⑤ 1.6 L



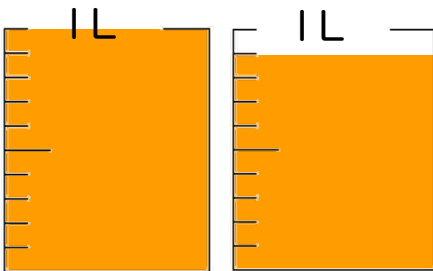
② 1.1 L



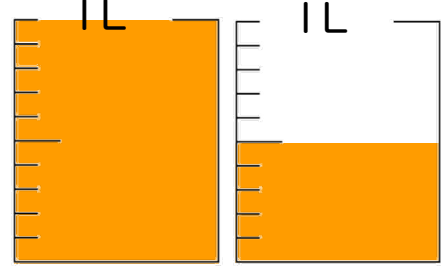
⑥ 0.1 L



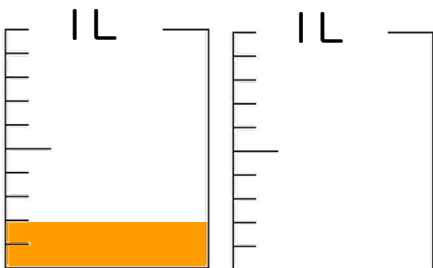
③ 1.9 L



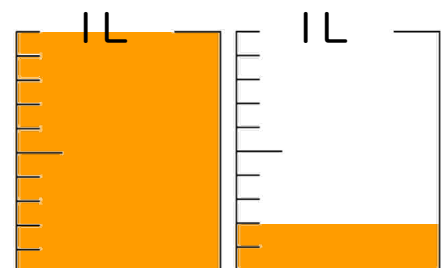
⑦ 1.5 L




④ 0.2 L



⑧ 1.2 L





小数の意味と表し方 4

◎ 水のかさをぬる

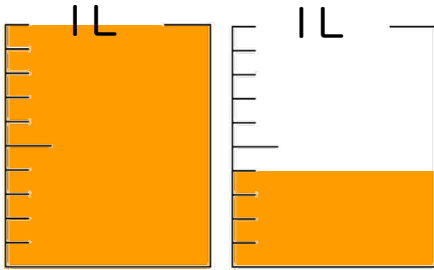


日にち： 月 日

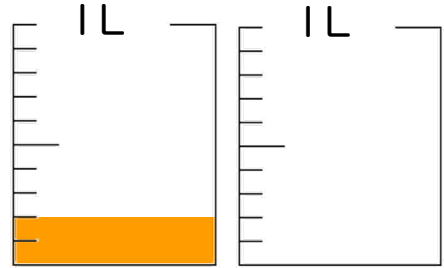
名まえ _____

・ 水のかさだけ色を塗りましょう

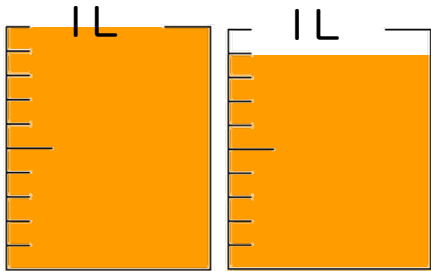
① 1.4 L



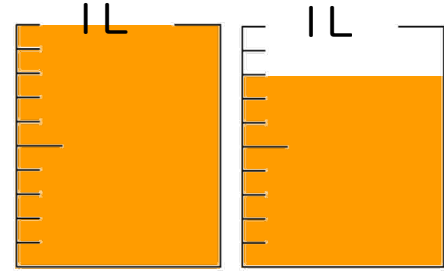
⑤ 0.2 L



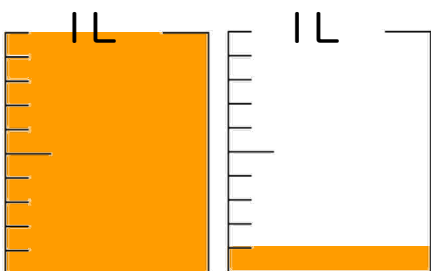
② 1.9 L



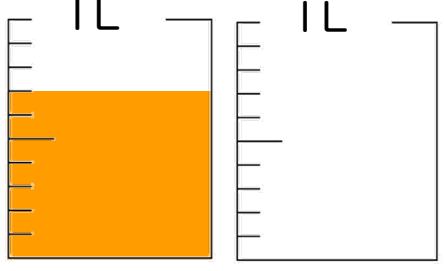
⑥ 1.8 L



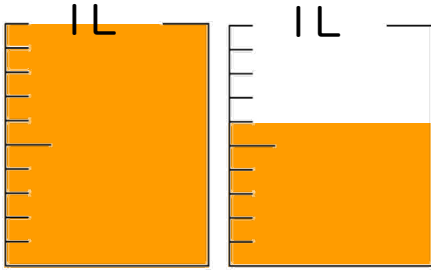
③ 1.1 L



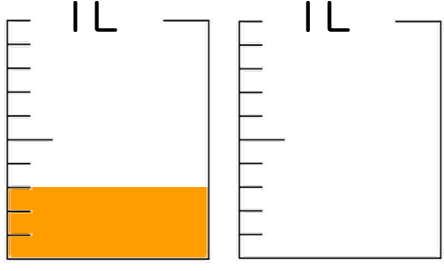
⑦ 0.7 L




④ 1.6 L



⑧ 0.3 L





小数の意味と表し方 4

◎ 水のかさをぬる

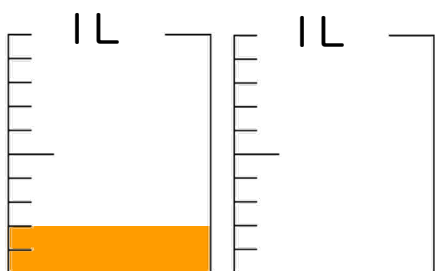


日にち： 月 日

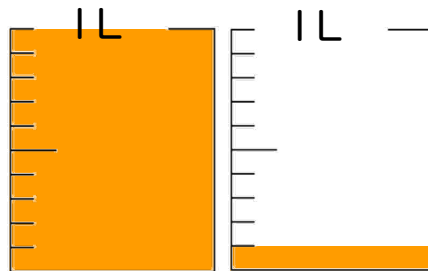
名まえ _____

・ 水のかさだけ色を塗りましょう

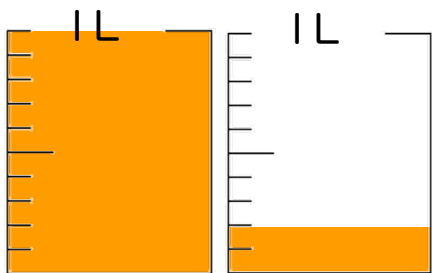
① 0.2 L



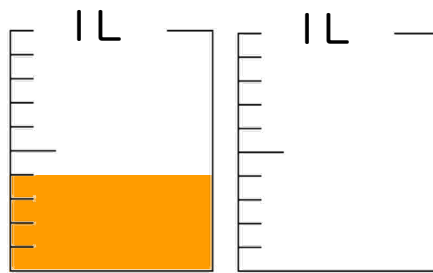
⑤ 1.1 L



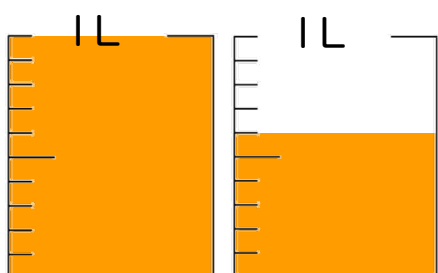
② 1.2 L



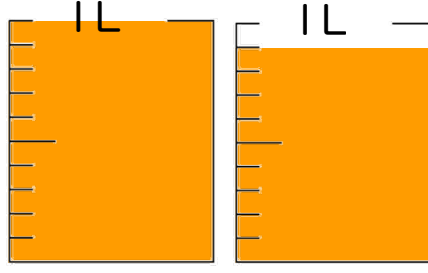
⑥ 0.4 L



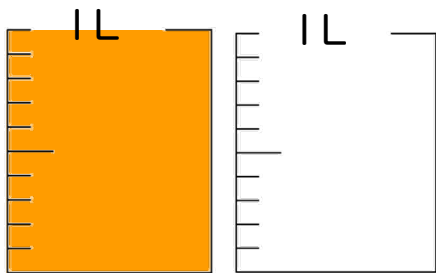
③ 1.6 L



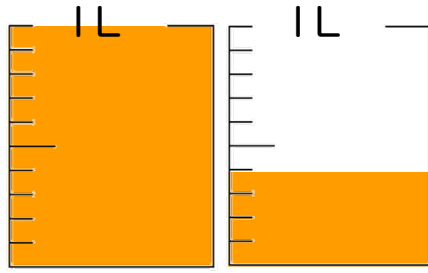
⑦ 1.9 L




④ 1 L



⑧ 1.4 L





小数の意味と表し方 4

◎ 水のかさをぬる

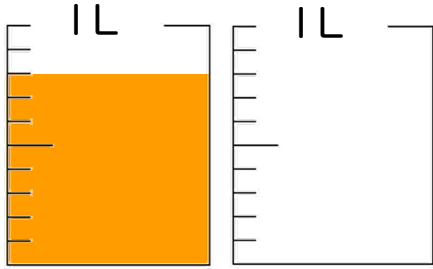


日にち： 月 日

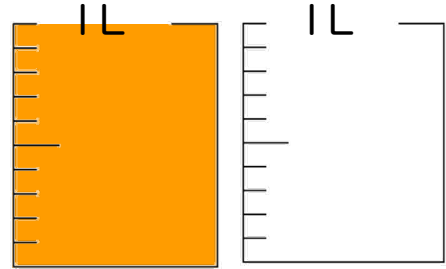
名まえ _____

・ 水のかさだけ色を塗りましょう

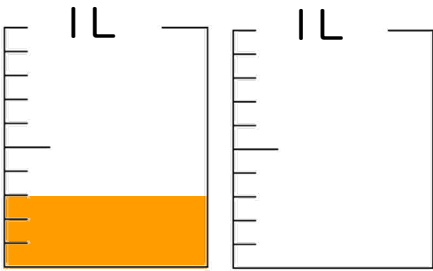
① 0.8 L



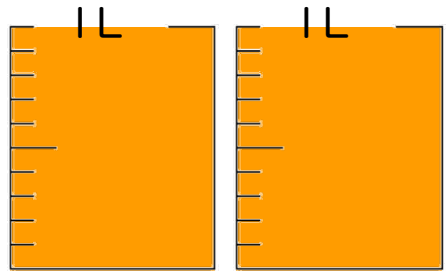
⑤ 1 L



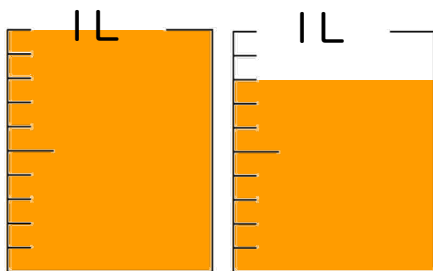
② 0.3 L



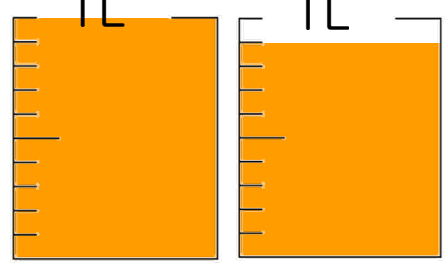
⑥ 2 L



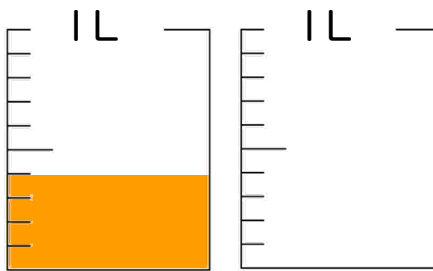
③ 1.8 L



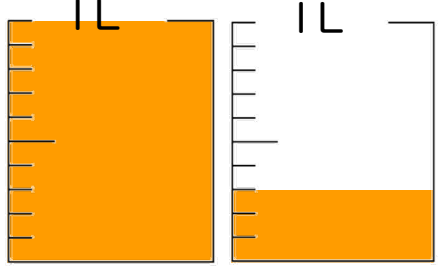
⑦ 1.9 L




④ 0.4 L



⑧ 1.3 L





小数の意味と表し方 4

◎ 水のかさをぬる

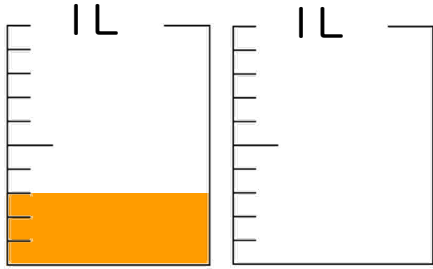


日にち： 月 日

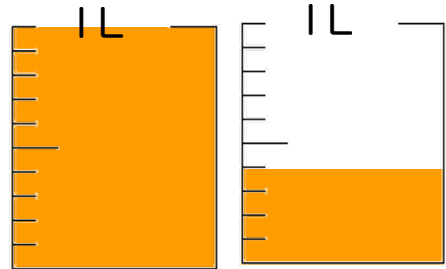
名まえ _____

・ 水のかさだけ色を塗りましょう

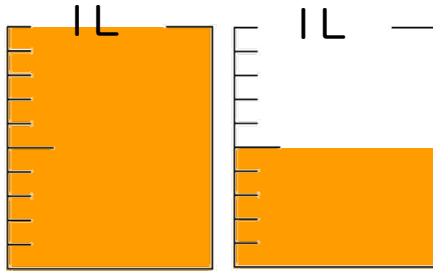
① 0.3 L



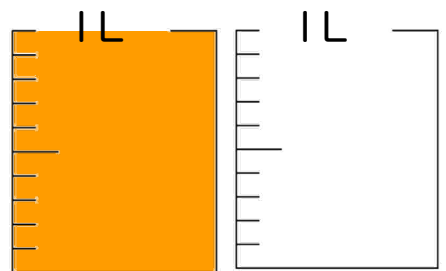
⑤ 1.4 L



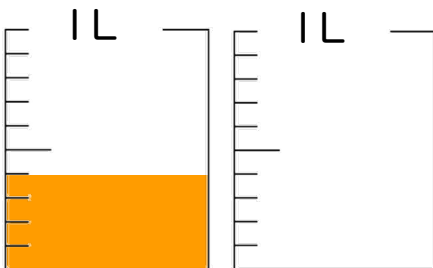
② 1.5 L



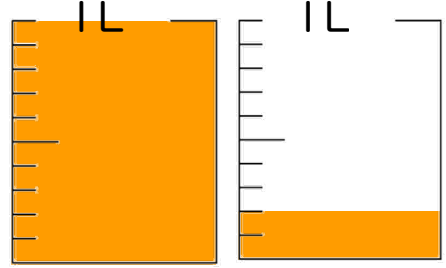
⑥ 1 L



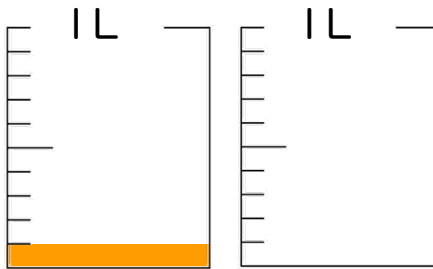
③ 0.4 L



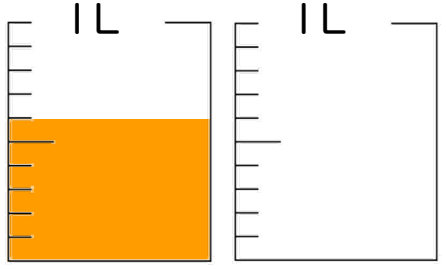
⑦ 1.2 L




④ 0.1 L



⑧ 0.6 L





小数の意味と表し方 4

㊦ 水のかさをぬる

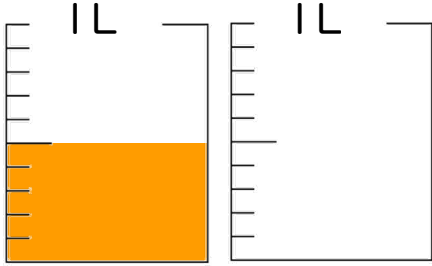


日にち： 月 日

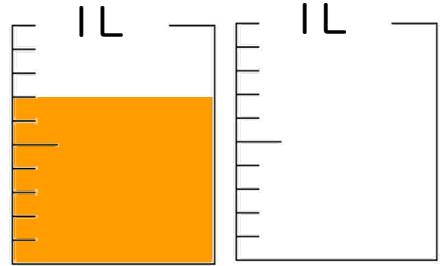
名まえ _____

1 水のかさだけ色を塗りましょう

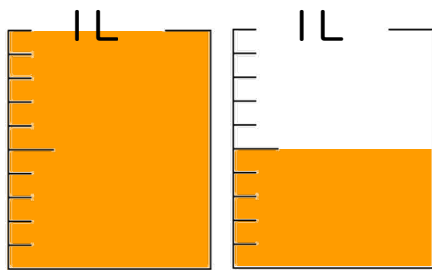
① 0.5 L



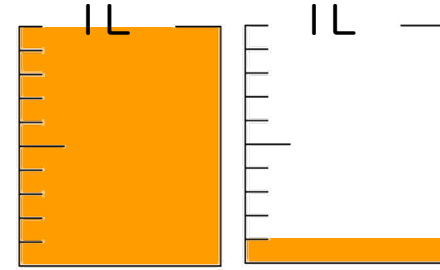
③ 0.7 L



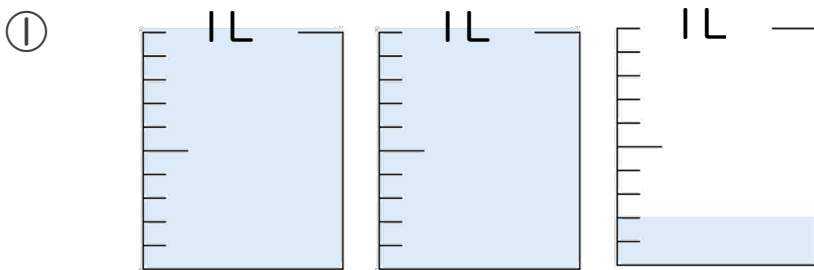
② 1.5 L



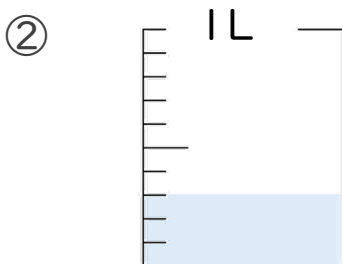
④ 1.1 L



2 水のかさは、何Lでしょう。




答え 2.2 L



答え 0.3 L





小数の意味と表し方 4

◎ 水のかさをぬる

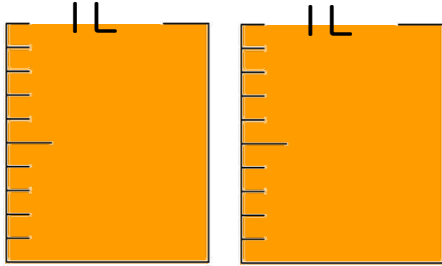


日にち： 月 日

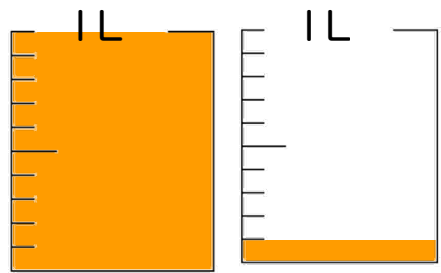
名まえ _____

1 水のかさだけ色を塗りましょう

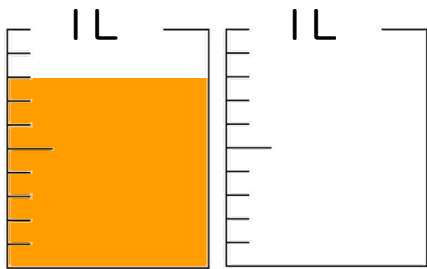
① 2 L



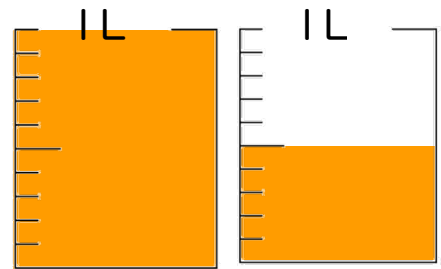
③ 1.1 L



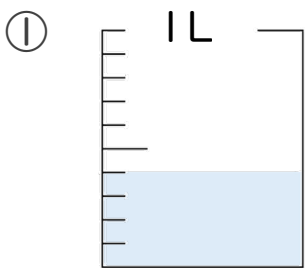
② 0.8 L



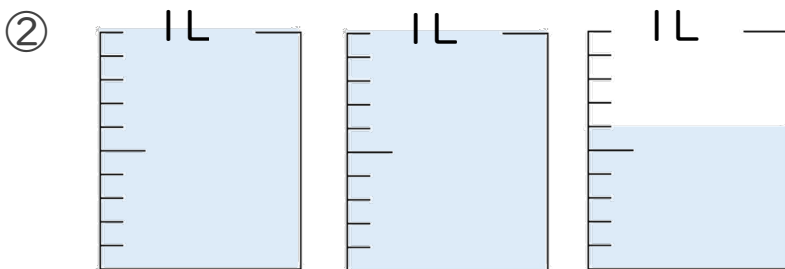
④ 1.5 L



2 水のかさは、何Lでしょう。




答え 0.4 L



答え 2.6 L





小数の意味と表し方 4

◎ 水のかさをぬる

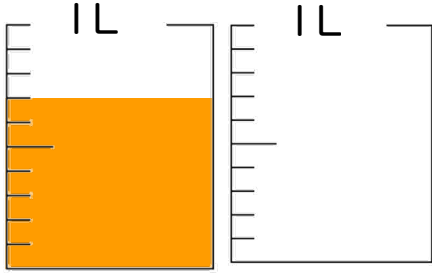
12

日にち： 月 日

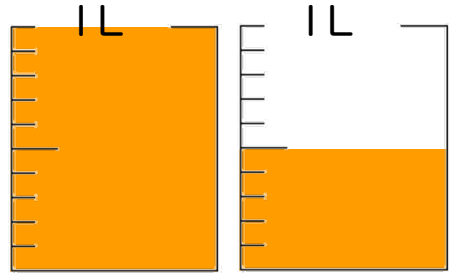
名まえ _____

1 水のかさだけ色を塗りましょう

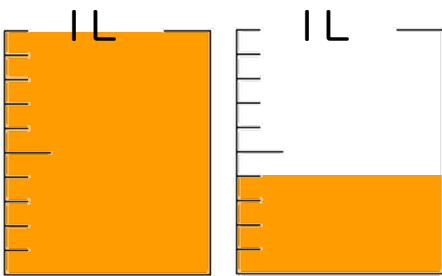
① 0.7 L



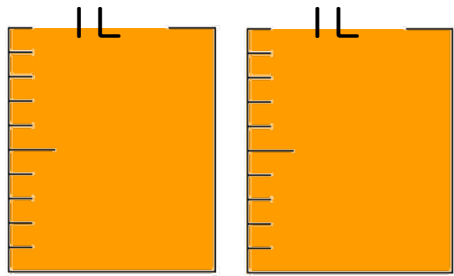
③ 1.5 L



② 1.4 L

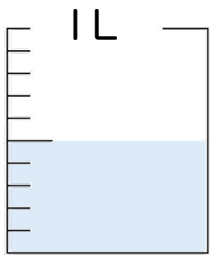


④ 2 L



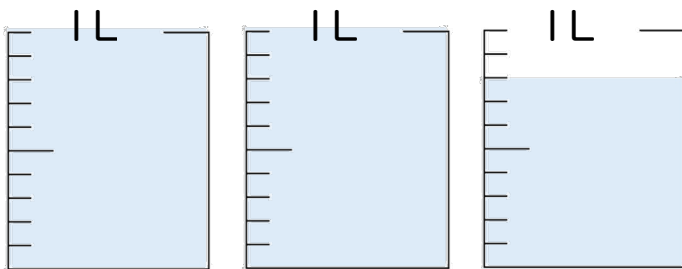
2 水のかさは、何Lでしょう。

①




答え 0.5 L

②



答え 2.8 L





小数の意味と表し方 4

◎ 水のかさをぬる

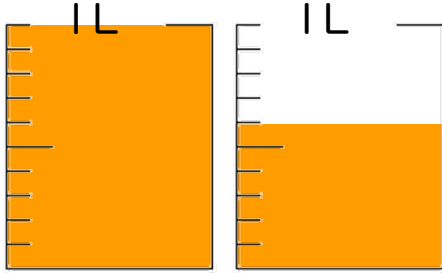
13

日にち： 月 日

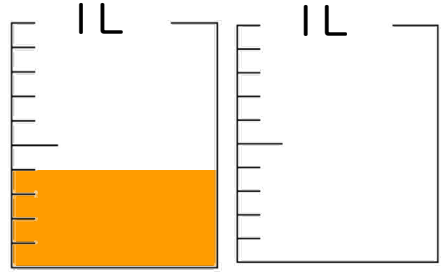
名まえ _____

1 水のかさだけ色を塗りましょう

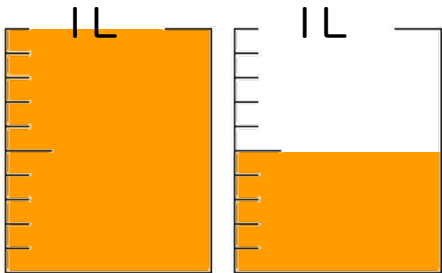
① 1.6 L



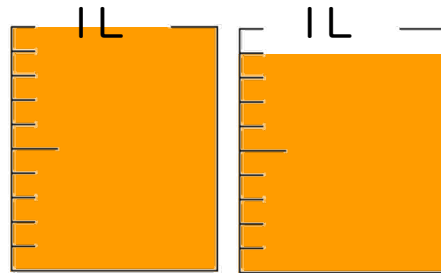
③ 0.4 L



② 1.5 L

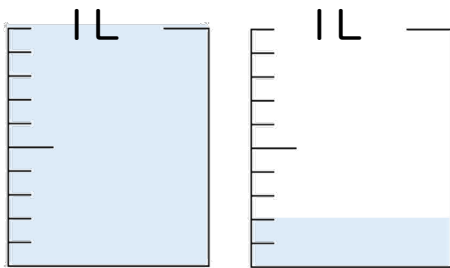


④ 1.9 L



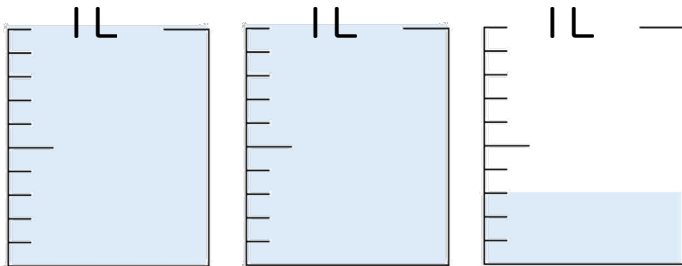
2 水のかさは、何Lでしょう。

①




答え 1.2 L

②



答え 2.3 L





小数の意味と表し方 4

◎ 水のかさをぬる

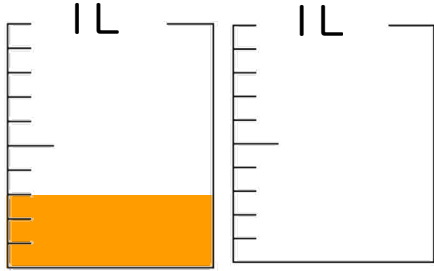
14

日にち： 月 日

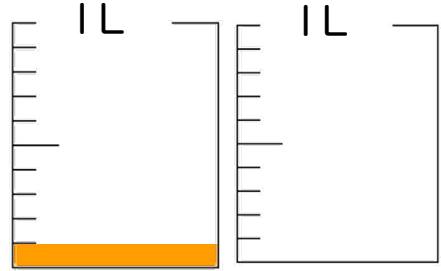
名まえ _____

1 水のかさだけ色を塗りましょう

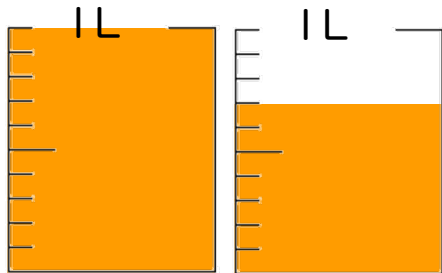
① 0.3 L



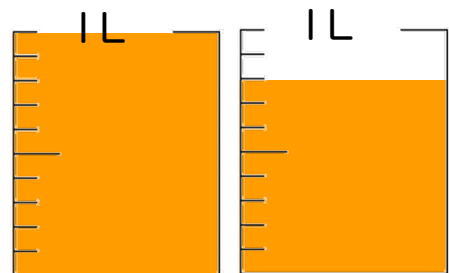
③ 0.1 L



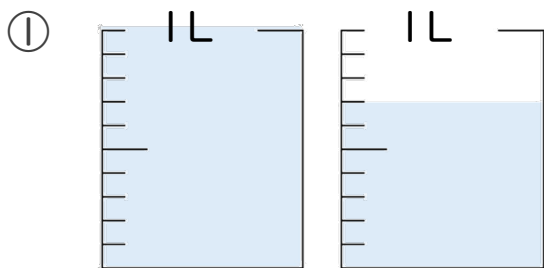
② 1.7 L



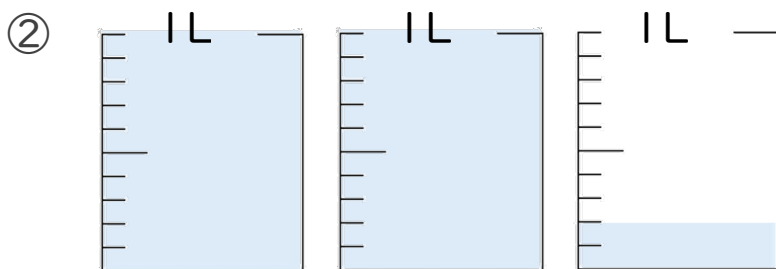
④ 1.8 L



2 水のかさは、何Lでしょう。




答え 1.7 L



答え 2.2 L





小数の意味と表し方 4

◎ 水のかさをぬる

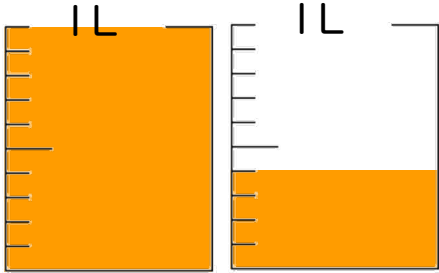
15

日にち： 月 日

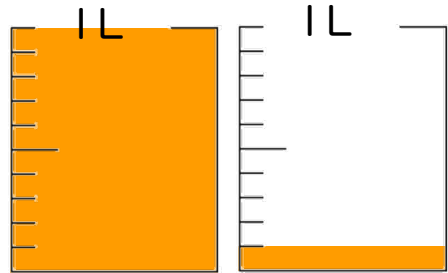
名まえ _____

1 水のかさだけ色を塗りましょう

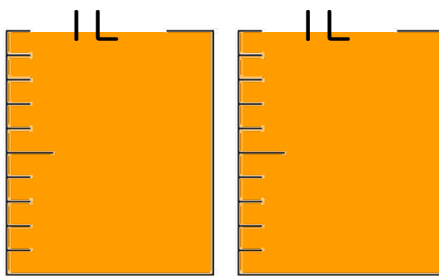
① 1.4 L



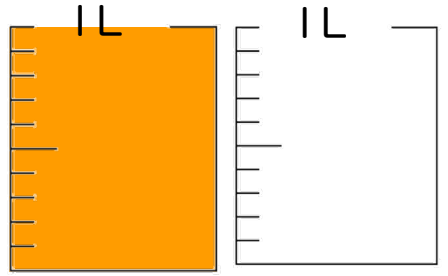
③ 1.1 L



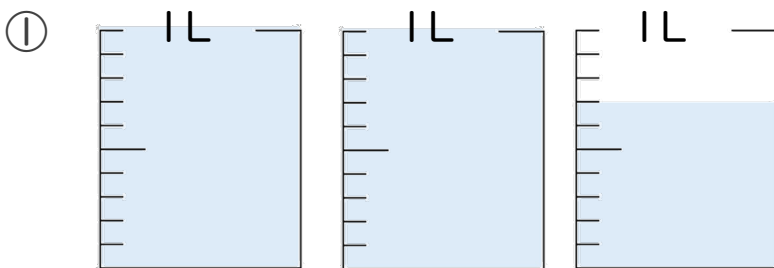
② 2 L



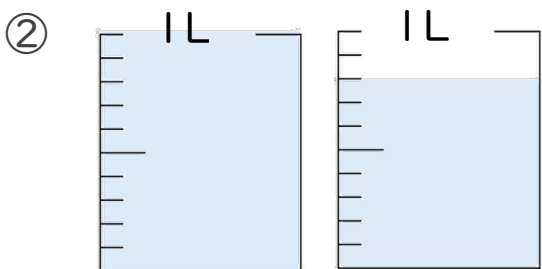
④ 1 L



2 水のかさは、何Lでしょう。



答え 2.7 L



答え 1.8 L

