



# 小数の意味と表し方9

● 小数のcmをmmになおす



日にち：            月            日

名まえ \_\_\_\_\_

・  にあてはまる数を書きましょう。(うすい字はなぞりましょう。)

① 3.7 cm =  cm  mm

② 0.7 cm =  mm

③ 7.9 cm =  cm  mm

④ 0.9 cm =  mm

⑤ 0.6 cm =  mm

⑥ 2.5 cm =  cm  mm

⑦ 5.7 cm =  cm  mm

⑧ 23.6 cm =  cm  mm

⑨ 0.1 cm =  mm

⑩ 72.3 cm =  cm  mm

⑪ 8.3 cm =  cm  mm

⑫ 26.1 cm =  cm  mm

⑬ 0.8 cm =  mm

⑭ 3.4 cm =  cm  mm

⑮ 9.9 cm =  cm  mm

⑯ 0.2 cm =  mm

⑰ 53.8 cm =  cm  mm

⑱ 1.1 cm =  cm  mm



# 小数の意味と表し方9

● 小数のcmをmmになおす



日にち： 月 日

名まえ \_\_\_\_\_

・  にあてはまる数を書きましょう。(うすい字はなぞりましょう。)

① 4.2 cm =  cm  mm

② 0.6 cm =  mm

③ 5.2 cm =  cm  mm

④ 0.1 cm =  mm

⑤ 0.9 cm =  mm

⑥ 7.1 cm =  cm  mm

⑦ 9.2 cm =  cm  mm

⑧ 81.7 cm =  cm  mm

⑨ 0.2 cm =  mm

⑩ 17.8 cm =  cm  mm

⑪ 9.1 cm =  cm  mm

⑫ 62.7 cm =  cm  mm

⑬ 0.4 cm =  mm

⑭ 9.5 cm =  cm  mm

⑮ 7.8 cm =  cm  mm

⑯ 0.7 cm =  mm

⑰ 45.4 cm =  cm  mm

⑱ 3.4 cm =  cm  mm



# 小数の意味と表し方9

● 小数のcmをmmになおす

3

日にち： 月 日

名まえ \_\_\_\_\_

・  にあてはまる数を書きましょう。(うすい字はなぞりましょう。)

①  $2.3 \text{ cm} = \boxed{2} \text{ cm } \boxed{3} \text{ mm}$

②  $0.1 \text{ cm} = \boxed{1} \text{ mm}$

③  $1.7 \text{ cm} = \boxed{\quad} \text{ cm } \boxed{\quad} \text{ mm}$

④  $0.3 \text{ cm} = \boxed{\quad} \text{ mm}$

⑤  $0.6 \text{ cm} = \boxed{\quad} \text{ mm}$

⑥  $8.6 \text{ cm} = \boxed{\quad} \text{ cm } \boxed{\quad} \text{ mm}$

⑦  $6.5 \text{ cm} = \boxed{\quad} \text{ cm } \boxed{\quad} \text{ mm}$

⑧  $31.8 \text{ cm} = \boxed{31} \text{ cm } \boxed{8} \text{ mm}$

⑨  $0.8 \text{ cm} = \boxed{\quad} \text{ mm}$

⑩  $25.7 \text{ cm} = \boxed{\quad} \text{ cm } \boxed{\quad} \text{ mm}$

⑪  $3.5 \text{ cm} = \boxed{\quad} \text{ cm } \boxed{\quad} \text{ mm}$

⑫  $59.3 \text{ cm} = \boxed{\quad} \text{ cm } \boxed{\quad} \text{ mm}$

⑬  $0.2 \text{ cm} = \boxed{\quad} \text{ mm}$

⑭  $3.2 \text{ cm} = \boxed{\quad} \text{ cm } \boxed{\quad} \text{ mm}$

⑮  $7.3 \text{ cm} = \boxed{\quad} \text{ cm } \boxed{\quad} \text{ mm}$

⑯  $0.4 \text{ cm} = \boxed{\quad} \text{ mm}$

⑰  $26.6 \text{ cm} = \boxed{\quad} \text{ cm } \boxed{\quad} \text{ mm}$

⑱  $1.9 \text{ cm} = \boxed{\quad} \text{ cm } \boxed{\quad} \text{ mm}$



# 小数の意味と表し方9

● 小数のcmをmmになおす



日にち： 月 日

名まえ \_\_\_\_\_

・  にあてはまる数を書きましょう。(うすい字はなぞりましょう。)

① 7.1 cm =  cm  mm

② 0.6 cm =  mm

③ 2.2 cm =  cm  mm

④ 0.7 cm =  mm

⑤ 0.1 cm =  mm

⑥ 7.2 cm =  cm  mm

⑦ 8.5 cm =  cm  mm

⑧ 63.2 cm =  cm  mm

⑨ 0.8 cm =  mm

⑩ 78.7 cm =  cm  mm

⑪ 5.8 cm =  cm  mm

⑫ 92.9 cm =  cm  mm

⑬ 0.4 cm =  mm

⑭ 2.8 cm =  cm  mm

⑮ 4.8 cm =  cm  mm

⑯ 0.2 cm =  mm

⑰ 25.7 cm =  cm  mm

⑱ 4.7 cm =  cm  mm



# 小数の意味と表し方9

● 小数のcmをmmになおす



日にち： 月 日

名まえ \_\_\_\_\_

・  にあてはまる数を書きましょう。(うすい字はなぞりましょう。)

① 8.3 cm =  cm  mm

② 0.3 cm =  mm

③ 7.4 cm =  cm  mm

④ 0.2 cm =  mm

⑤ 0.5 cm =  mm

⑥ 8.7 cm =  cm  mm

⑦ 2.9 cm =  cm  mm

⑧ 67.2 cm =  cm  mm

⑨ 0.1 cm =  mm

⑩ 56.4 cm =  cm  mm

⑪ 4.7 cm =  cm  mm

⑫ 92.4 cm =  cm  mm

⑬ 0.4 cm =  mm

⑭ 1.2 cm =  cm  mm

⑮ 6.4 cm =  cm  mm

⑯ 0.8 cm =  mm

⑰ 63.3 cm =  cm  mm

⑱ 3.9 cm =  cm  mm



# 小数の意味と表し方9

● 小数のcmをmmになおす



日にち： 月 日

名まえ \_\_\_\_\_

・  にあてはまる数を書きましょう。(うすい字はなぞりましょう。)

① 4.4 cm =  cm  mm

② 0.8 cm =  mm

③ 7.6 cm =  cm  mm

④ 0.4 cm =  mm

⑤ 0.2 cm =  mm

⑥ 6.1 cm =  cm  mm

⑦ 1.5 cm =  cm  mm

⑧ 3.2 cm =  cm  mm

⑨ 52.6 cm =  cm  mm

⑩ 21.2 cm =  cm  mm

⑪ 6.9 cm =  cm  mm

⑫ 81.4 cm =  cm  mm

⑬ 0.5 cm =  mm

⑭ 2.9 cm =  cm  mm

⑮ 87.9 cm =  cm  mm

⑯ 0.3 cm =  mm

⑰ 0.9 cm =  mm

⑱ 8.4 cm =  cm  mm



# 小数の意味と表し方9

● 小数のcmをmmになおす



日にち： 月 日

名まえ \_\_\_\_\_

・  にあてはまる数を書きましょう。(うすい字はなぞりましょう。)

① 9.8 cm =  cm  mm

② 0.5 cm =  mm

③ 5.5 cm =  cm  mm

④ 0.9 cm =  mm

⑤ 0.7 cm =  mm

⑥ 8.8 cm =  cm  mm

⑦ 2.9 cm =  cm  mm

⑧ 16.5 cm =  cm  mm

⑨ 0.4 cm =  mm

⑩ 28.4 cm =  cm  mm

⑪ 6.4 cm =  cm  mm

⑫ 91.8 cm =  cm  mm

⑬ 0.6 cm =  mm

⑭ 2.2 cm =  cm  mm

⑮ 4.4 cm =  cm  mm

⑯ 0.3 cm =  mm

⑰ 23.9 cm =  cm  mm

⑱ 8.1 cm =  cm  mm



# 小数の意味と表し方9

● 小数のcmをmmになおす



日にち： 月 日

名まえ \_\_\_\_\_

・  にあてはまる数を書きましょう。

① 1.3 cm =  cm  mm

② 0.9 cm =  mm

③ 7.2 cm =  cm  mm

④ 0.3 cm =  mm

⑤ 0.6 cm =  mm

⑥ 2.5 cm =  cm  mm

⑦ 6.2 cm =  cm  mm

⑧ 2.2 cm =  cm  mm

⑨ 98.1 cm =  cm  mm

⑩ 45.1 cm =  cm  mm

⑪ 2.3 cm =  cm  mm

⑫ 88.4 cm =  cm  mm

⑬ 0.4 cm =  mm

⑭ 7.6 cm =  cm  mm

⑮ 55.2 cm =  cm  mm

⑯ 0.5 cm =  mm

⑰ 0.1 cm =  mm

⑱ 7.3 cm =  cm  mm





# 小数の意味と表し方9

● 小数のcmをmmになおす



日にち： 月 日

名まえ \_\_\_\_\_

・  にあてはまる数を書きましょう。

① 8.7 cm =  cm  mm

② 0.9 cm =  mm

③ 5.3 cm =  cm  mm

④ 0.3 cm =  mm

⑤ 0.5 cm =  mm

⑥ 1.9 cm =  cm  mm

⑦ 5.2 cm =  cm  mm

⑧ 41.5 cm =  cm  mm

⑨ 0.6 cm =  mm

⑩ 2.2 cm =  cm  mm

⑪ 4.2 cm =  cm  mm

⑫ 79.2 cm =  cm  mm

⑬ 0.7 cm =  mm

⑭ 9.1 cm =  cm  mm

⑮ 5.1 cm =  cm  mm

⑯ 0.4 cm =  mm

⑰ 64.4 cm =  cm  mm

⑱ 4.8 cm =  cm  mm



# 小数の意味と表し方9

● 小数のcmをmmになおす



日にち： 月 日

名まえ \_\_\_\_\_

・  にあてはまる数を書きましょう。

① 4 mm =  cm

② 7.3 cm =  cm  mm

③ 6.4 cm =  cm  mm

④ 8 mm =  cm

⑤ 9.5 cm =  cm  mm

⑥ 9 cm 2 mm =  cm

⑦ 56.9 cm =  cm  mm

⑧ 0.7 cm =  mm

⑨ 9 cm 3 mm =  cm

⑩ 6 cm 7 mm =  cm

⑪ 5 mm =  cm

⑫ 2.4 cm =  cm  mm

⑬ 27.7 cm =  cm  mm

⑭ 34 cm 9 mm =  cm

⑮ 9.1 cm =  cm  mm

⑯ 1 cm 5 mm =  cm

⑰ 0.1 cm =  mm

⑱ 6 cm 4 mm =  cm



# 小数の意味と表し方9

● 小数のcmをmmになおす



日にち： 月 日

名まえ \_\_\_\_\_

・  にあてはまる数を書きましょう。

①  $5.8 \text{ cm} = \text{ cm  mm}$

②  $3.7 \text{ cm} = \text{ cm  mm}$

③  $8.7 \text{ cm} = \text{ cm  mm}$

④  $7 \text{ mm} = \text{ cm}$

⑤  $8 \text{ cm } 1 \text{ mm} = \text{ cm}$

⑥  $9 \text{ mm} = \text{ cm}$

⑦  $59.7 \text{ cm} = \text{ cm  mm}$

⑧  $0.2 \text{ cm} = \text{ mm}$

⑨  $1 \text{ cm } 6 \text{ mm} = \text{ cm}$

⑩  $3 \text{ cm } 9 \text{ mm} = \text{ cm}$

⑪  $3 \text{ mm} = \text{ cm}$

⑫  $29 \text{ cm } 7 \text{ mm} = \text{ cm}$

⑬  $74.7 \text{ cm} = \text{ cm  mm}$

⑭  $7.7 \text{ cm} = \text{ cm  mm}$

⑮  $2.5 \text{ cm} = \text{ cm  mm}$

⑯  $1 \text{ cm } 3 \text{ mm} = \text{ cm}$

⑰  $0.5 \text{ cm} = \text{ mm}$

⑱  $4 \text{ cm } 9 \text{ mm} = \text{ cm}$



# 小数の意味と表し方9

● 小数のcmをmmになおす

12

日にち： 月 日

名まえ \_\_\_\_\_

・  にあてはまる数を書きましょう。

①  $6 \text{ mm} = \text{ cm}$

②  $1.1 \text{ cm} = \text{ cm  mm}$

③  $6.1 \text{ cm} = \text{ cm  mm}$

④  $5 \text{ mm} = \text{ cm}$

⑤  $6.2 \text{ cm} = \text{ cm  mm}$

⑥  $4 \text{ cm } 6 \text{ mm} = \text{ cm}$

⑦  $77.9 \text{ cm} = \text{ cm  mm}$

⑧  $0.3 \text{ cm} = \text{ mm}$

⑨  $8 \text{ cm } 4 \text{ mm} = \text{ cm}$

⑩  $5 \text{ cm } 9 \text{ mm} = \text{ cm}$

⑪  $3 \text{ mm} = \text{ cm}$

⑫  $9.2 \text{ cm} = \text{ cm  mm}$

⑬  $38.5 \text{ cm} = \text{ cm  mm}$

⑭  $58 \text{ cm } 2 \text{ mm} = \text{ cm}$

⑮  $6.5 \text{ cm} = \text{ cm  mm}$

⑯  $9 \text{ cm } 1 \text{ mm} = \text{ cm}$

⑰  $0.7 \text{ cm} = \text{ mm}$

⑱  $5 \text{ cm } 3 \text{ mm} = \text{ cm}$



# 小数の意味と表し方9

● 小数のcmをmmになおす

13

日にち：            月            日

名まえ \_\_\_\_\_

・  にあてはまる数を書きましょう。

①  $3.3 \text{ cm} = \text{ cm  mm}$

②  $4.4 \text{ cm} = \text{ cm  mm}$

③  $1.4 \text{ cm} = \text{ cm  mm}$

④  $9 \text{ mm} = \text{ cm}$

⑤  $4 \text{ cm } 8 \text{ mm} = \text{ cm}$

⑥  $8 \text{ mm} = \text{ cm}$

⑦  $47.7 \text{ cm} = \text{ cm  mm}$

⑧  $0.1 \text{ cm} = \text{ mm}$

⑨  $6 \text{ cm } 4 \text{ mm} = \text{ cm}$

⑩  $6 \text{ cm } 1 \text{ mm} = \text{ cm}$

⑪  $2 \text{ mm} = \text{ cm}$

⑫  $67 \text{ cm } 2 \text{ mm} = \text{ cm}$

⑬  $18.3 \text{ cm} = \text{ cm  mm}$

⑭  $5.6 \text{ cm} = \text{ cm  mm}$

⑮  $2.7 \text{ cm} = \text{ cm  mm}$

⑯  $8 \text{ cm } 6 \text{ mm} = \text{ cm}$

⑰  $0.7 \text{ cm} = \text{ mm}$

⑱  $8 \text{ cm } 9 \text{ mm} = \text{ cm}$



# 小数の意味と表し方9

● 小数のcmをmmになおす

14

日にち： 月 日

名まえ \_\_\_\_\_

・  にあてはまる数を書きましょう。

① 3 mm =  cm

② 3.8 cm =  cm  mm

③ 7.2 cm =  cm  mm

④ 4 mm =  cm

⑤ 2.2 cm =  cm  mm

⑥ 6 cm 8 mm =  cm

⑦ 31.6 cm =  cm  mm

⑧ 0.7 cm =  mm

⑨ 2 cm 2 mm =  cm

⑩ 5 cm 4 mm =  cm

⑪ 7 mm =  cm

⑫ 5.1 cm =  cm  mm

⑬ 43.2 cm =  cm  mm

⑭ 49 cm 8 mm =  cm

⑮ 8.9 cm =  cm  mm

⑯ 2 cm 6 mm =  cm

⑰ 0.9 cm =  mm

⑱ 5 cm 9 mm =  cm



# 小数の意味と表し方9

● 小数のcmをmmになおす

# 15

目指せ80点!



名まえ \_\_\_\_\_

□ にあてはまる数を書きましょう。(各5点)

① 7 cm 3 mm = □ cm

② 89.8 cm = □ cm □ mm

③ 53 cm 5 mm = □ cm

④ 7 mm = □ cm

⑤ 41.4 cm = □ cm □ mm

⑥ 4.4 cm = □ cm □ mm

⑦ 3 cm 2 mm = □ cm

⑧ 33 cm 4 mm = □ cm

⑨ 96 cm 5 mm = □ cm

⑩ 6 cm 1 mm = □ cm

⑪ 8 mm = □ cm

⑫ 0.7 cm = □ mm

⑬ 2 cm 7 mm = □ cm

⑭ 1 mm = □ cm

⑮ 7 cm 5 mm = □ cm



⑯ 2.2 cm = □ cm □ mm

⑰ 0.5 cm = □ mm

⑱ 14.2 cm = □ cm □ mm

⑲ 91 cm 3 mm = □ cm

⑳ 33.7 cm = □ cm □ mm





# 小数の意味と表し方9

● 小数のcmをmmになおす

16

目指せ80点!



名まえ \_\_\_\_\_

□ にあてはまる数を書きましょう。(各5点)

① 3 cm 2 mm = □ cm

② 4.1 cm = □ cm □ mm

③ 4 mm = □ cm

④ 2 mm = □ cm

⑤ 60.9 cm = □ cm □ mm

⑥ 9.1 cm = □ cm □ mm

⑦ 83 cm 6 mm = □ cm

⑧ 52 cm 3 mm = □ cm

⑨ 12 cm 1 mm = □ cm

⑩ 6 cm 1 mm = □ cm

⑪ 17.5 cm = □ cm □ mm

⑫ 0.5 cm = □ mm

⑬ 3 cm 5 mm = □ cm

⑭ 9 mm = □ cm

⑮ 4 cm 2 mm = □ cm


⑯ 8 cm 8 mm = □ cm

⑰ 0.4 cm = □ mm

⑱ 19.5 cm = □ cm □ mm

⑲ 11 cm 1 mm = □ cm

⑳ 81.1 cm = □ cm □ mm







# 小数の意味と表し方9

● 小数のcmをmmになおす



日にち： 月 日

名まえ \_\_\_\_\_

・  にあてはまる数を書きましょう。(うすい字はなぞりましょう。)

① 3.7 cm =  cm  mm

② 0.7 cm =  mm

③ 7.9 cm =  cm  mm

④ 0.9 cm =  mm

⑤ 0.6 cm =  mm

⑥ 2.5 cm =  cm  mm

⑦ 5.7 cm =  cm  mm

⑧ 23.6 cm =  cm  mm

⑨ 0.1 cm =  mm

⑩ 72.3 cm =  cm  mm

⑪ 8.3 cm =  cm  mm

⑫ 26.1 cm =  cm  mm

⑬ 0.8 cm =  mm

⑭ 3.4 cm =  cm  mm

⑮ 9.9 cm =  cm  mm

⑯ 0.2 cm =  mm

⑰ 53.8 cm =  cm  mm

⑱ 1.1 cm =  cm  mm



# 小数の意味と表し方9

● 小数のcmをmmになおす



日にち： 月 日

名まえ \_\_\_\_\_

・  にあてはまる数を書きましょう。(うすい字はなぞりましょう。)

① 4.2 cm = 4 cm 2 mm

② 0.6 cm = 6 mm

③ 5.2 cm = 5 cm 2 mm

④ 0.1 cm = 1 mm

⑤ 0.9 cm = 9 mm

⑥ 7.1 cm = 7 cm 1 mm

⑦ 9.2 cm = 9 cm 2 mm

⑧ 81.7 cm = 81 cm 7 mm

⑨ 0.2 cm = 2 mm

⑩ 17.8 cm = 17 cm 8 mm

⑪ 9.1 cm = 9 cm 1 mm

⑫ 62.7 cm = 62 cm 7 mm

⑬ 0.4 cm = 4 mm

⑭ 9.5 cm = 9 cm 5 mm

⑮ 7.8 cm = 7 cm 8 mm

⑯ 0.7 cm = 7 mm

⑰ 45.4 cm = 45 cm 4 mm

⑱ 3.4 cm = 3 cm 4 mm



# 小数の意味と表し方9

● 小数のcmをmmになおす

3

日にち：            月            日

名まえ \_\_\_\_\_

・  にあてはまる数を書きましょう。(うすい字はなぞりましょう。)

①  $2.3 \text{ cm} = \boxed{2} \text{ cm } \boxed{3} \text{ mm}$

②  $0.1 \text{ cm} = \boxed{1} \text{ mm}$

③  $1.7 \text{ cm} = \boxed{1} \text{ cm } \boxed{7} \text{ mm}$

④  $0.3 \text{ cm} = \boxed{3} \text{ mm}$

⑤  $0.6 \text{ cm} = \boxed{6} \text{ mm}$

⑥  $8.6 \text{ cm} = \boxed{8} \text{ cm } \boxed{6} \text{ mm}$

⑦  $6.5 \text{ cm} = \boxed{6} \text{ cm } \boxed{5} \text{ mm}$

⑧  $31.8 \text{ cm} = \boxed{31} \text{ cm } \boxed{8} \text{ mm}$

⑨  $0.8 \text{ cm} = \boxed{8} \text{ mm}$

⑩  $25.7 \text{ cm} = \boxed{25} \text{ cm } \boxed{7} \text{ mm}$

⑪  $3.5 \text{ cm} = \boxed{3} \text{ cm } \boxed{5} \text{ mm}$

⑫  $59.3 \text{ cm} = \boxed{59} \text{ cm } \boxed{3} \text{ mm}$

⑬  $0.2 \text{ cm} = \boxed{2} \text{ mm}$

⑭  $3.2 \text{ cm} = \boxed{3} \text{ cm } \boxed{2} \text{ mm}$

⑮  $7.3 \text{ cm} = \boxed{7} \text{ cm } \boxed{3} \text{ mm}$

⑯  $0.4 \text{ cm} = \boxed{4} \text{ mm}$

⑰  $26.6 \text{ cm} = \boxed{26} \text{ cm } \boxed{6} \text{ mm}$

⑱  $1.9 \text{ cm} = \boxed{1} \text{ cm } \boxed{9} \text{ mm}$



# 小数の意味と表し方9

● 小数のcmをmmになおす



日にち： 月 日

名まえ \_\_\_\_\_

・  にあてはまる数を書きましょう。(うすい字はなぞりましょう。)

① 7.1 cm = 7 cm 1 mm

② 0.6 cm = 6 mm

③ 2.2 cm = 2 cm 2 mm

④ 0.7 cm = 7 mm

⑤ 0.1 cm = 1 mm

⑥ 7.2 cm = 7 cm 2 mm

⑦ 8.5 cm = 8 cm 5 mm

⑧ 63.2 cm = 63 cm 2 mm

⑨ 0.8 cm = 8 mm

⑩ 78.7 cm = 78 cm 7 mm

⑪ 5.8 cm = 5 cm 8 mm

⑫ 92.9 cm = 92 cm 9 mm

⑬ 0.4 cm = 4 mm

⑭ 2.8 cm = 2 cm 8 mm

⑮ 4.8 cm = 4 cm 8 mm

⑯ 0.2 cm = 2 mm

⑰ 25.7 cm = 25 cm 7 mm

⑱ 4.7 cm = 4 cm 7 mm



# 小数の意味と表し方9

● 小数のcmをmmになおす

5

日にち： 月 日

名まえ \_\_\_\_\_

・ □ にあてはまる数を書きましょう。(うすい字はなぞりましょう。)

①  $8.3 \text{ cm} = \boxed{8} \text{ cm } \boxed{3} \text{ mm}$

②  $0.3 \text{ cm} = \boxed{3} \text{ mm}$

③  $7.4 \text{ cm} = \boxed{7} \text{ cm } \boxed{4} \text{ mm}$

④  $0.2 \text{ cm} = \boxed{2} \text{ mm}$

⑤  $0.5 \text{ cm} = \boxed{5} \text{ mm}$

⑥  $8.7 \text{ cm} = \boxed{8} \text{ cm } \boxed{7} \text{ mm}$

⑦  $2.9 \text{ cm} = \boxed{2} \text{ cm } \boxed{9} \text{ mm}$

⑧  $67.2 \text{ cm} = \boxed{67} \text{ cm } \boxed{2} \text{ mm}$

⑨  $0.1 \text{ cm} = \boxed{1} \text{ mm}$

⑩  $56.4 \text{ cm} = \boxed{56} \text{ cm } \boxed{4} \text{ mm}$

⑪  $4.7 \text{ cm} = \boxed{4} \text{ cm } \boxed{7} \text{ mm}$

⑫  $92.4 \text{ cm} = \boxed{92} \text{ cm } \boxed{4} \text{ mm}$

⑬  $0.4 \text{ cm} = \boxed{4} \text{ mm}$

⑭  $1.2 \text{ cm} = \boxed{1} \text{ cm } \boxed{2} \text{ mm}$

⑮  $6.4 \text{ cm} = \boxed{6} \text{ cm } \boxed{4} \text{ mm}$

⑯  $0.8 \text{ cm} = \boxed{8} \text{ mm}$

⑰  $63.3 \text{ cm} = \boxed{63} \text{ cm } \boxed{3} \text{ mm}$

⑱  $3.9 \text{ cm} = \boxed{3} \text{ cm } \boxed{9} \text{ mm}$



# 小数の意味と表し方9

● 小数のcmをmmになおす



日にち： 月 日

名まえ \_\_\_\_\_

・  にあてはまる数を書きましょう。(うすい字はなぞりましょう。)

①  $4.4 \text{ cm} = \boxed{4} \text{ cm } \boxed{4} \text{ mm}$

②  $0.8 \text{ cm} = \boxed{8} \text{ mm}$

③  $7.6 \text{ cm} = \boxed{7} \text{ cm } \boxed{6} \text{ mm}$

④  $0.4 \text{ cm} = \boxed{4} \text{ mm}$

⑤  $0.2 \text{ cm} = \boxed{2} \text{ mm}$

⑥  $6.1 \text{ cm} = \boxed{6} \text{ cm } \boxed{1} \text{ mm}$

⑦  $1.5 \text{ cm} = \boxed{1} \text{ cm } \boxed{5} \text{ mm}$

⑧  $3.2 \text{ cm} = \boxed{3} \text{ cm } \boxed{2} \text{ mm}$

⑨  $52.6 \text{ cm} = \boxed{52} \text{ cm } \boxed{6} \text{ mm}$

⑩  $21.2 \text{ cm} = \boxed{21} \text{ cm } \boxed{2} \text{ mm}$

⑪  $6.9 \text{ cm} = \boxed{6} \text{ cm } \boxed{9} \text{ mm}$

⑫  $81.4 \text{ cm} = \boxed{81} \text{ cm } \boxed{4} \text{ mm}$

⑬  $0.5 \text{ cm} = \boxed{5} \text{ mm}$

⑭  $2.9 \text{ cm} = \boxed{2} \text{ cm } \boxed{9} \text{ mm}$

⑮  $87.9 \text{ cm} = \boxed{87} \text{ cm } \boxed{9} \text{ mm}$

⑯  $0.3 \text{ cm} = \boxed{3} \text{ mm}$

⑰  $0.9 \text{ cm} = \boxed{9} \text{ mm}$

⑱  $8.4 \text{ cm} = \boxed{8} \text{ cm } \boxed{4} \text{ mm}$



# 小数の意味と表し方⑨

● 小数のcmをmmになおす



日にち： 月 日

名まえ \_\_\_\_\_

・  にあてはまる数を書きましょう。(うすい字はなぞりましょう。)

① 9.8 cm =  cm  mm

② 0.5 cm =  mm

③ 5.5 cm =  cm  mm

④ 0.9 cm =  mm

⑤ 0.7 cm =  mm

⑥ 8.8 cm =  cm  mm

⑦ 2.9 cm =  cm  mm

⑧ 16.5 cm =  cm  mm

⑨ 0.4 cm =  mm

⑩ 28.4 cm =  cm  mm

⑪ 6.4 cm =  cm  mm

⑫ 91.8 cm =  cm  mm

⑬ 0.6 cm =  mm

⑭ 2.2 cm =  cm  mm

⑮ 4.4 cm =  cm  mm

⑯ 0.3 cm =  mm

⑰ 23.9 cm =  cm  mm

⑱ 8.1 cm =  cm  mm



# 小数の意味と表し方9

● 小数のcmをmmになおす



日にち： 月 日

名まえ \_\_\_\_\_

・  にあてはまる数を書きましょう。

①  $1.3 \text{ cm} = \boxed{1} \text{ cm } \boxed{3} \text{ mm}$

②  $0.9 \text{ cm} = \boxed{9} \text{ mm}$

③  $7.2 \text{ cm} = \boxed{7} \text{ cm } \boxed{2} \text{ mm}$

④  $0.3 \text{ cm} = \boxed{3} \text{ mm}$

⑤  $0.6 \text{ cm} = \boxed{6} \text{ mm}$

⑥  $2.5 \text{ cm} = \boxed{2} \text{ cm } \boxed{5} \text{ mm}$

⑦  $6.2 \text{ cm} = \boxed{6} \text{ cm } \boxed{2} \text{ mm}$

⑧  $2.2 \text{ cm} = \boxed{2} \text{ cm } \boxed{2} \text{ mm}$

⑨  $98.1 \text{ cm} = \boxed{98} \text{ cm } \boxed{1} \text{ mm}$

⑩  $45.1 \text{ cm} = \boxed{45} \text{ cm } \boxed{1} \text{ mm}$

⑪  $2.3 \text{ cm} = \boxed{2} \text{ cm } \boxed{3} \text{ mm}$

⑫  $88.4 \text{ cm} = \boxed{88} \text{ cm } \boxed{4} \text{ mm}$

⑬  $0.4 \text{ cm} = \boxed{4} \text{ mm}$

⑭  $7.6 \text{ cm} = \boxed{7} \text{ cm } \boxed{6} \text{ mm}$

⑮  $55.2 \text{ cm} = \boxed{55} \text{ cm } \boxed{2} \text{ mm}$

⑯  $0.5 \text{ cm} = \boxed{5} \text{ mm}$

⑰  $0.1 \text{ cm} = \boxed{1} \text{ mm}$

⑱  $7.3 \text{ cm} = \boxed{7} \text{ cm } \boxed{3} \text{ mm}$





# 小数の意味と表し方9

● 小数のcmをmmになおす



日にち： 月 日

名まえ \_\_\_\_\_

・  にあてはまる数を書きましょう。

① 8.7 cm =  cm  mm

② 0.9 cm =  mm

③ 5.3 cm =  cm  mm

④ 0.3 cm =  mm

⑤ 0.5 cm =  mm

⑥ 1.9 cm =  cm  mm

⑦ 5.2 cm =  cm  mm

⑧ 41.5 cm =  cm  mm

⑨ 0.6 cm =  mm

⑩ 2.2 cm =  cm  mm

⑪ 4.2 cm =  cm  mm

⑫ 79.2 cm =  cm  mm

⑬ 0.7 cm =  mm

⑭ 9.1 cm =  cm  mm

⑮ 5.1 cm =  cm  mm

⑯ 0.4 cm =  mm

⑰ 64.4 cm =  cm  mm

⑱ 4.8 cm =  cm  mm



# 小数の意味と表し方9

● 小数のcmをmmになおす



日にち： 月 日

名まえ \_\_\_\_\_

・  にあてはまる数を書きましょう。

① 4 mm = 0.4 cm

② 7.3 cm = 7 cm 3 mm

③ 6.4 cm = 6 cm 4 mm

④ 8 mm = 0.8 cm

⑤ 9.5 cm = 9 cm 5 mm

⑥ 9 cm 2 mm = 9.2 cm

⑦ 56.9 cm = 56 cm 9 mm

⑧ 0.7 cm = 7 mm

⑨ 9 cm 3 mm = 9.3 cm

⑩ 6 cm 7 mm = 6.7 cm

⑪ 5 mm = 0.5 cm

⑫ 2.4 cm = 2 cm 4 mm

⑬ 27.7 cm = 27 cm 7 mm

⑭ 34 cm 9 mm = 34.9 cm

⑮ 9.1 cm = 9 cm 1 mm

⑯ 1 cm 5 mm = 1.5 cm

⑰ 0.1 cm = 1 mm

⑱ 6 cm 4 mm = 6.4 cm



# 小数の意味と表し方9

● 小数のcmをmmになおす



日にち： 月 日

名まえ \_\_\_\_\_

・  にあてはまる数を書きましょう。

①  $5.8 \text{ cm} = \boxed{5} \text{ cm } \boxed{8} \text{ mm}$

②  $3.7 \text{ cm} = \boxed{3} \text{ cm } \boxed{7} \text{ mm}$

③  $8.7 \text{ cm} = \boxed{8} \text{ cm } \boxed{7} \text{ mm}$

④  $7 \text{ mm} = \boxed{0.7} \text{ cm}$

⑤  $8 \text{ cm } 1 \text{ mm} = \boxed{8.1} \text{ cm}$

⑥  $9 \text{ mm} = \boxed{0.9} \text{ cm}$

⑦  $59.7 \text{ cm} = \boxed{59} \text{ cm } \boxed{7} \text{ mm}$

⑧  $0.2 \text{ cm} = \boxed{2} \text{ mm}$

⑨  $1 \text{ cm } 6 \text{ mm} = \boxed{1.6} \text{ cm}$

⑩  $3 \text{ cm } 9 \text{ mm} = \boxed{3.9} \text{ cm}$

⑪  $3 \text{ mm} = \boxed{0.3} \text{ cm}$

⑫  $29 \text{ cm } 7 \text{ mm} = \boxed{29.7} \text{ cm}$

⑬  $74.7 \text{ cm} = \boxed{74} \text{ cm } \boxed{7} \text{ mm}$

⑭  $7.7 \text{ cm} = \boxed{7} \text{ cm } \boxed{7} \text{ mm}$

⑮  $2.5 \text{ cm} = \boxed{2} \text{ cm } \boxed{5} \text{ mm}$

⑯  $1 \text{ cm } 3 \text{ mm} = \boxed{1.3} \text{ cm}$

⑰  $0.5 \text{ cm} = \boxed{5} \text{ mm}$

⑱  $4 \text{ cm } 9 \text{ mm} = \boxed{4.9} \text{ cm}$



# 小数の意味と表し方9

● 小数のcmをmmになおす

12

日にち： 月 日

名まえ \_\_\_\_\_

・  にあてはまる数を書きましょう。

① 6 mm =  cm

② 1.1 cm =  cm  mm

③ 6.1 cm =  cm  mm

④ 5 mm =  cm

⑤ 6.2 cm =  cm  mm

⑥ 4 cm 6 mm =  cm

⑦ 77.9 cm =  cm  mm

⑧ 0.3 cm =  mm

⑨ 8 cm 4 mm =  cm

⑩ 5 cm 9 mm =  cm

⑪ 3 mm =  cm

⑫ 9.2 cm =  cm  mm

⑬ 38.5 cm =  cm  mm

⑭ 58 cm 2 mm =  cm

⑮ 6.5 cm =  cm  mm

⑯ 9 cm 1 mm =  cm

⑰ 0.7 cm =  mm

⑱ 5 cm 3 mm =  cm



# 小数の意味と表し方9

● 小数のcmをmmになおす

13

日にち： 月 日

名まえ \_\_\_\_\_

・  にあてはまる数を書きましょう。

①  $3.3 \text{ cm} = \boxed{3} \text{ cm } \boxed{3} \text{ mm}$

②  $4.4 \text{ cm} = \boxed{4} \text{ cm } \boxed{4} \text{ mm}$

③  $1.4 \text{ cm} = \boxed{1} \text{ cm } \boxed{4} \text{ mm}$

④  $9 \text{ mm} = \boxed{0.9} \text{ cm}$

⑤  $4 \text{ cm } 8 \text{ mm} = \boxed{4.8} \text{ cm}$

⑥  $8 \text{ mm} = \boxed{0.8} \text{ cm}$

⑦  $47.7 \text{ cm} = \boxed{47} \text{ cm } \boxed{7} \text{ mm}$

⑧  $0.1 \text{ cm} = \boxed{1} \text{ mm}$

⑨  $6 \text{ cm } 4 \text{ mm} = \boxed{6.4} \text{ cm}$

⑩  $6 \text{ cm } 1 \text{ mm} = \boxed{6.1} \text{ cm}$

⑪  $2 \text{ mm} = \boxed{0.2} \text{ cm}$

⑫  $67 \text{ cm } 2 \text{ mm} = \boxed{67.2} \text{ cm}$

⑬  $18.3 \text{ cm} = \boxed{18} \text{ cm } \boxed{3} \text{ mm}$

⑭  $5.6 \text{ cm} = \boxed{5} \text{ cm } \boxed{6} \text{ mm}$

⑮  $2.7 \text{ cm} = \boxed{2} \text{ cm } \boxed{7} \text{ mm}$

⑯  $8 \text{ cm } 6 \text{ mm} = \boxed{8.6} \text{ cm}$

⑰  $0.7 \text{ cm} = \boxed{7} \text{ mm}$

⑱  $8 \text{ cm } 9 \text{ mm} = \boxed{8.9} \text{ cm}$



# 小数の意味と表し方9

● 小数のcmをmmになおす

14

日にち： 月 日

名まえ \_\_\_\_\_

・  にあてはまる数を書きましょう。

① 3 mm = 0.3 cm

② 3.8 cm = 3 cm 8 mm

③ 7.2 cm = 7 cm 2 mm

④ 4 mm = 0.4 cm

⑤ 2.2 cm = 2 cm 2 mm

⑥ 6 cm 8 mm = 6.8 cm

⑦ 31.6 cm = 31 cm 6 mm

⑧ 0.7 cm = 7 mm

⑨ 2 cm 2 mm = 2.2 cm

⑩ 5 cm 4 mm = 5.4 cm

⑪ 7 mm = 0.7 cm

⑫ 5.1 cm = 5 cm 1 mm

⑬ 43.2 cm = 43 cm 2 mm

⑭ 49 cm 8 mm = 49.8 cm

⑮ 8.9 cm = 8 cm 9 mm

⑯ 2 cm 6 mm = 2.6 cm

⑰ 0.9 cm = 9 mm

⑱ 5 cm 9 mm = 5.9 cm



# 小数の意味と表し方9

● 小数のcmをmmになおす

15

目指せ80点!



名まえ \_\_\_\_\_

□ にあてはまる数を書きましょう。(各5点)

① 7 cm 3 mm = 7.3 cm

② 89.8 cm = 89 cm 8 mm

③ 53 cm 5 mm = 53.5 cm

④ 7 mm = 0.7 cm

⑤ 41.4 cm = 41 cm 4 mm

⑥ 4.4 cm = 4 cm 4 mm

⑦ 3 cm 2 mm = 3.2 cm

⑧ 33 cm 4 mm = 33.4 cm

⑨ 96 cm 5 mm = 96.5 cm

⑩ 6 cm 1 mm = 6.1 cm

⑪ 8 mm = 0.8 cm

⑫ 0.7 cm = 7 mm

⑬ 2 cm 7 mm = 2.7 cm

⑭ 1 mm = 0.1 cm

⑮ 7 cm 5 mm = 7.5 cm



⑯ 2.2 cm = 2 cm 2 mm

⑰ 0.5 cm = 5 mm

⑱ 14.2 cm = 14 cm 2 mm

⑲ 91 cm 3 mm = 91.3 cm

⑳ 33.7 cm = 33 cm 7 mm





# 小数の意味と表し方9

● 小数のcmをmmになおす

16

目指せ80点!



名まえ \_\_\_\_\_

□ にあてはまる数を書きましょう。(各5点)

① 3 cm 2 mm = 3.2 cm

② 4.1 cm = 4 cm 1 mm

③ 4 mm = 0.4 cm

④ 2 mm = 0.2 cm

⑤ 60.9 cm = 60 cm 9 mm

⑥ 9.1 cm = 9 cm 1 mm

⑦ 83 cm 6 mm = 83.6 cm

⑧ 52 cm 3 mm = 52.3 cm

⑨ 12 cm 1 mm = 12.1 cm

⑩ 6 cm 1 mm = 6.1 cm

⑪ 17.5 cm = 17 cm 5 mm

⑫ 0.5 cm = 5 mm

⑬ 3 cm 5 mm = 3.5 cm

⑭ 9 mm = 0.9 cm

⑮ 4 cm 2 mm = 4.2 cm

⑯ 8 cm 8 mm = 8.8 cm

⑰ 0.4 cm = 4 mm

⑱ 19.5 cm = 19 cm 5 mm

⑲ 11 cm 1 mm = 11.1 cm

⑳ 81.1 cm = 81 cm 1 mm

