



# 小数の意味と表し方 3

◎ 水のかさ (帯小数)

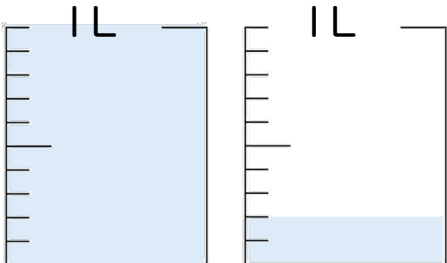


日にち：            月            日

名まえ \_\_\_\_\_

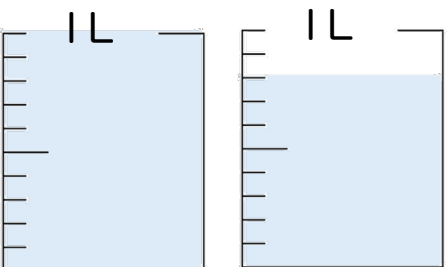
・ 水のかさは、何Lでしょう。(うすい字はなぞりましょう。)

①



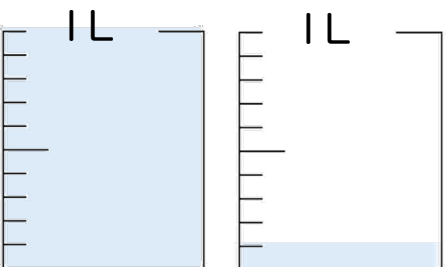
答え 1.2 L

②



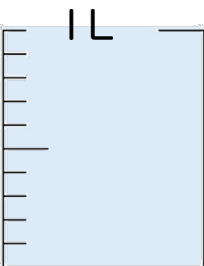
答え \_\_\_\_\_ L

③



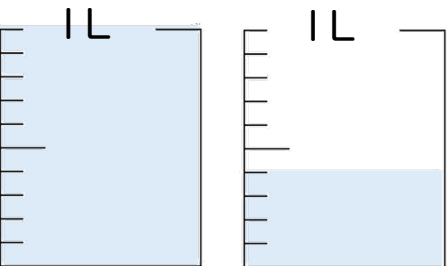
答え \_\_\_\_\_ L

④




答え \_\_\_\_\_ L

⑤



答え \_\_\_\_\_ L





# 小数の意味と表し方 3

◎ 水のかさ (帯小数)

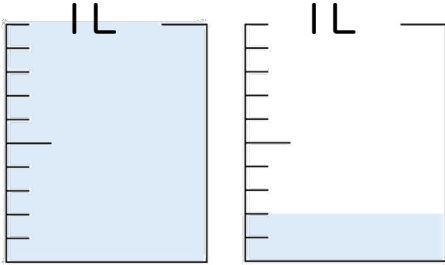


日にち：            月            日

名まえ \_\_\_\_\_

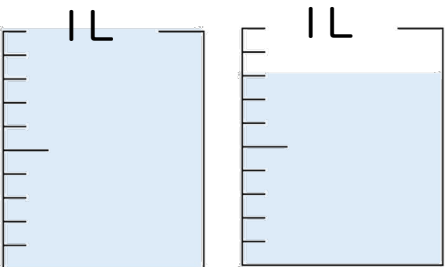
・ 水のかさは、何Lでしょう。(うすい字はなぞりましょう。)

①



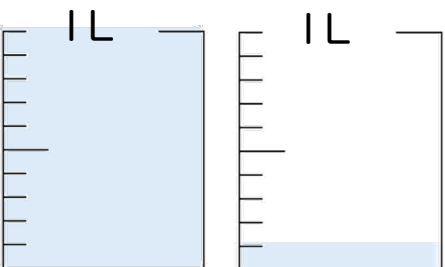
答え 1.2 L

②



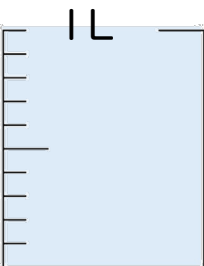
答え 1.8 L

③



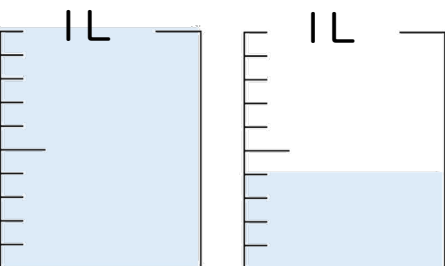
答え 1.1 L

④



答え 1 L

⑤



答え 1.4 L

