



小数の意味と表し方 4

◎ 水のかさをぬる

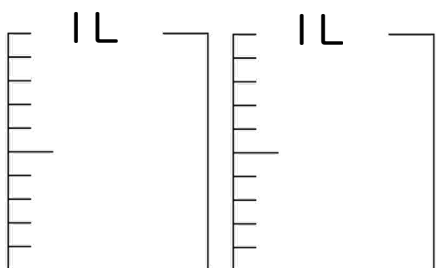


日にち： 月 日

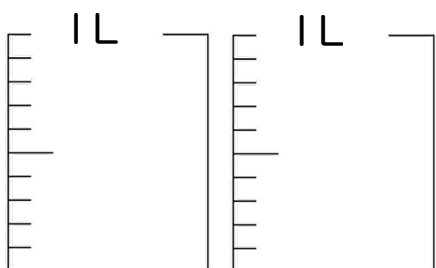
名まえ _____

・ 水のかさだけ色を塗りましょう

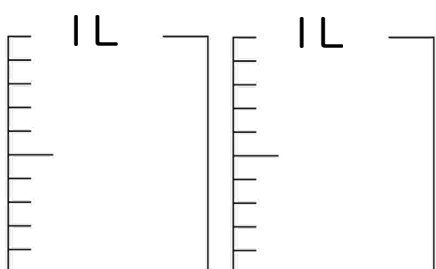
① 1.4 L



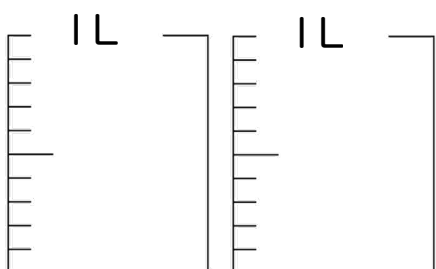
② 1.9 L



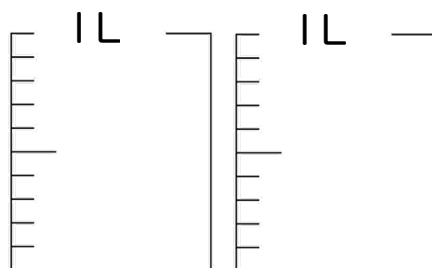
③ 1.1 L



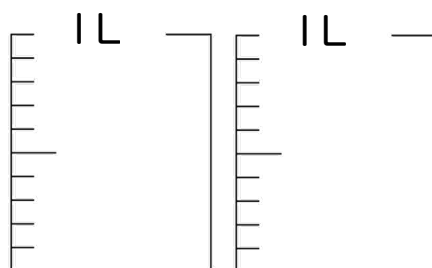
④ 1.6 L



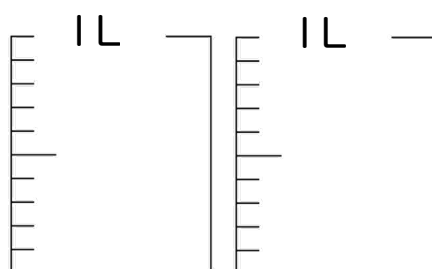
⑤ 0.2 L



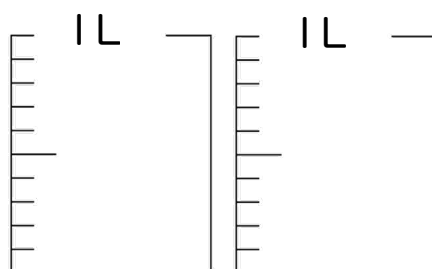
⑥ 1.8 L



⑦ 0.7 L



⑧ 0.3 L





小数の意味と表し方 4

◎ 水のかさをぬる

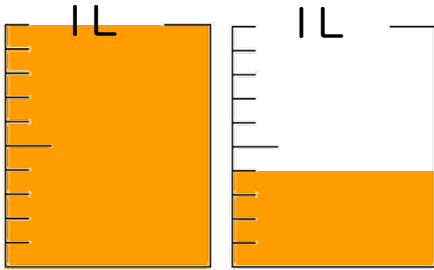


日にち： 月 日

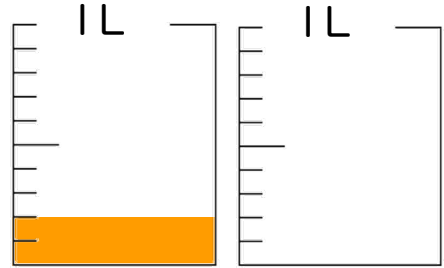
名まえ _____

・ 水のかさだけ色を塗りましょう

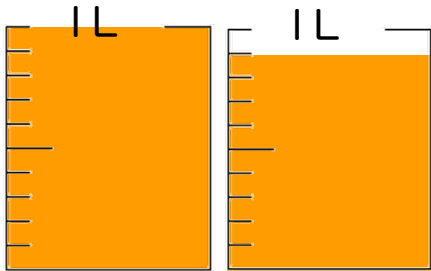
① 1.4 L



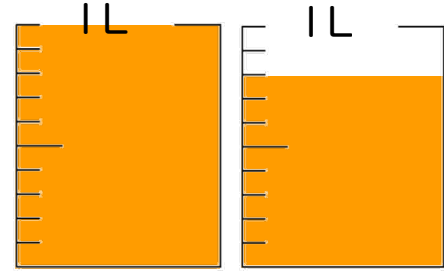
⑤ 0.2 L



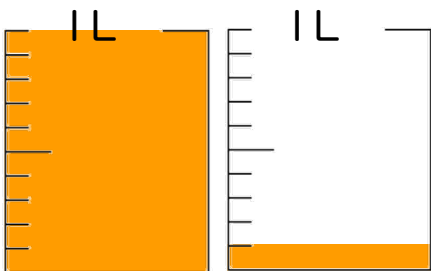
② 1.9 L



⑥ 1.8 L



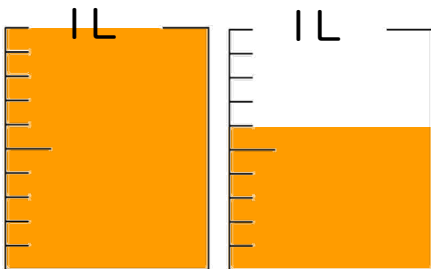
③ 1.1 L



⑦ 0.7 L



④ 1.6 L



⑧ 0.3 L

