

小数の意味と表し方 4

◎ 水のかさをぬる

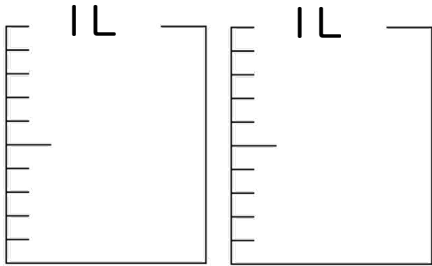


日にち： 月 日

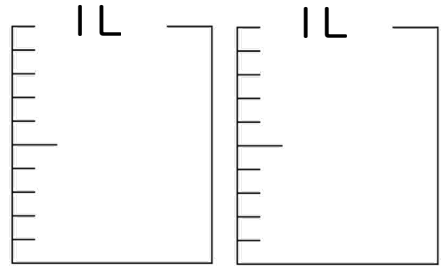
名まえ _____

・ 水のかさだけ色を塗りましょう

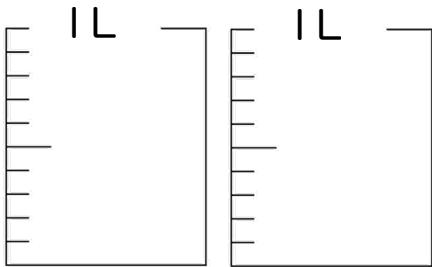
① 0.3 L



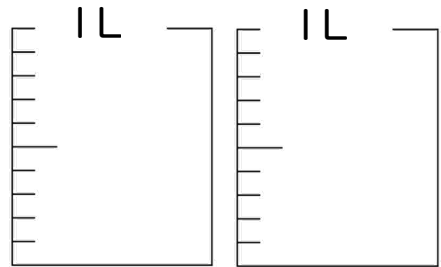
⑤ 1.4 L



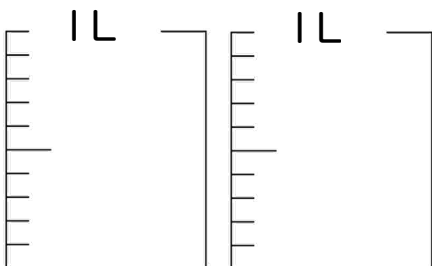
② 1.5 L



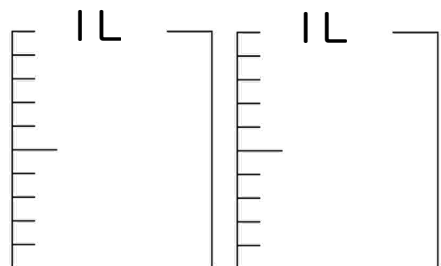
⑥ 1 L



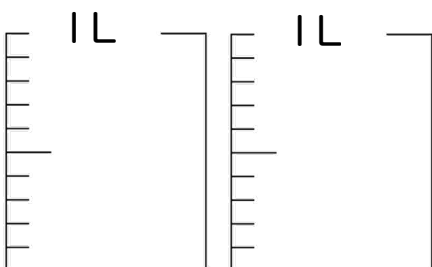
③ 0.4 L



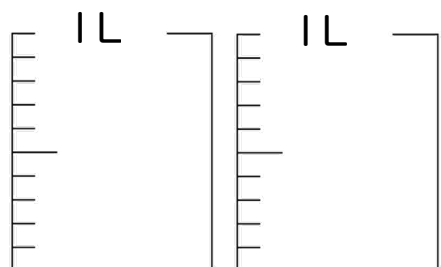
⑦ 1.2 L




④ 0.1 L



⑧ 0.6 L





小数の意味と表し方 4

◎ 水のかさをぬる

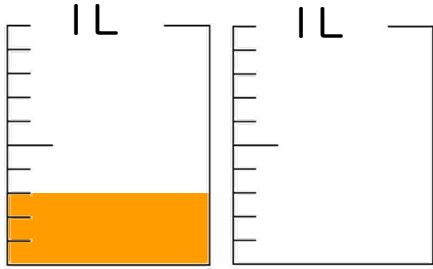


日にち： 月 日

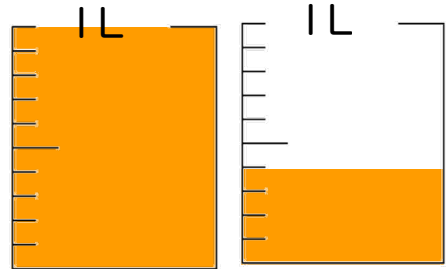
名まえ _____

・ 水のかさだけ色を塗りましょう

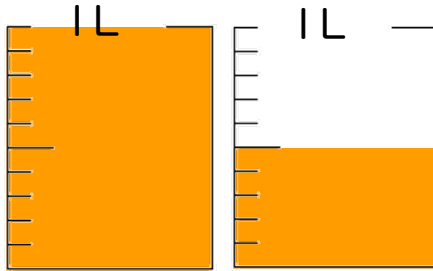
① 0.3 L



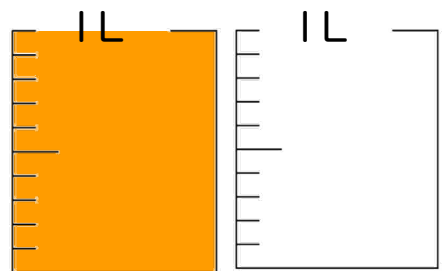
⑤ 1.4 L



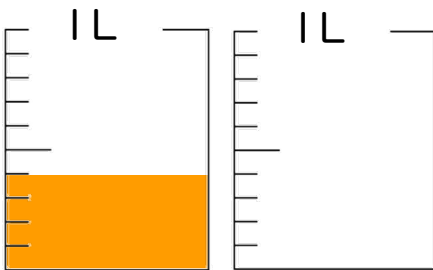
② 1.5 L



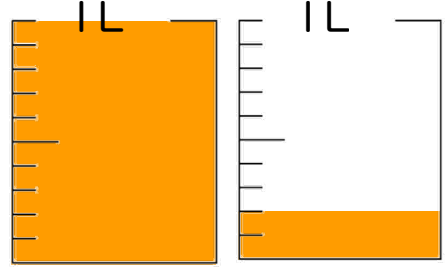
⑥ 1 L



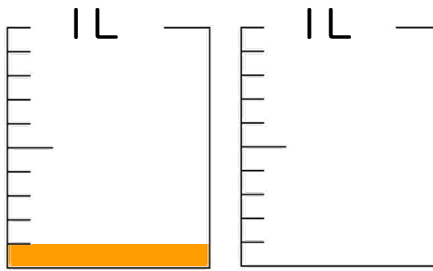
③ 0.4 L



⑦ 1.2 L



④ 0.1 L



⑧ 0.6 L

