



たし算と
ひき算の筆算 23

● 3けたのひき算
(2回くり下がり)

12

日にち： 月 日


名まえ _____

・ 次の計算を筆算でしましょう。


$$\begin{array}{r} \textcircled{1} \quad 1000 \\ - \quad 842 \\ \hline \end{array}$$

$$\begin{array}{r} \textcircled{2} \quad 336 \\ - \quad 79 \\ \hline \end{array}$$


③ $327 - 269$




④ $204 - 7$



⑤ $841 - 82$



⑥ $925 - 349$





たし算と
ひき算の筆算 23

● 3けたのひき算
(2回くり下がり)

12

日にち： 月 日

名まえ _____

・ 次の計算を筆算でしましょう。

①

| | | | | |
|---|--------------|--------------------|--------------------|----|
| | 0 | 9 10 | 9 10 | 10 |
| | 1 | 0 | 0 | 0 |
| - | | 8 | 4 | 2 |
| | | | | |
| | | 1 | 5 | 8 |

②

| | | | | |
|---|--------------|--------------|--------------------|----|
| | | 2 | 10 2 | 10 |
| | 3 | 3 | | 6 |
| - | | 7 | 9 | |
| | | | | |
| | | 2 | 5 | 7 |

③ 327 - 269

| | | | |
|---|--------------|--------------|----|
| | | | 10 |
| | 2 | 1 | 10 |
| | 3 | 2 | 7 |
| - | 2 | 6 | 9 |
| | | | |
| | | 5 | 8 |

④ 204 - 7

| | | | |
|---|--------------|---------------|----|
| | | | 9 |
| | 1 | 10 | 10 |
| | 2 | 0 | 4 |
| - | | | 7 |
| | | | |
| | 1 | 9 | 7 |

⑤ 841 - 82

| | | | |
|---|--------------|--------------|----|
| | | 10 | |
| | 7 | 3 | 10 |
| | 8 | 4 | 1 |
| - | | 8 | 2 |
| | | | |
| | 7 | 5 | 9 |

⑥ 925 - 349

| | | | |
|---|--------------|--------------|----|
| | | 10 | |
| | 8 | 1 | 10 |
| | 9 | 2 | 5 |
| - | 3 | 4 | 9 |
| | | | |
| | 5 | 7 | 6 |

