

# 小数の意味と表し方 4

◎ 水のかさをぬる

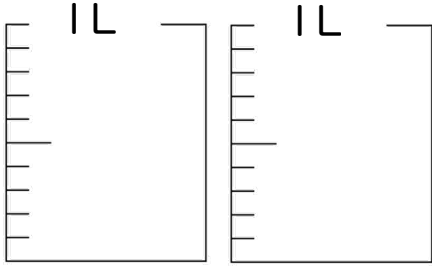
14

日にち：            月            日

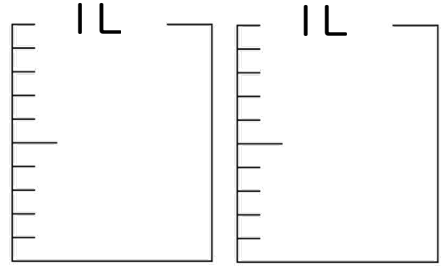
名まえ \_\_\_\_\_

## 1 水のかさだけ色を塗りましょう

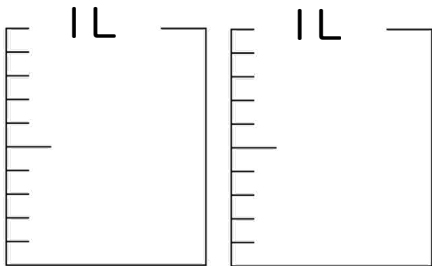
① 0.3 L



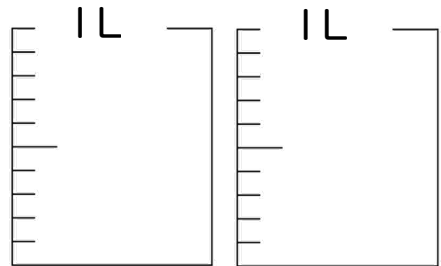
③ 0.1 L



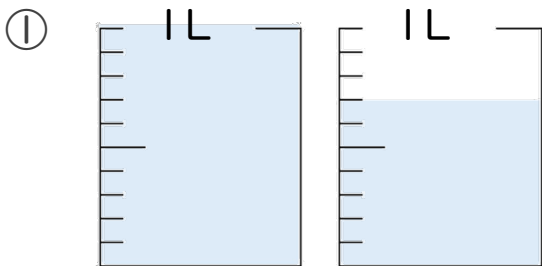
② 1.7 L



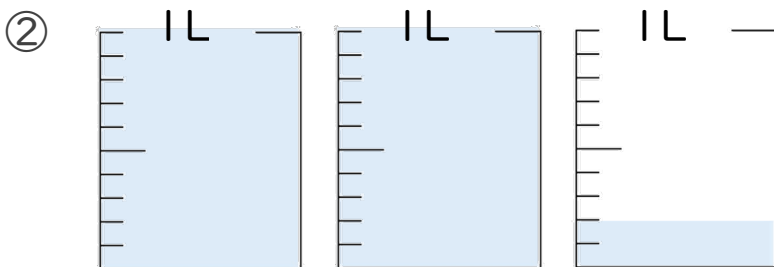
④ 1.8 L



## 2 水のかさは、何Lでしょう。




答え \_\_\_\_\_ L



答え \_\_\_\_\_ L





# 小数の意味と表し方 4

◎ 水のかさをぬる

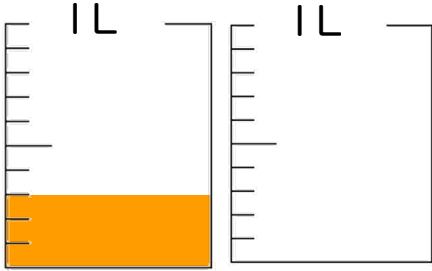
14

日にち：            月            日

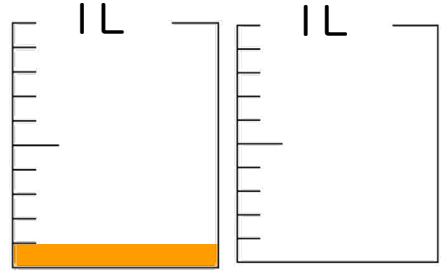
名まえ \_\_\_\_\_

## 1 水のかさだけ色を塗りましょう

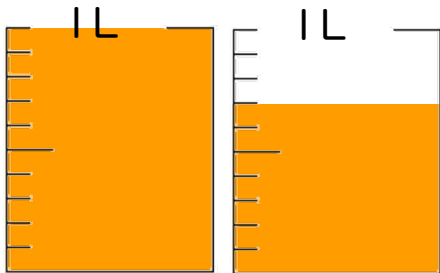
① 0.3 L



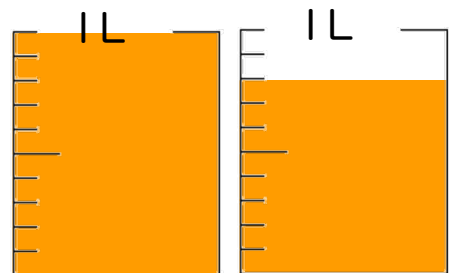
③ 0.1 L



② 1.7 L

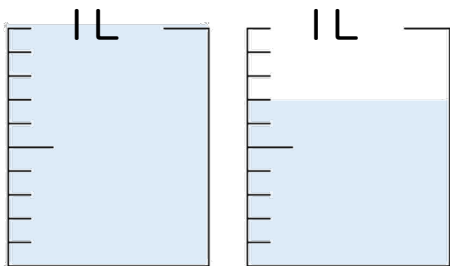


④ 1.8 L



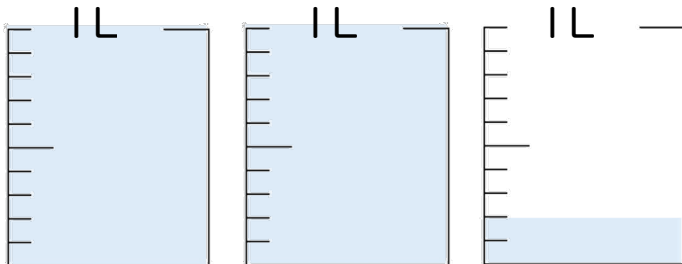
## 2 水のかさは、何Lでしょう。

①



答え 1.7 L

②



答え 2.2 L

