




# 小数のたし算とひき算 11

● 差が整数か真小数になる筆算



目指せ90点!



名まえ \_\_\_\_\_

1 次の計算をしましょう。(各5点)

①  $4.4 - 3.5 =$

②  $9.5 - 4.5 =$

③  $8.4 - 3.4 =$

④  $2.1 - 1.2 =$

2 次の計算をしましょう。(各10点)

①

	4	.	2
-	3	.	6
<hr/>			

②

	6	.	7
-	4	.	8
<hr/>			


③

	9	.	
-	2	.	2
<hr/>			

④  $9.7 - 6.7$


⑤  $8.6 - 4$

⑥  $2.2 - 1.4$



⑦  $7.6 - 3.4$

⑧  $7.9 - 3.9$






# 小数のたし算とひき算 11

● 差が整数か真小数になる筆算

15

目指せ90点!



名まえ \_\_\_\_\_

1 次の計算をしましょう。(各5点)

①  $4.4 - 3.5 = 0.9$

②  $9.5 - 4.5 = 5$

③  $8.4 - 3.4 = 5$

④  $2.1 - 1.2 = 0.9$

2 次の計算をしましょう。(各10点)

① 
$$\begin{array}{r} 4.2 \\ - 3.6 \\ \hline 0.6 \end{array}$$

② 
$$\begin{array}{r} 6.7 \\ - 4.8 \\ \hline 1.9 \end{array}$$

③ 
$$\begin{array}{r} 9.0 \\ - 2.2 \\ \hline 6.8 \end{array}$$

④  $9.7 - 6.7$

⑤  $8.6 - 4$

⑥  $2.2 - 1.4$

④ 
$$\begin{array}{r} 9.7 \\ - 6.7 \\ \hline 3.0 \end{array}$$

⑤ 
$$\begin{array}{r} 8.6 \\ - 4.0 \\ \hline 4.6 \end{array}$$

⑥ 
$$\begin{array}{r} 2.2 \\ - 1.4 \\ \hline 0.8 \end{array}$$

⑦  $7.6 - 3.4$

⑧  $7.9 - 3.9$

⑦ 
$$\begin{array}{r} 7.6 \\ - 3.4 \\ \hline 4.2 \end{array}$$

⑧ 
$$\begin{array}{r} 7.9 \\ - 3.9 \\ \hline 4.0 \end{array}$$