

小数の意味と表し方 3

◎ 水のかさ (帯小数)

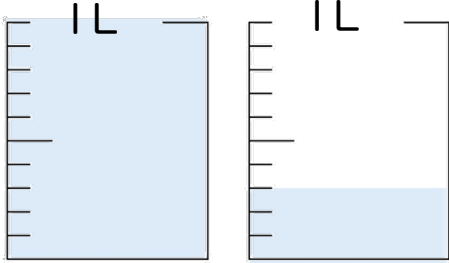


日にち： 月 日

名まえ _____

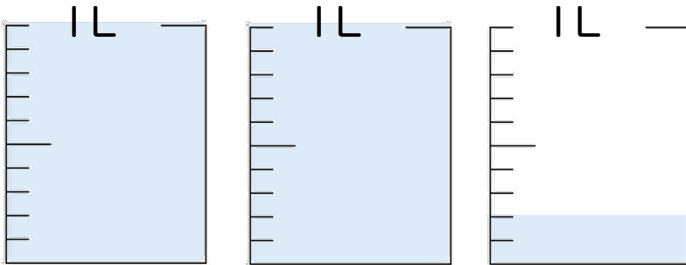
・ 水のかさは、何Lでしょう。(うすい字はなぞりましょう。)

①



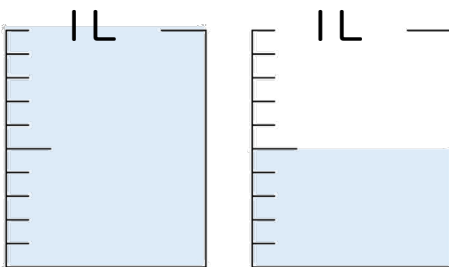
答え 1.3 L

②



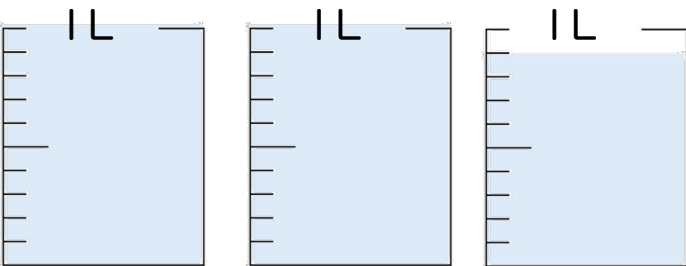
答え _____ L

③



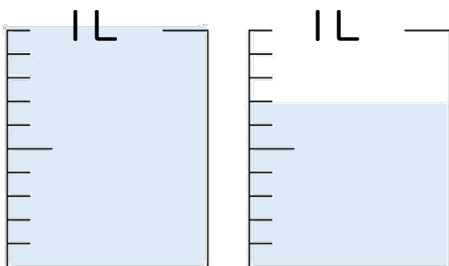
答え _____ L

④




答え _____ L

⑤



答え _____ L





小数の意味と表し方 3

◎ 水のかさ (帯小数)

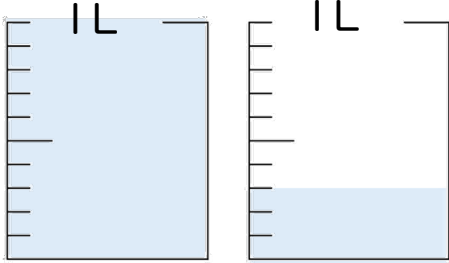
15

日にち： 月 日

名まえ _____

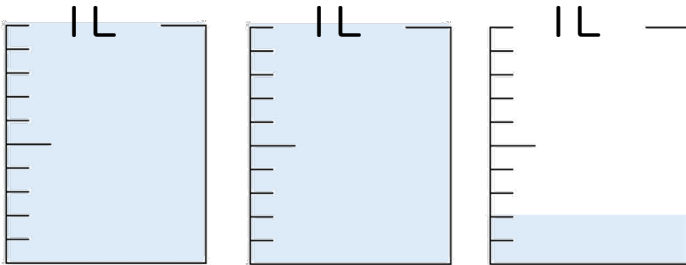
・ 水のかさは、何Lでしょう。(うすい字はなぞりましょう。)

①



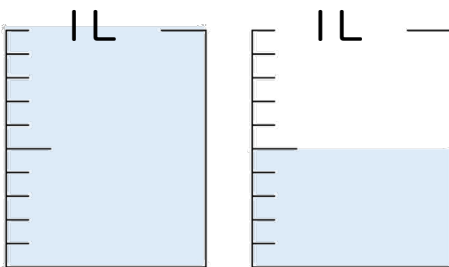
答え 1.3 L

②



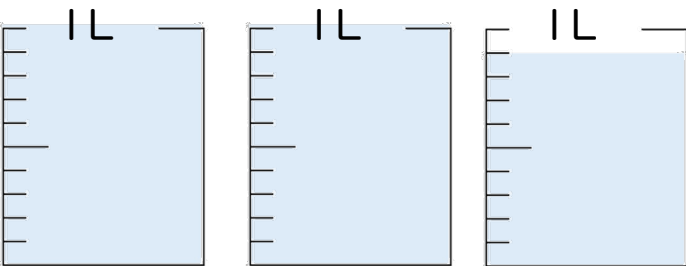
答え 2.2 L

③



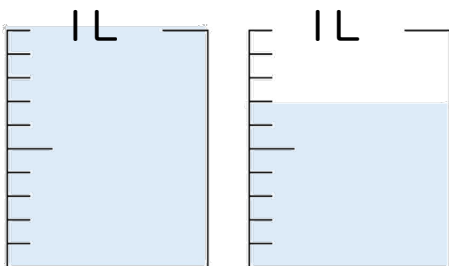
答え 1.5 L

④



答え 2.9 L

⑤



答え 1.7 L

