




たし算と
ひき算の筆算 13

● 3けた-1けた
(くり下がりがりあり)

15

目指せ90点!




名まえ _____

・ 次の計算を筆算でしましょう。(①・②各10点/③~⑥各20点)


$$\begin{array}{r} \textcircled{1} \quad 635 \\ - \quad 45 \\ \hline \end{array}$$

$$\begin{array}{r} \textcircled{2} \quad 920 \\ - \quad 7 \\ \hline \end{array}$$


$$\textcircled{3} \quad 856 - 92$$



$$\textcircled{4} \quad 763 - 8$$



$$\textcircled{5} \quad 983 - 7$$



$$\textcircled{6} \quad 510 - 4$$





たし算と
ひき算の筆算 13

◎ 3けた-1けた
(くり下がりがり)

15

目指せ90点!



名まえ

・ 次の計算を筆算でしましょう。(①・②各10点/③~⑥各20点)

$$\begin{array}{r} \text{①} \quad \begin{array}{r} 5 10 \\ \cancel{6} 3 5 \\ - 4 5 \\ \hline 5 9 0 \end{array} \end{array}$$

$$\begin{array}{r} \text{②} \quad \begin{array}{r} 1 10 \\ 9 \cancel{2} 0 \\ - 7 \\ \hline 9 1 3 \end{array} \end{array}$$

③ 856 - 92

	7	10	
	8	5	6
-		9	2
<hr/>			
	7	6	4

④ 763 - 8

		5	10
	7	6	3
-			8
<hr/>			
	7	5	5

⑤ 983 - 7

		7	10
	9	8	3
-			7
<hr/>			
	9	7	6

⑥ 510 - 4

		0	10
	5	1	0
-			4
<hr/>			
	5	0	6

