



たし算と
ひき算の筆算 15

● 3けた - 2けた
(十の位が0)

15

目指せ90点!



名まえ

・ 次の計算を筆算でしましょう。



(①・②各10点/③~⑥各20点)

①
$$\begin{array}{r} 506 \\ - \quad 8 \\ \hline \end{array}$$

②
$$\begin{array}{r} 301 \\ - \quad 57 \\ \hline \end{array}$$



③ $900 - 46$

④ $605 - 499$



⑤ $702 - 98$

⑥ $600 - 3$





たし算と
ひき算の筆算 15

● 3けた - 2けた
(十の位が0)

15

目指せ90点!



名まえ

・ 次の計算を筆算でしましょう。

(①・②各10点/③~⑥各20点)

①

$$\begin{array}{r} 4 \cancel{10} 10 \\ \cancel{5} \cancel{0} 6 \\ - 8 \\ \hline 4 \ 9 \ 8 \end{array}$$

②

$$\begin{array}{r} 2 \cancel{10} 10 \\ \cancel{3} \cancel{0} 1 \\ - 5 \ 7 \\ \hline 2 \ 4 \ 4 \end{array}$$

③ $900 - 46$

$$\begin{array}{r} 8 \cancel{10} 10 \\ \cancel{9} \cancel{0} 0 \\ - 4 \ 6 \\ \hline 8 \ 5 \ 4 \end{array}$$

④ $605 - 499$

$$\begin{array}{r} 5 \cancel{10} 10 \\ \cancel{6} \cancel{0} 5 \\ - 4 \ 9 \ 9 \\ \hline 1 \ 0 \ 6 \end{array}$$

⑤ $702 - 98$

$$\begin{array}{r} 6 \cancel{10} 10 \\ \cancel{7} \cancel{0} 2 \\ - 9 \ 8 \\ \hline 6 \ 0 \ 4 \end{array}$$

⑥ $600 - 3$

$$\begin{array}{r} 5 \cancel{10} 10 \\ \cancel{6} \cancel{0} 0 \\ - 3 \\ \hline 5 \ 9 \ 7 \end{array}$$

