




## かけ算の筆算 31

● 十の位が0の  
3けた×2けたのかけ算




目指せ75点!




名まえ \_\_\_\_\_

・筆算で計算しましょう。(各25点)


①  $308 \times 79$




③  $301 \times 24$



②  $507 \times 63$



④  $854 \times 72$





# かけ算の筆算 31

● 十の位が0の  
3けた × 2けたのかけ算



目指せ75点!



名まえ \_\_\_\_\_

・筆算で計算しましょう。(各25点)

①  $308 \times 79$

		3	0	8
	×		7	9
		2	7	7 <sup>7</sup> 2
2	1	5 <sup>5</sup>	6	
2	4 <sup>1</sup>	3 <sup>1</sup>	3	2

③  $301 \times 24$

		3	0	1	
	×		2	4	
		1	2	0	4
6	0	2			
7	2	2	4		

②  $507 \times 63$

		5	0	7
	×		6	3
		1	5	2 <sup>2</sup> 1
3	0	4 <sup>4</sup>	2	
3	1	9	4	1

④  $854 \times 72$

			8	5	4		
			×		7	2	
				1	7 <sup>1</sup>	0	8
5	9 <sup>3</sup>	7 <sup>2</sup>	8				
6 <sup>1</sup>	1 <sup>1</sup>	4	8	8			