

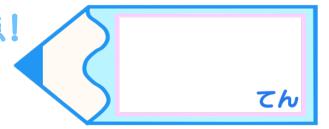


小数のたし算とひき算2

◎和が1以上のたし算



目指せ80点!



名まえ _____

・次の計算をしましょう。

① $0.4 + 0.3 =$

② $0.3 + 0.6 =$

③ $0.5 + 0.8 =$

④ $0.8 + 0.2 =$

⑤ $0.5 + 0.6 =$

⑥ $0.6 + 0.9 =$

⑦ $0.7 + 0.3 =$

⑧ $0.6 + 0.7 =$


⑨ $0.2 + 0.4 =$

⑩ $0.6 + 0.8 =$

⑪ $0.3 + 0.9 =$

⑫ $0.4 + 0.7 =$



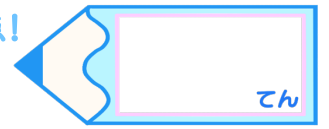


小数のたし算とひき算2

◎和が1以上のたし算

16

目指せ80点!



名まえ

・次の計算をしましょう。

① $0.4 + 0.3 = 0.7$

⑦ $0.7 + 0.3 = 1$

② $0.3 + 0.6 = 0.9$

⑧ $0.6 + 0.7 = 1.3$

③ $0.5 + 0.8 = 1.3$

⑨ $0.2 + 0.4 = 0.6$

④ $0.8 + 0.2 = 1$

⑩ $0.6 + 0.8 = 1.4$

⑤ $0.5 + 0.6 = 1.1$

⑪ $0.3 + 0.9 = 1.2$

⑥ $0.6 + 0.9 = 1.5$

⑫ $0.4 + 0.7 = 1.1$

