

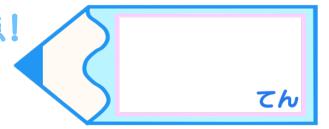


小数のたし算とひき算 I

◎和が1以下のたし算



目指せ80点!



名まえ _____

・次の計算をしましょう。

① $0.3 + 0.1 =$

② $0.1 + 0.5 =$

③ $0.6 + 0.3 =$

④ $0.4 + 0.3 =$

⑤ $0.7 + 0.3 =$

⑥ $0.2 + 0.4 =$

⑦ $0.2 + 0.3 =$

⑧ $0.4 + 0.5 =$


⑨ $0.3 + 0.1 =$

⑩ $0.4 + 0.2 =$

⑪ $0.4 + 0.4 =$

⑫ $0.8 + 0.2 =$



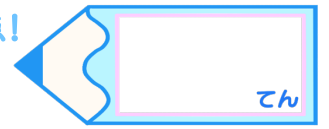


小数のたし算とひき算 I

◎和が1以下のたし算



目指せ80点!



名まえ _____

・次の計算をしましょう。

① $0.3 + 0.1 = 0.4$

⑦ $0.2 + 0.3 = 0.5$

② $0.1 + 0.5 = 0.6$

⑧ $0.4 + 0.5 = 0.9$

③ $0.6 + 0.3 = 0.9$

⑨ $0.3 + 0.1 = 0.4$

④ $0.4 + 0.3 = 0.7$

⑩ $0.4 + 0.2 = 0.6$

⑤ $0.7 + 0.3 = 1$

⑪ $0.4 + 0.4 = 0.8$

⑥ $0.2 + 0.4 = 0.6$

⑫ $0.8 + 0.2 = 1$

