



三角形と角 10

● 角を大きい
じゅんにならべる



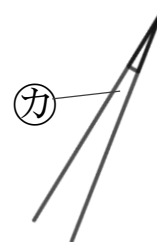
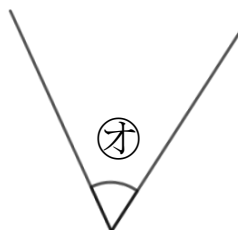
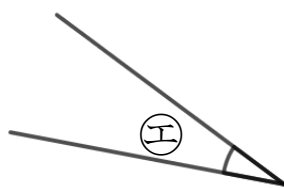
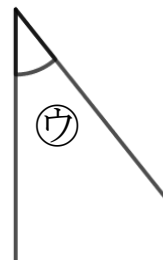
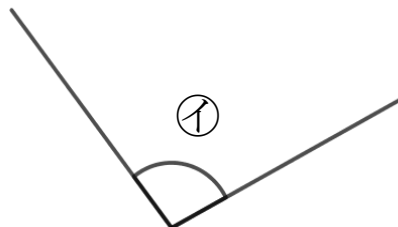
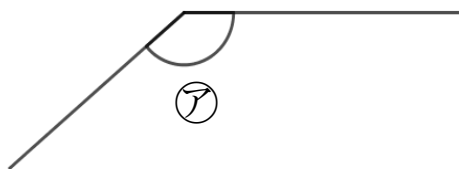
めざせ75点!



名まえ

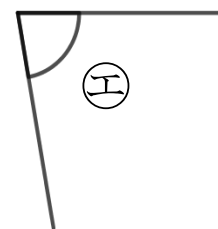
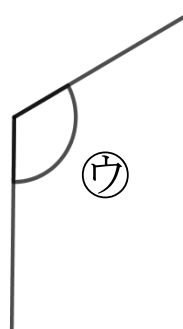
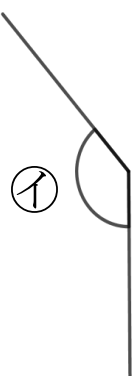
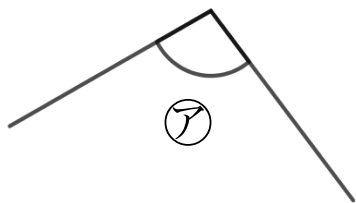
1 次の角の大きさをくらべて、大きいじゅんにいしましょう。

(50点)



答え： → → → → →

2 次の図で、次の角を見つけて、①~③で答えましょう。(各25点)



① いちばん小さい角

答え：

② いちばん大きい角

答え：



三角形と角 10

● 角を大きい
じゅんにならべる



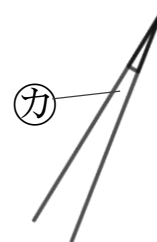
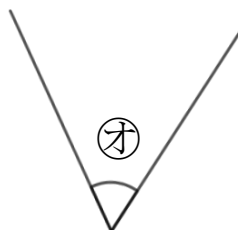
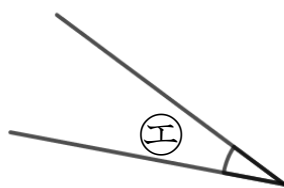
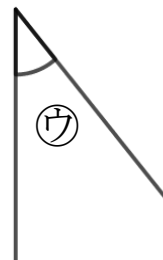
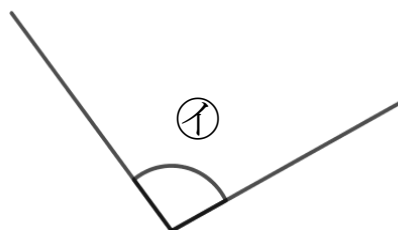
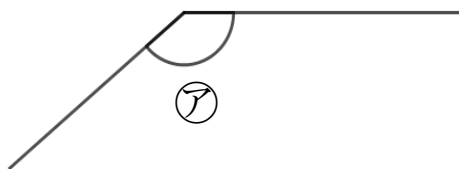
めざせ75点!



名まえ

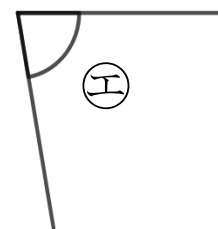
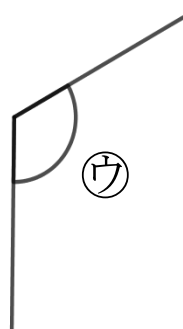
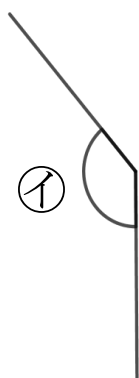
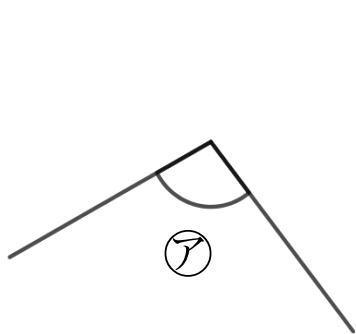
1 次の角の大きさをくらべて、大きいじゅんにいしましょう。

(50点)



答え： **ア** → **イ** → **オ** → **ウ** → **エ** → **カ**

2 次の図で、次の角を見つけて、**ア**~**エ**で答えましょう。(各25点)



① いちばん小さい角

答え： **エ**

② いちばん大きい角

答え： **イ**