

たし算と  
ひき算の筆算 14

● 3けたのひき算  
(十の位が0)

16

目指せ90点!



名まえ



・ 次の計算を筆算でしましょう。 (①・②各10点/③~⑥各20点)

$$\begin{array}{r} \textcircled{1} \quad 603 \\ - 194 \\ \hline \end{array}$$

$$\begin{array}{r} \textcircled{2} \quad 393 \\ - \quad 8 \\ \hline \end{array}$$



$$\textcircled{3} \quad 405 - 237$$

$$\textcircled{4} \quad 603 - 286$$



$$\textcircled{5} \quad 814 - 5$$

$$\textcircled{6} \quad 702 - 474$$





たし算と  
ひき算の筆算 14

● 3けたのひき算  
(十の位が0)

16

目指せ90点!



名まえ

・ 次の計算を筆算でしましょう。

(①・②各10点/③~⑥各20点)

$$\begin{array}{r} \phantom{0} 5 \overset{9}{\cancel{10}} 10 \\ \textcircled{1} \quad \cancel{6} \cancel{0} 3 \\ - \phantom{0} 1 9 4 \\ \hline \phantom{0} 4 0 9 \end{array}$$

$$\begin{array}{r} \phantom{0} \phantom{0} 8 10 \\ \textcircled{2} \quad \phantom{0} 3 \overset{9}{\cancel{9}} 3 \\ - \phantom{0} \phantom{0} \phantom{0} 8 \\ \hline \phantom{0} 3 8 5 \end{array}$$

③ 405 - 237

	3	<del>10</del>	10
	<del>4</del>	<del>0</del>	5
-	2	3	7
	1	6	8

④ 603 - 286

	5	<del>10</del>	10
	<del>6</del>	<del>0</del>	3
-	2	8	6
	3	1	7

⑤ 814 - 5

		0	10
	8	<del>1</del>	4
-			5
	8	0	9

⑥ 702 - 474

	6	<del>10</del>	10
	<del>7</del>	<del>0</del>	2
-	4	7	4
	2	2	8

