



たし算と
ひき算の筆算 13

● 3けた-1けた
(くり下がりがりあり)

16

目指せ90点!



名まえ



・次の計算を筆算でしましょう。(①・②各10点/③~⑥各20点)

$$\begin{array}{r} \textcircled{1} \quad 764 \\ - \quad 73 \\ \hline \end{array}$$

$$\begin{array}{r} \textcircled{2} \quad 432 \\ - \quad 8 \\ \hline \end{array}$$



$$\textcircled{3} \quad 918 - 43$$

$$\textcircled{4} \quad 874 - 6$$



$$\textcircled{5} \quad 396 - 9$$

$$\textcircled{6} \quad 614 - 5$$





たし算と
ひき算の筆算 13

◎ 3けた-1けた
(くり下がりがり)

16

目指せ90点!



名まえ

・次の計算を筆算でしましょう。

(①・②各10点/③~⑥各20点)

$$\begin{array}{r} \textcircled{1} \quad \overset{6}{\cancel{7}} \overset{10}{6} 4 \\ - \quad \quad 7 3 \\ \hline \quad \quad 6 9 1 \end{array}$$

$$\begin{array}{r} \textcircled{2} \quad \quad \overset{2}{\cancel{3}} \overset{10}{2} \\ - \quad \quad \quad 8 \\ \hline \quad \quad 4 2 4 \end{array}$$

$$\textcircled{3} \quad 918 - 43$$

	$\overset{8}{\cancel{9}}$	$\overset{10}{1}$	8
-		4	3
<hr/>			
	8	7	5

$$\textcircled{4} \quad 874 - 6$$

	8	$\overset{6}{\cancel{7}}$	$\overset{10}{4}$
-			6
<hr/>			
	8	6	8

$$\textcircled{5} \quad 396 - 9$$

		$\overset{8}{\cancel{9}}$	$\overset{10}{6}$
-			9
<hr/>			
	3	8	7

$$\textcircled{6} \quad 614 - 5$$

		$\overset{0}{\cancel{4}}$	$\overset{10}{4}$
-			5
<hr/>			
	6	0	9