



たし算と  
ひき算の筆算 15

● 3けた - 2けた  
(十の位が0)

16

目指せ90点!



名まえ

・ 次の計算を筆算でしましょう。



(①・②各10点/③~⑥各20点)

$$\begin{array}{r} \textcircled{1} \quad 605 \\ - \quad \quad 8 \\ \hline \end{array}$$

$$\begin{array}{r} \textcircled{2} \quad 403 \\ - \quad \quad 47 \\ \hline \end{array}$$



$$\textcircled{3} \quad 902 - 97$$

$$\textcircled{4} \quad 504 - 287$$



$$\textcircled{5} \quad 807 - 79$$

$$\textcircled{6} \quad 703 - 5$$





たし算と  
ひき算の筆算 15

● 3けた-2けた  
(十の位が0)

16

目指せ90点!



名まえ

・ 次の計算を筆算でしましょう。

(①・②各10点/③~⑥各20点)

$$\begin{array}{r} \phantom{0}9 \\ 5 \cancel{0} 10 \\ \textcircled{1} \quad \cancel{6} \cancel{0} 5 \\ - \phantom{0} \phantom{0} 8 \\ \hline 5 \phantom{0} 7 \end{array}$$

$$\begin{array}{r} \phantom{0}9 \\ 3 \cancel{0} 10 \\ \textcircled{2} \quad \cancel{4} \cancel{0} 3 \\ - \phantom{0} \phantom{0} 4 7 \\ \hline 3 \phantom{0} 6 \end{array}$$

③ 902 - 97

	8	<del>0</del>	10
	<del>9</del>	<del>0</del>	2
-		9	7
	8	0	5

④ 504 - 287

	4	<del>0</del>	10
	<del>5</del>	<del>0</del>	4
-	2	8	7
	2	1	7

⑤ 807 - 79

	7	<del>0</del>	10
	<del>8</del>	<del>0</del>	7
-		7	9
	7	2	8

⑥ 703 - 5

	6	<del>0</del>	10
	<del>7</del>	<del>0</del>	3
-			5
	6	9	8

