




たし算と
ひき算の筆算 18

● 4けたのひき算
(くり下がり2回まで)

16

目指せ90点!



名まえ



・ 次の計算を筆算でしましょう。(①・②各10点/③~⑥各20点)

$$\begin{array}{r} \textcircled{1} \quad 4653 \\ - 1079 \\ \hline \end{array}$$

$$\begin{array}{r} \textcircled{2} \quad 6582 \\ - 5325 \\ \hline \end{array}$$



$$\textcircled{3} \quad 7609 - 2186$$

$$\textcircled{4} \quad 9194 - 4259$$



$$\textcircled{5} \quad 5637 - 3325$$

$$\textcircled{6} \quad 4216 - 3460$$





たし算と
ひき算の筆算 18

● 4けたのひき算
(くり下がり2回まで)

16

目指せ90点!



名まえ

・ 次の計算を筆算でしましょう。(①・②各10点/③~⑥各20点)

$$\begin{array}{r} 10 \\ 5 4 10 \\ ① \quad 4 \cancel{6} \cancel{5} 3 \\ - 1 7 9 \\ \hline 3 5 7 4 \end{array}$$

$$\begin{array}{r} 7 10 \\ ② \quad 6 5 \cancel{8} 2 \\ - 5 3 2 5 \\ \hline 1 2 5 7 \end{array}$$

③ 7609 - 2186

④ 9194 - 4259

		5	10	
	7	6	0	9
-	2	1	8	6
	5	4	2	3

		8	10	8	10
	9	1	9	4	
-	4	2	5	9	
	4	9	3	5	

⑤ 5637 - 3325

⑥ 4216 - 3460

	5	6	3	7
-	3	3	2	5
	2	3	1	2

		10		
	3	1	10	
	4	2	1	6
-	3	4	6	0
		7	5	6