



分数 3

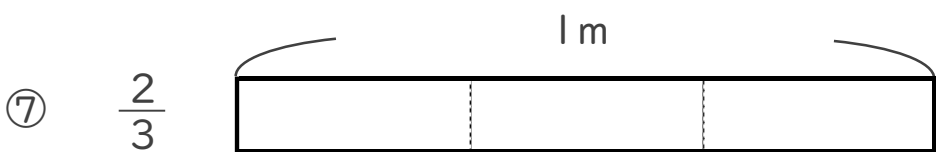
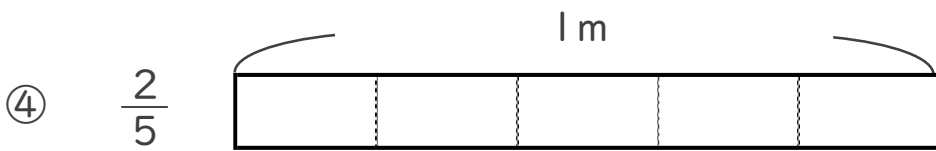
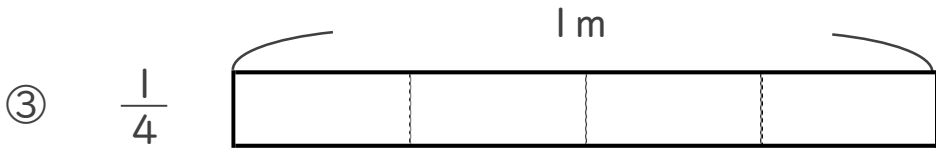

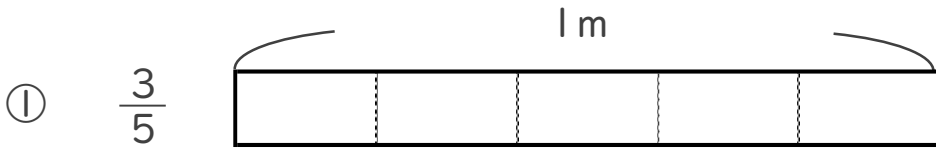
● 分数の長さの色ぬり



日にち： 月 日

名まえ _____

・ 次の長さの分だけ色をぬりましょう。





分数 3

● 分数の長さの色ぬり



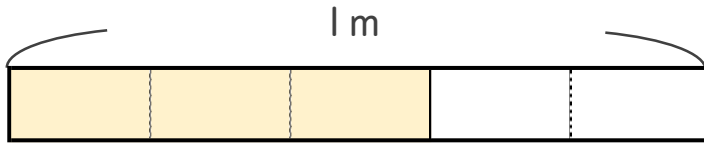
日にち： 月 日

名まえ _____

・ 次の長さの分だけ色をぬりましょう。

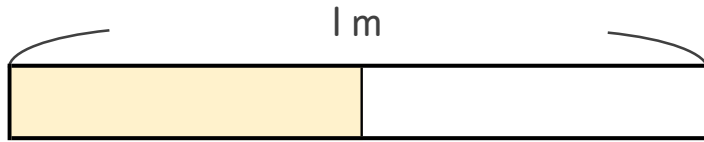
①

$\frac{3}{5}$



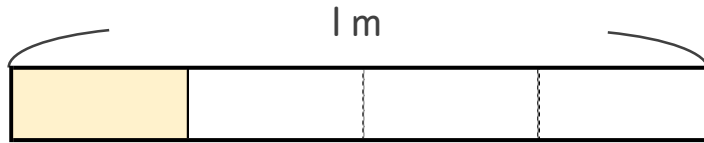
②

$\frac{1}{2}$



③

$\frac{1}{4}$



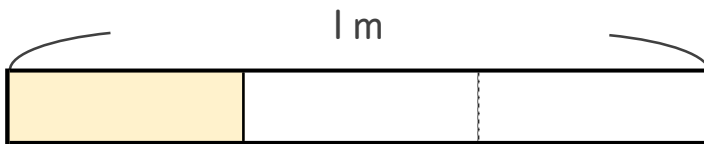
④

$\frac{2}{5}$



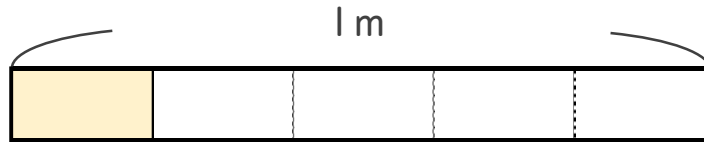
⑤

$\frac{1}{3}$



⑥

$\frac{1}{5}$



⑦

$\frac{2}{3}$

