



# 小数のたし算とひき算 12

たし算ひき算の筆算まとめ



日にち： 月 日

名まえ \_\_\_\_\_

・ 次の計算をしなさい。

① 
$$\begin{array}{r} 9.1 \\ - 4 \\ \hline \end{array}$$

② 
$$\begin{array}{r} 5.7 \\ + 4.9 \\ \hline \end{array}$$

③ 
$$\begin{array}{r} 3.5 \\ + 6 \\ \hline \end{array}$$

④ 
$$\begin{array}{r} 4.8 \\ + 9.4 \\ \hline \end{array}$$




⑤ 
$$\begin{array}{r} 7.6 \\ - 6.8 \\ \hline \end{array}$$

⑥ 
$$\begin{array}{r} 6 \\ - 4.7 \\ \hline \end{array}$$

⑦  $5.3 + 7.8$

⑧  $6.8 - 5.9$



⑨  $6 + 4.7$



⑩  $4.2 - 3.2$

⑪  $7.5 - 4$

⑫  $8.8 + 1.2$





# 小数のたし算とひき算 12

◎ たし算ひき算の筆算まとめ



日にち： 月 日

名まえ \_\_\_\_\_

・ 次の計算をしなさい。

$$\begin{array}{r} \text{①} \quad \quad 9.1 \\ - 4.0 \\ \hline \quad 5.1 \end{array}$$

$$\begin{array}{r} \text{②} \quad \quad 5.7 \\ + 4.9 \\ \hline 10.6 \end{array}$$

$$\begin{array}{r} \text{③} \quad \quad 3.5 \\ + 6.0 \\ \hline \quad 9.5 \end{array}$$

$$\begin{array}{r} \text{④} \quad \quad 4.8 \\ + 9.4 \\ \hline 14.2 \end{array}$$

$$\begin{array}{r} \text{⑤} \quad \quad 7.6 \\ - 6.8 \\ \hline \quad 0.8 \end{array}$$

$$\begin{array}{r} \text{⑥} \quad \quad 6.0 \\ - 4.7 \\ \hline \quad 1.3 \end{array}$$

⑦  $5.3 + 7.8$

⑧  $6.8 - 5.9$

⑨  $6 + 4.7$

$$\begin{array}{r} \quad 5.3 \\ + 7.8 \\ \hline 13.1 \end{array}$$

$$\begin{array}{r} \quad 6.8 \\ - 5.9 \\ \hline \quad 0.9 \end{array}$$

$$\begin{array}{r} \quad 6.0 \\ + 4.7 \\ \hline 10.7 \end{array}$$

⑩  $4.2 - 3.2$

⑪  $7.5 - 4$

⑫  $8.8 + 1.2$

$$\begin{array}{r} \quad 4.2 \\ - 3.2 \\ \hline \quad 1.0 \end{array}$$

$$\begin{array}{r} \quad 7.5 \\ - 4.0 \\ \hline \quad 3.5 \end{array}$$

$$\begin{array}{r} \quad 8.8 \\ + 1.2 \\ \hline 10.0 \end{array}$$

