

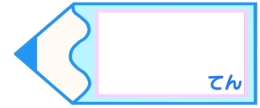


小数のかけ算 10

● かけ算とたし算ひき算の
計算の順じよ

15



目指せ75点!




名まえ

・ 次の計算をしましょう。(各25点)



① $3.1 \times 8 - 5.3$



② $4.4 + 17.5 \times 2$



③ $1.6 \times 2 + 6$



④ $7.4 - 1.7 \times 3$



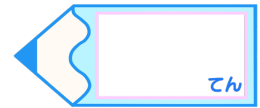


小数のかけ算 10

● かけ算とたし算ひき算の
計算の順じよ

15

目指せ75点!



名まえ

・ 次の計算をしましょう。(各25点)

$$\begin{aligned} \textcircled{1} \quad & 3.1 \times 8 - 5.3 \\ & = 24.8 - 5.3 \\ & = 19.5 \end{aligned}$$

	3	.	1	
×			8	
<hr/>				
	2	4	.	8

	2	4	.	8	
-			5	.	3
<hr/>					
		1	9	.	5

$$\begin{aligned} \textcircled{2} \quad & 4.4 + 17.5 \times 2 \\ & = 4.4 + 35 \\ & = 39.4 \end{aligned}$$

	1	7	.	5
×				2
<hr/>				
	3	5	.	0

		4	.	4
+	3	5		
<hr/>				
	3	9	.	4

$$\begin{aligned} \textcircled{3} \quad & 1.6 \times 2 + 6 \\ & = 3.2 + 6 \\ & = 9.2 \end{aligned}$$

	1	.	6
×			2
<hr/>			
	3	.	2

	3	.	2
+	6		
<hr/>			
	9	.	2

$$\begin{aligned} \textcircled{4} \quad & 7.4 - 1.7 \times 3 \\ & = 7.4 - 5.1 \\ & = 2.3 \end{aligned}$$

	1	.	7
×			3
<hr/>			
	5	.	1

	7	.	4
-	5	.	1
<hr/>			
	2	.	3