

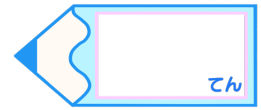


# 小数のかけ算 00

● カッコのある計算の順じよ

# 15

目指せ75点!



名まえ \_\_\_\_\_

・ 次の計算をしましょう。(各25点)


①  $(9.53 - 7.8) \times 3$


②  $(1.43 + 1.27) \times 4$


③  $5.8 + 16.8 \times 2$


④  $3.1 \times 6 - 2.9$

--	--

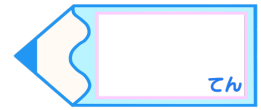


# 小数のかけ算 00

◎ カッコのある計算の順じよ

# 15

目指せ75点!



名まえ \_\_\_\_\_

・ 次の計算をしましょう。(各25点)

$$\begin{aligned} \textcircled{1} \quad & (9.53 - 7.8) \times 3 \\ & = 1.73 \times 3 \\ & = 5.19 \end{aligned}$$

	<del>9</del>	5	3
-	7	8	
<hr/>			
	1	7	3

	1	7	3
×			3
<hr/>			
	5	1	9

$$\begin{aligned} \textcircled{2} \quad & (1.43 + 1.27) \times 4 \\ & = 2.7 \times 4 \\ & = 10.8 \end{aligned}$$

	1	4	3
+	1	2	7
<hr/>			
	2	7	0

	2	7	
×		4	
<hr/>			
	1	0	8

$$\begin{aligned} \textcircled{3} \quad & 5.8 + 16.8 \times 2 \\ & = 5.8 + 33.6 \\ & = 39.4 \end{aligned}$$

	1	6	8
×			2
<hr/>			
	3	3	6

	5	8	
+	3	3	6
<hr/>			
	3	9	4

$$\begin{aligned} \textcircled{4} \quad & 3.1 \times 6 - 2.9 \\ & = 18.6 - 2.9 \\ & = 15.7 \end{aligned}$$

	3	1	
×		6	
<hr/>			
	1	8	6

	1	<del>8</del>	6
-		2	9
<hr/>			
	1	5	7