



# 小数のわり算22

わり進み  
(帯小数を2桁の整数でわる)

15


目指せ80点!



名まえ

・ 次の計算をわりきれぬまでしましょう。(各20点)


①  $58.8 \div 35$




②  $22 \div 8$





③  $69 \div 15$




③  $58.5 \div 18$



④  $16.2 \div 24$



すらすらぷりんと



# 小数のわり算22

わり進み  
(帯小数を2桁の整数でわる)

15

目指せ80点!



名まえ

・ 次の計算をわりきれぬまでしましょう。(各20点)

①  $58.8 \div 35$

			1.68	
35	)	58.80		
		35		
		238		
		210		
		280		
		280		
			0	

②  $22 \div 8$

			2.75	
8	)	22.00		
		16		
		60		
		56		
		40		
		40		
			0	

③  $69 \div 15$



			4.6	
15	)	69.0		
		60		
		90		
		90		
			0	

③  $58.5 \div 18$

			3.25	
18	)	58.50		
		54		
		45		
		36		
		90		
		90		
			0	

④  $16.2 \div 24$

			0.675	
24	)	16.200		
		144		
		180		
		168		
		120		
		120		
			0	



すらすらぷりん