




# 小数のわり算4

● 十の位に商がたたない  
小数÷整数

15

目指せ80点!



名まえ \_\_\_\_\_

・ 次の計算をしなさい。(各10点)

①

3	)	1	0	.	2

②

8	)	5	1	.	2

③

7	)	4	4	.	1

④

4	)	1	5	.	2

⑤  $69.6 \div 6$



⑥  $36.8 \div 4$

⑦  $23.5 \div 5$

⑧  $58.4 \div 8$

⑨  $88.9 \div 7$

⑩  $88.5 \div 3$





# 小数のわり算4

● 十の位に商がたたない  
小数÷整数

15

目指せ80点!



名まえ \_\_\_\_\_

・ 次の計算をしなさい。(各10点)

①

$$\begin{array}{r} 3 \overline{) 10.2} \\ \underline{9} \phantom{0} \\ 12 \\ \underline{12} \\ 0 \end{array}$$

②

$$\begin{array}{r} 8 \overline{) 51.2} \\ \underline{48} \phantom{0} \\ 32 \\ \underline{32} \\ 0 \end{array}$$

③

$$\begin{array}{r} 7 \overline{) 44.1} \\ \underline{42} \phantom{0} \\ 21 \\ \underline{21} \\ 0 \end{array}$$

④

$$\begin{array}{r} 4 \overline{) 15.2} \\ \underline{12} \phantom{0} \\ 32 \\ \underline{32} \\ 0 \end{array}$$

⑤  $69.6 \div 6$

$$\begin{array}{r} 11.6 \\ 6 \overline{) 69.6} \\ \underline{6} \phantom{0} \\ 9 \\ \underline{6} \\ 36 \\ \underline{36} \\ 0 \end{array}$$

⑥  $36.8 \div 4$

$$\begin{array}{r} 9.2 \\ 4 \overline{) 36.8} \\ \underline{36} \phantom{0} \\ 8 \\ \underline{8} \\ 0 \end{array}$$

⑦  $23.5 \div 5$

$$\begin{array}{r} 4.7 \\ 5 \overline{) 23.5} \\ \underline{20} \phantom{0} \\ 35 \\ \underline{35} \\ 0 \end{array}$$

⑧  $58.4 \div 8$

$$\begin{array}{r} 7.3 \\ 8 \overline{) 58.4} \\ \underline{56} \phantom{0} \\ 24 \\ \underline{24} \\ 0 \end{array}$$

⑨  $88.9 \div 7$

$$\begin{array}{r} 12.7 \\ 7 \overline{) 88.9} \\ \underline{7} \phantom{0} \\ 18 \\ \underline{14} \\ 49 \\ \underline{49} \\ 0 \end{array}$$

⑩  $88.5 \div 3$

$$\begin{array}{r} 29.5 \\ 3 \overline{) 88.5} \\ \underline{6} \phantom{0} \\ 28 \\ \underline{27} \\ 15 \\ \underline{15} \\ 0 \end{array}$$

