

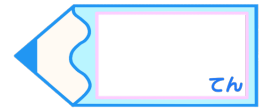


小数のわり算 10

● 商が小数第二位の真小数

15

目指せ80点!




名まえ

・ 次の計算をしなさい。(各20点)

① $0.54 \div 6$




② $0.68 \div 17$






③ $4.72 \div 8$



④ $9.24 \div 7$



⑤ $0.24 \div 4$



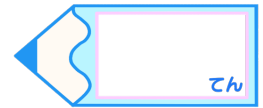


小数のわり算 10

● 商が小数第二位の真小数

15

目指せ80点!



名まえ

・ 次の計算をしなさい。(各20点)

① $0.54 \div 6$

	0	.	0	9	
6)	0	.	5	4
			5	4	
				0	

② $0.68 \div 17$

		0	.	0	4	
1	7)	0	.	6	8
			6	8		
					0	

③ $4.72 \div 8$

	0	.	5	9	
8)	4	.	7	2
		4	0	8	
			7	2	
			7	2	
				0	

④ $9.24 \div 7$

	1	.	3	2		
7)	9	.	2	4	
		7				
			2	2		
			2	1		
				1	4	
					1	4
						0

⑤ $0.24 \div 4$

	0	.	0	6	
4)	0	.	2	4
			2	4	
				0	

