


# 小数のたし算とひき算8

# 15

◎小数のたし算ひき算の筆算まとめ

目指せ80点!



名まえ

・ 次の計算をしなさい。(各10点)

①

	2	.	4	9
+	0	.	7	
<hr/>				

②

	1	3		
+		2	.	9 1
<hr/>				

③

	4	8	.	1	9
-		3	.	6	5
<hr/>					

④

	6	2		
-	1	.	1	5
<hr/>				

⑤

	2	.	9	2
-	1	.	7	2
<hr/>				

⑥

	2	3	.	6	7
+		1	.	3	3
<hr/>					


⑦  $4.58 + 5.2$


⑧  $3.012 - 1.337$


⑨  $5.22 + 0.9$


⑩  $6.5 - 1.71$







# 小数のたし算とひき算8

# 15

◎小数のたし算ひき算の筆算まとめ

目指せ80点!



名まえ

・ 次の計算をなさい。(各10点)

①

	2	4	9
+	0	7	
<hr/>			
	3	1	9

②

	1	3	
+		2	9
<hr/>			
	1	5	9

③

	4	8	1	9
-		3	6	5
<hr/>				
	4	4	5	4

④

	6	2	0
-	1	1	5
<hr/>			
	5	0	5

⑤

	2	9	2
-	1	7	2
<hr/>			
	1	2	0

⑥

	2	3	6	7
+		1	3	3
<hr/>				
	2	5	0	0

⑦  $4.58 + 5.2$

	4	5	8
+	5	2	
<hr/>			
	9	7	8

⑧  $3.012 - 1.337$

	3	0	1	2
-	1	3	3	7
<hr/>				
	1	6	7	5

⑨  $5.22 + 0.9$

	5	2	2
+	0	9	
<hr/>			
	6	1	2

⑩  $6.50 - 1.71$

	6	5	0
-	1	7	1
<hr/>			
	4	7	9

