



角の大きさ 9

● 360° から
引いて求める角度

15

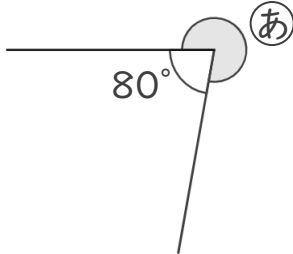
めざせ75点!



名まえ _____

・ ①の角度を、計算で求めましょう。(各25点)

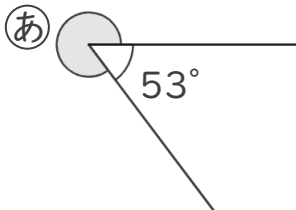
①



式:

答え ()

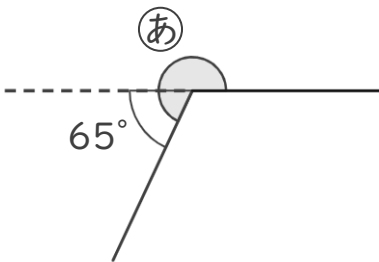
②



式:

答え ()

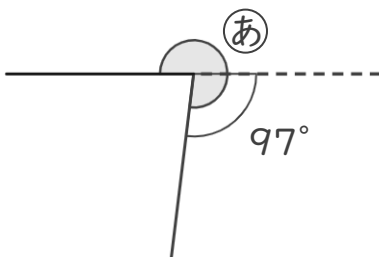
③



式:

答え ()

④



式:

答え ()





角の大きさ 9

● 360° から
引いて求める角度

15

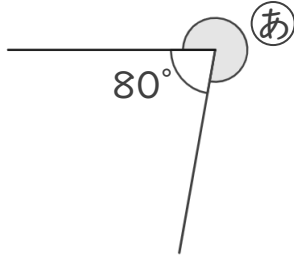
めざせ75点!



名まえ _____

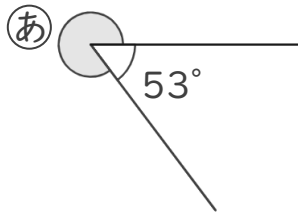
・ ①の角度を、計算で求めましょう。(各25点)

①



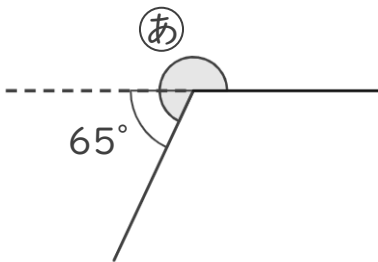
式: $360^\circ - 80^\circ = 280^\circ$ 答え (280°)

②



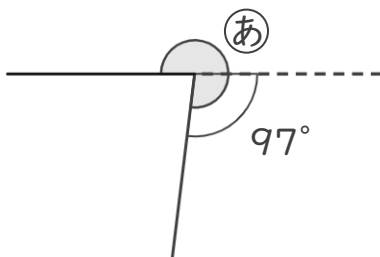
式: $360^\circ - 53^\circ = 307^\circ$ 答え (307°)

③



式: $180^\circ + 65^\circ = 245^\circ$ 答え (245°)

④



式: $180^\circ + 97^\circ = 277^\circ$ 答え (277°)

