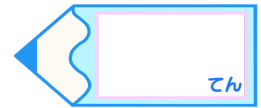


小数のかけ算 11

◎ カッコのある計算の順じよ

16

目指せ75点!



名まえ _____


・ 次の計算をしましょう。(各25点)

① $(5.37 - 4.1) \times 4$

② $(1.74 + 2.36) \times 4$

③ $6.3 + 17.3 \times 4$

④ $1.5 \times 5 - 3.6$

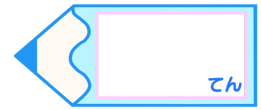


小数のかけ算①①

○ カッコのある計算の順じよ

16

目指せ75点!



名まえ

・ 次の計算をしましょう。(各25点)

$$\begin{aligned} \textcircled{1} \quad & (5.37 - 4.1) \times 4 \\ & = 1.27 \times 4 \\ & = 5.08 \end{aligned}$$

$$\begin{array}{r} 5.37 \\ - 4.1 \\ \hline 1.27 \end{array}$$

$$\begin{array}{r} 1.27 \\ \times 4 \\ \hline 5.08 \end{array}$$

$$\begin{aligned} \textcircled{2} \quad & (1.74 + 2.36) \times 4 \\ & = 4.1 \times 4 \\ & = 16.4 \end{aligned}$$

$$\begin{array}{r} 1.74 \\ + 2.36 \\ \hline 4.10 \end{array}$$

$$\begin{array}{r} 4.1 \\ \times 4 \\ \hline 16.4 \end{array}$$

$$\begin{aligned} \textcircled{3} \quad & 6.3 + 17.3 \times 4 \\ & = 6.3 + 69.2 \\ & = 75.5 \end{aligned}$$

$$\begin{array}{r} 17.3 \\ \times 4 \\ \hline 69.2 \end{array}$$

$$\begin{array}{r} 6.3 \\ + 69.2 \\ \hline 75.5 \end{array}$$

$$\begin{aligned} \textcircled{4} \quad & 1.5 \times 5 - 3.6 \\ & = 7.5 - 3.6 \\ & = 3.9 \end{aligned}$$

$$\begin{array}{r} 1.5 \\ \times 5 \\ \hline 7.5 \end{array}$$

$$\begin{array}{r} 7.5 \\ - 3.6 \\ \hline 3.9 \end{array}$$