




角の大きさ 15

● 三角じょうぎを
重ねて作る角度

16

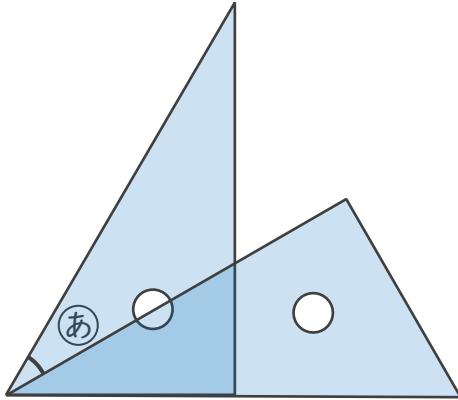
めざせ75点!



名まえ _____

・三角じょうぎのできる ㊦ の角度をもとめましょう。(各25点)

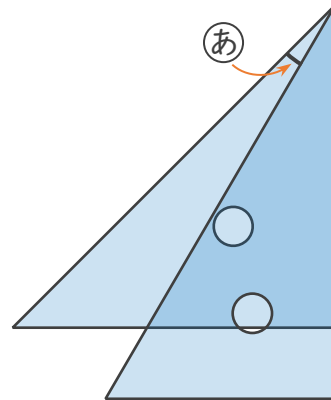
①



式:

答え ()

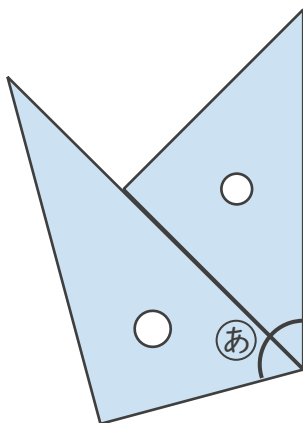
②



式:

答え ()

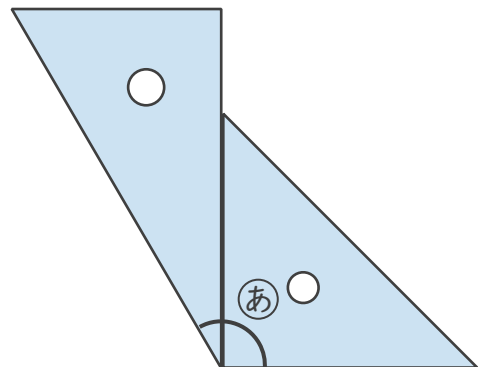
③



式:

答え ()

④



式:

答え ()



角の大きさ 15

● 三角じょうぎを
重ねて作る角度

16

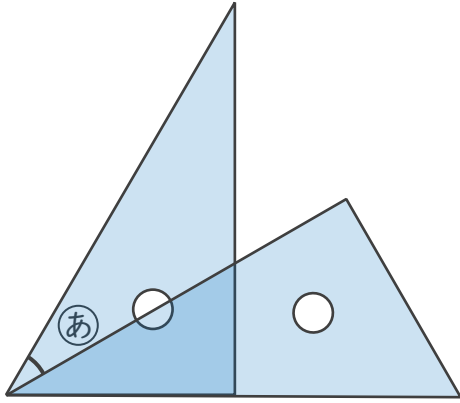
めざせ75点!



名まえ _____

・三角じょうぎのできる ㊦の角度をもとめましょう。(各25点)

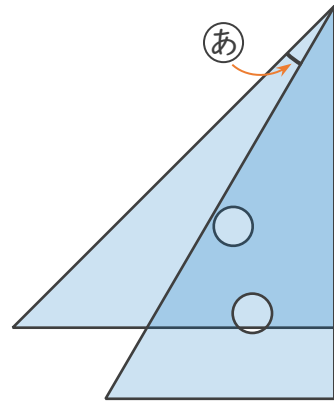
①



式: $60^\circ - 30^\circ = 30^\circ$

答え (30°)

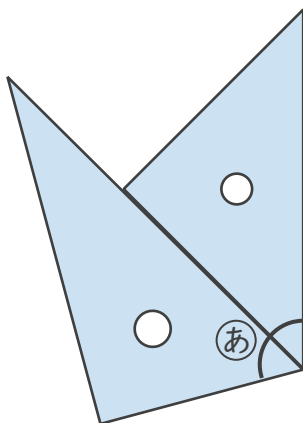
②



式: $45^\circ - 30^\circ = 15^\circ$

答え (15°)

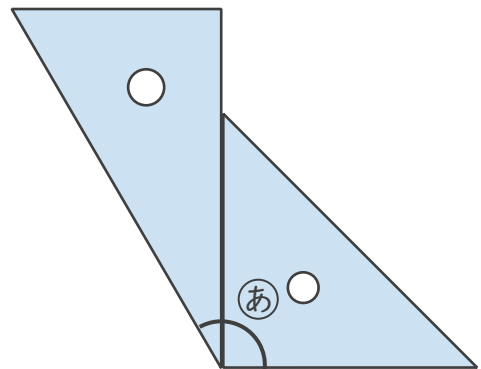
③



式: $60^\circ + 45^\circ = 105^\circ$

答え (105°)

④



式: $30^\circ + 90^\circ = 120^\circ$

答え (120°)

